


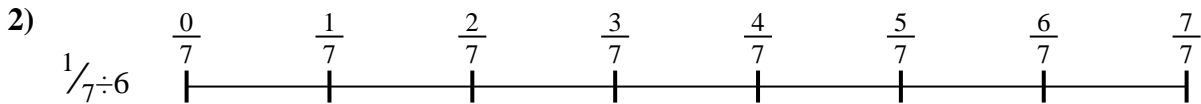


Use the numberline to solve each problem. The first is marked for you.

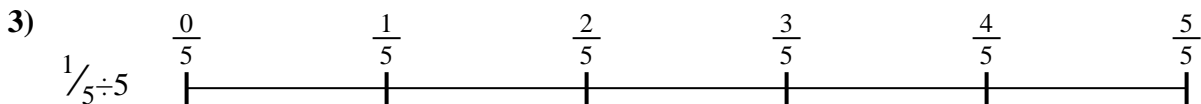
Answers



1. _____



2. _____




3. _____



4. _____



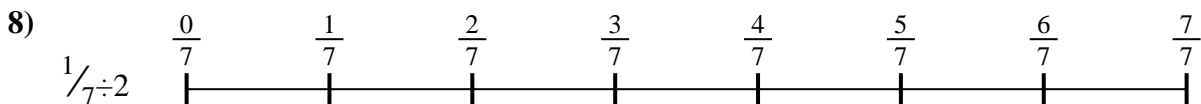
5. _____



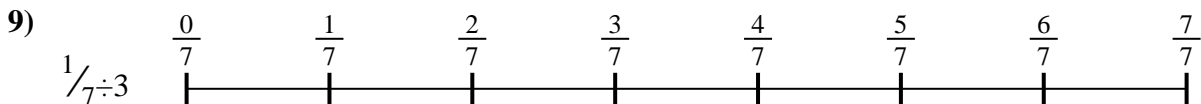
6. _____



7. _____



8. _____

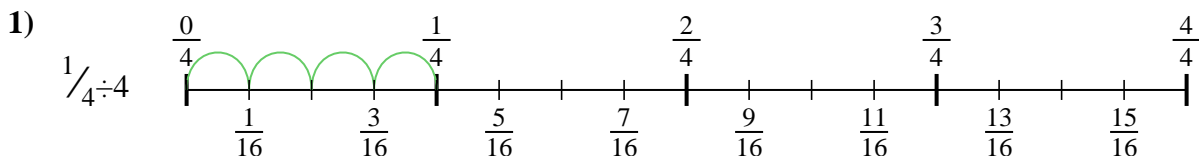


9. _____

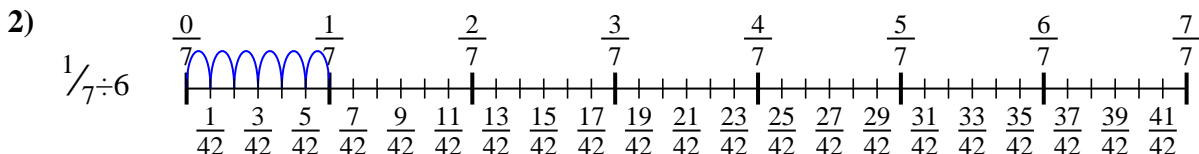


Use the numberline to solve each problem. The first is marked for you.

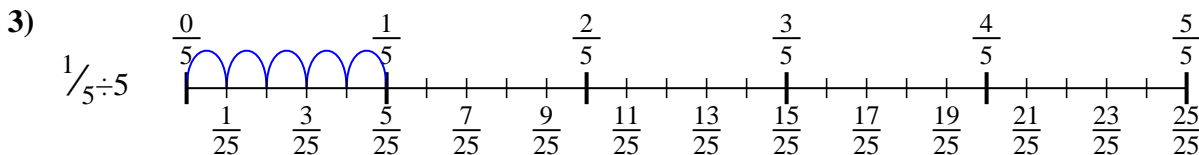
Answers



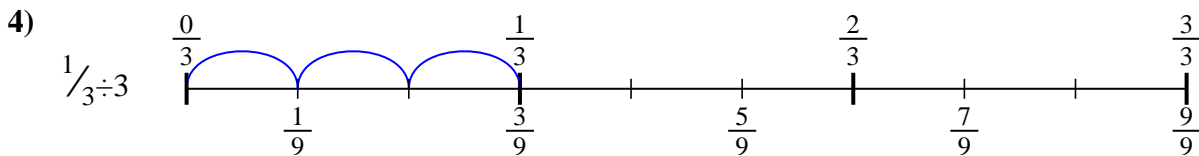
1. $\frac{1}{16}$



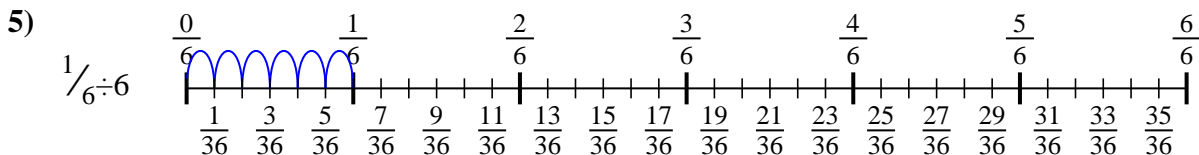
2. $\frac{1}{42}$



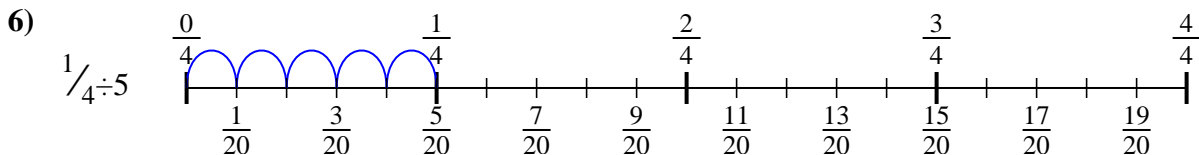
3. $\frac{1}{25}$



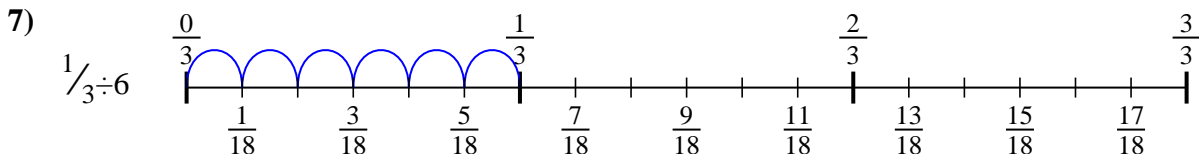
4. $\frac{1}{9}$



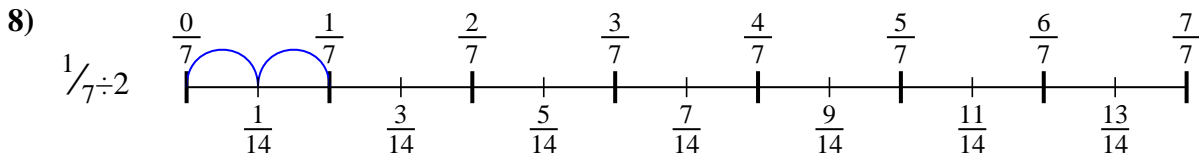
5. $\frac{1}{36}$



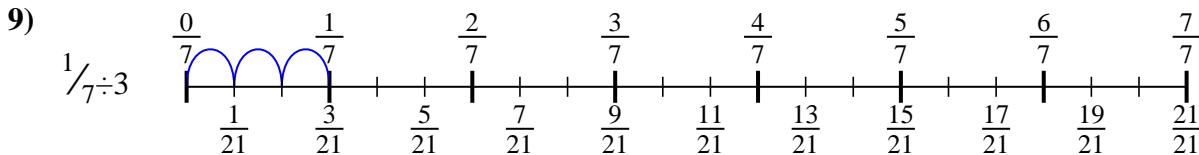
6. $\frac{1}{20}$



7. $\frac{1}{18}$



8. $\frac{1}{14}$



9. $\frac{1}{21}$



Use the numberline to solve each problem. The first is marked for you.

Answers

$\frac{1}{42}$

$\frac{1}{20}$

$\frac{1}{14}$

$\frac{1}{21}$

$\frac{1}{36}$

$\frac{1}{25}$

$\frac{1}{16}$

$\frac{1}{9}$

$\frac{1}{18}$

1. _____
2. _____
3. _____
4. _____
5. _____
6. _____
7. _____
8. _____
9. _____

