

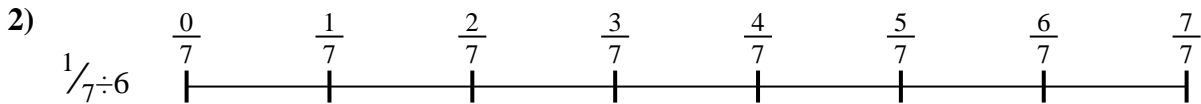


Use the numberline to solve each problem. The first is marked for you.

**Answers**



1. \_\_\_\_\_



2. \_\_\_\_\_



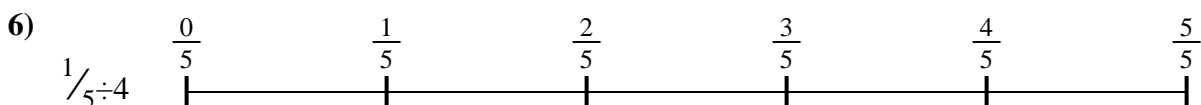
3. \_\_\_\_\_




4. \_\_\_\_\_



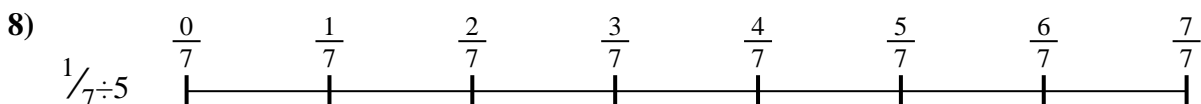
5. \_\_\_\_\_



6. \_\_\_\_\_



7. \_\_\_\_\_



8. \_\_\_\_\_

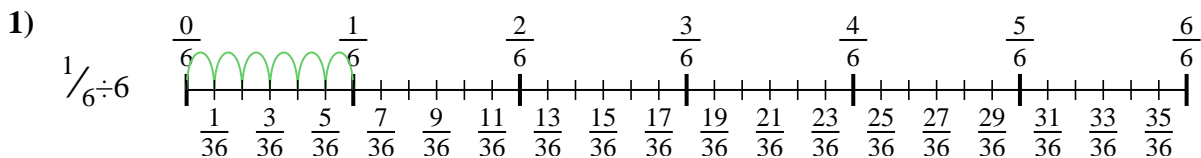


9. \_\_\_\_\_

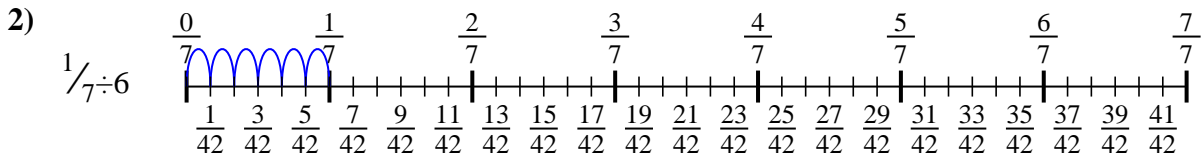


Use the numberline to solve each problem. The first is marked for you.

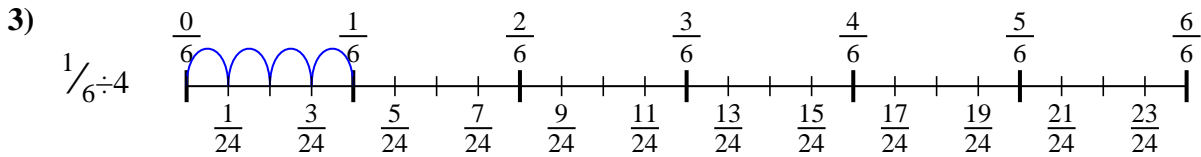
**Answers**



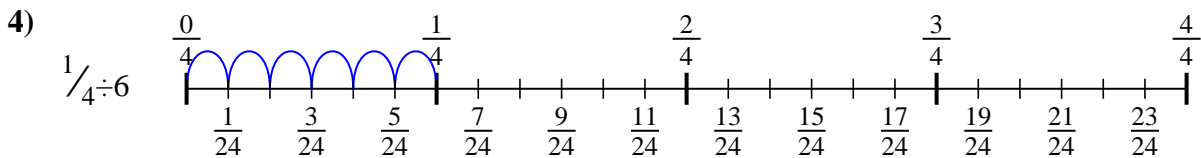
1.  $\frac{1}{36}$



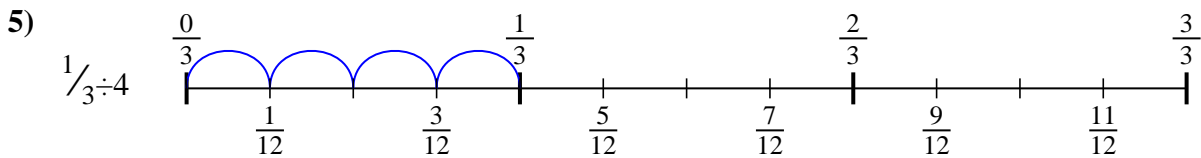
2.  $\frac{1}{42}$



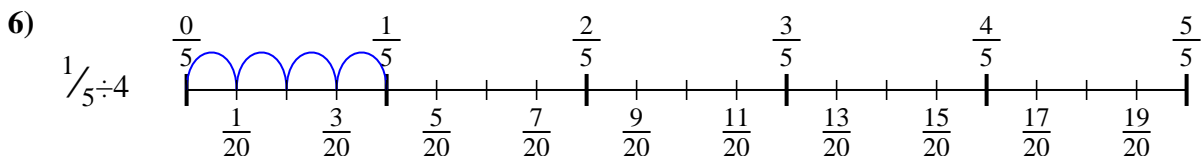
3.  $\frac{1}{24}$



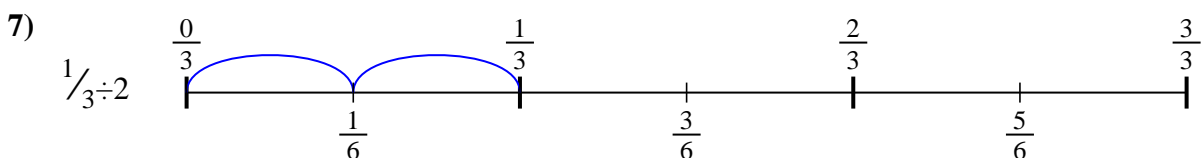
4.  $\frac{1}{24}$



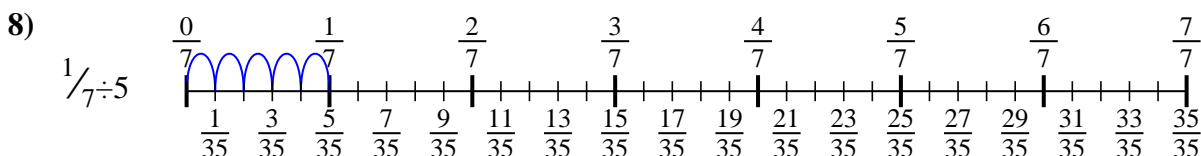
5.  $\frac{1}{12}$



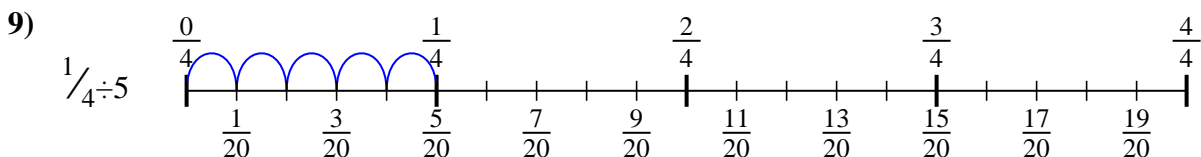
6.  $\frac{1}{20}$



7.  $\frac{1}{6}$



8.  $\frac{1}{35}$



9.  $\frac{1}{20}$



Use the numberline to solve each problem. The first is marked for you.


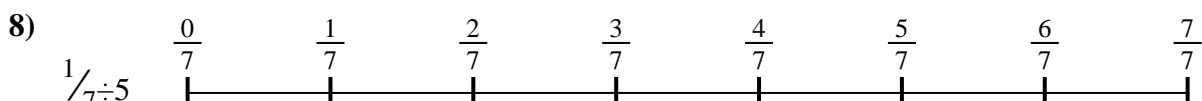
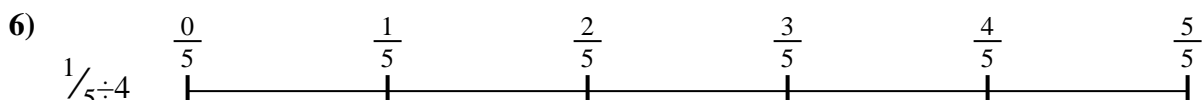


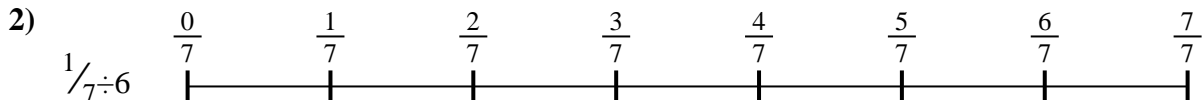
**Answers**

$\frac{1}{35}$   
 $\frac{1}{24}$   
 $\frac{1}{12}$

$\frac{1}{6}$   
 $\frac{1}{36}$

$\frac{1}{24}$   
 $\frac{1}{20}$

$\frac{1}{42}$   
 $\frac{1}{20}$



1. \_\_\_\_\_
2. \_\_\_\_\_
3. \_\_\_\_\_
4. \_\_\_\_\_
5. \_\_\_\_\_
6. \_\_\_\_\_
7. \_\_\_\_\_
8. \_\_\_\_\_
9. \_\_\_\_\_