



Fill in the grid using the chart.

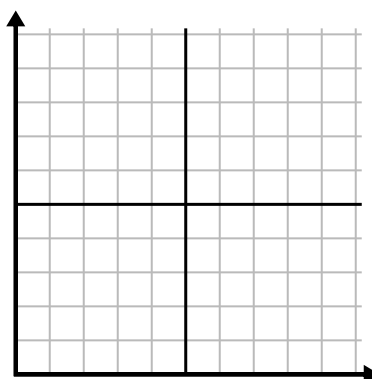
1) 

Month	1	2	3	4	5	6
Electric Bill Price	50	75	250	150	175	25



2) 

Day	1	2	3	4	5	6	7
Youtube Videos Watched	90	210	120	150	60	30	300



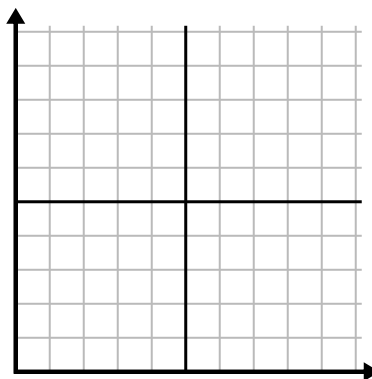
3) 

Week	1	2	3	4	5	6
Hours of TV watched	25	30	15	10	20	50



4) 

Day	1	2	3	4	5	6	7
Meals Sold	900	400	200	800	100	500	300



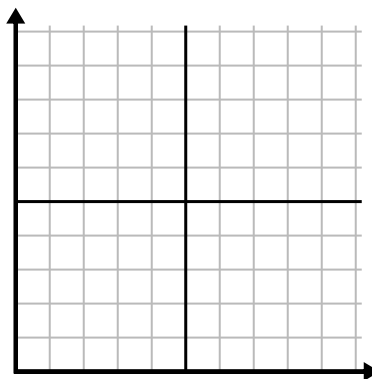
5) 

Week	1	2	3	4	5
Water Used (gallons)	60	80	10	30	20



6) 

Day	1	2	3	4	5
Calories Burned	140	120	180	200	160

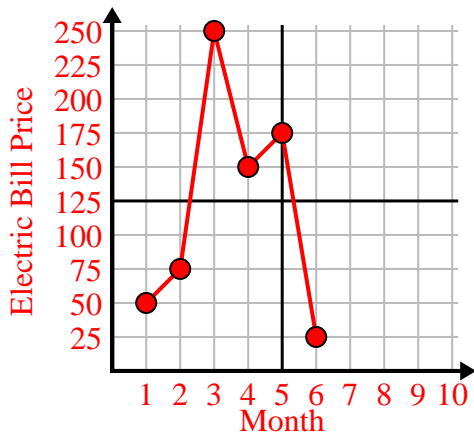




Fill in the grid using the chart.

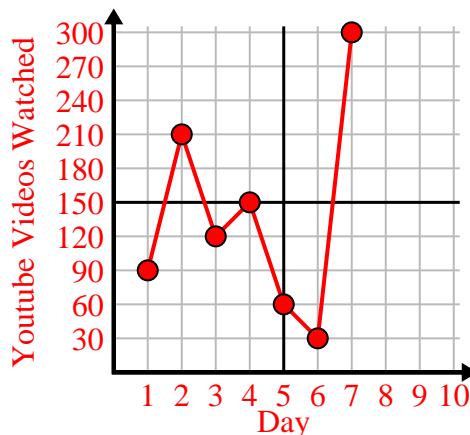
1) 

Month	1	2	3	4	5	6
Electric Bill Price	50	75	250	150	175	25



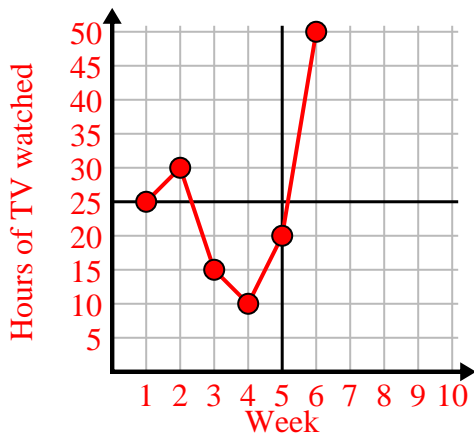
2) 

Day	1	2	3	4	5	6	7
Youtube Videos Watched	90	210	120	150	60	30	300



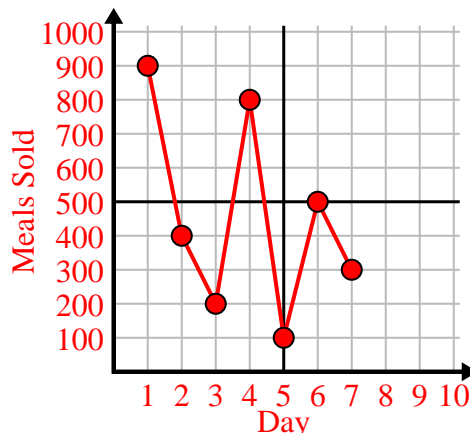
3) 

Week	1	2	3	4	5	6
Hours of TV watched	25	30	15	10	20	50



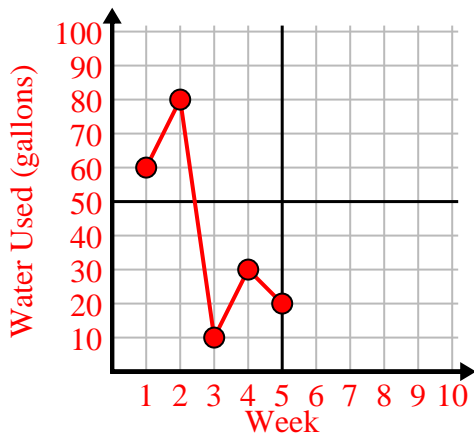
4) 

Day	1	2	3	4	5	6	7
Meals Sold	900	400	200	800	100	500	300



5) 

Week	1	2	3	4	5
Water Used (gallons)	60	80	10	30	20



6) 

Day	1	2	3	4	5
Calories Burned	140	120	180	200	160

