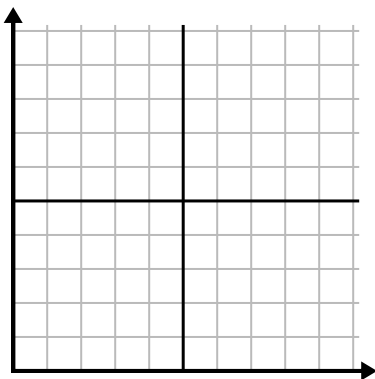




Fill in the grid using the chart.

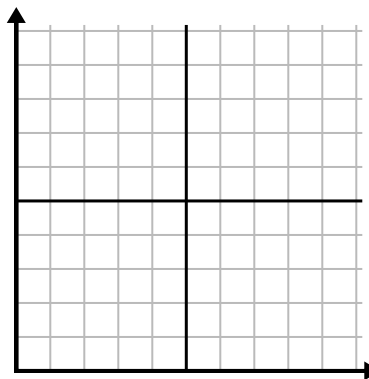
1)

Year	1	2	3	4	5	6
Boxes of Pens Used	10	1	6	2	7	8



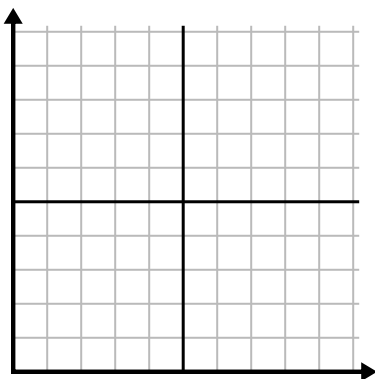
2)

Day	1	2	3	4	5
Texts Sent	25	35	40	15	5



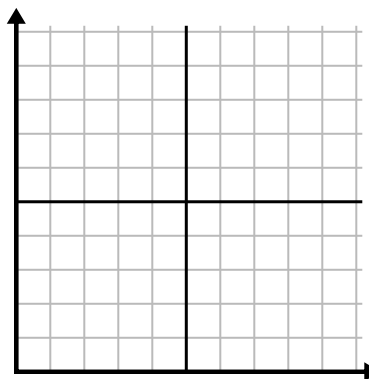
3)

Year	1	2	3	4	5
Ink Cartridges Used	10	4	12	2	14



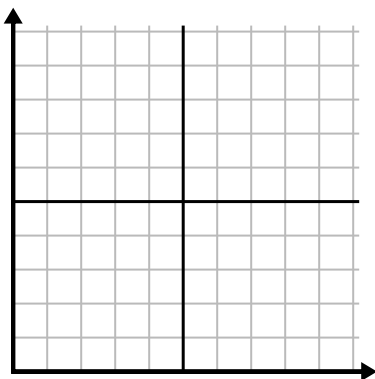
4)

Day	1	2	3	4	5
Youtube Videos Watched	120	60	300	150	30



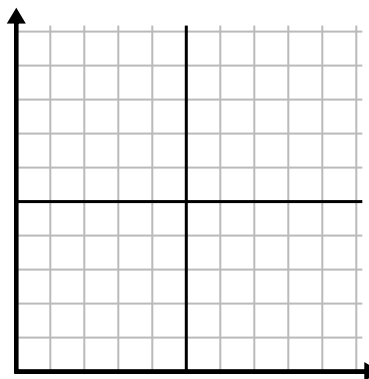
5)

Week	1	2	3	4	5	6	7
Water Used (gallons)	100	50	90	10	60	80	40



6)

Day	1	2	3	4	5	6	7
Money Spent	1	7	3	4	5	6	8

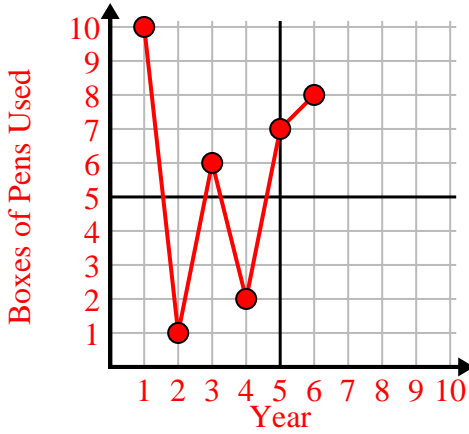




Fill in the grid using the chart.

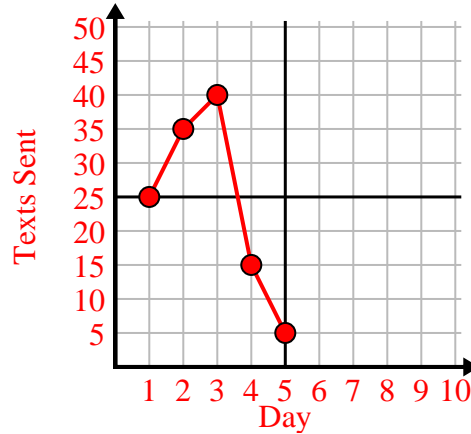
1)

Year	1	2	3	4	5	6
Boxes of Pens Used	10	1	6	2	7	8



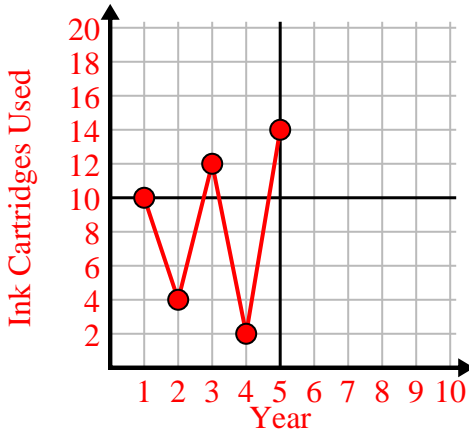
2)

Day	1	2	3	4	5
Texts Sent	25	35	40	15	5



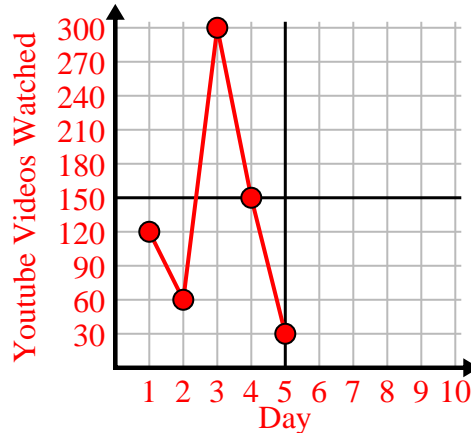
3)

Year	1	2	3	4	5
Ink Cartridges Used	10	4	12	2	14



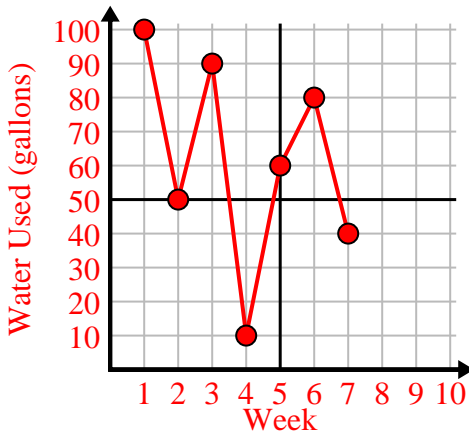
4)

Day	1	2	3	4	5
Youtube Videos Watched	120	60	300	150	30



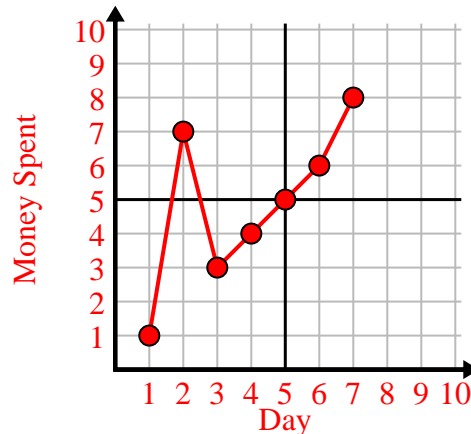
5)

Week	1	2	3	4	5	6	7
Water Used (gallons)	100	50	90	10	60	80	40



6)

Day	1	2	3	4	5	6	7
Money Spent	1	7	3	4	5	6	8

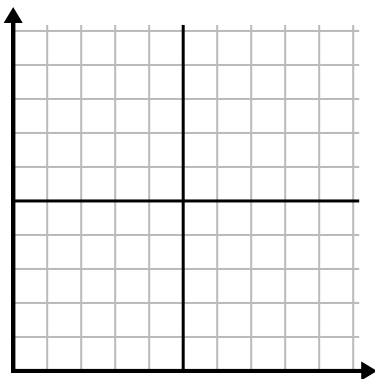




Fill in the grid using the chart.

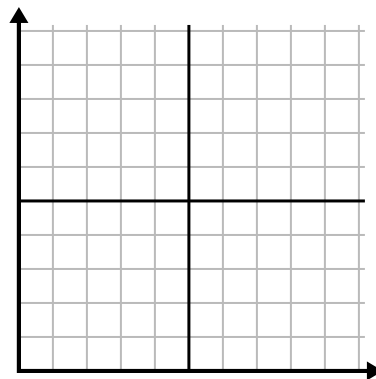
1)

Day	1	2	3	4	5	6	7
Youtube Videos Watched	30	180	270	150	60	90	240



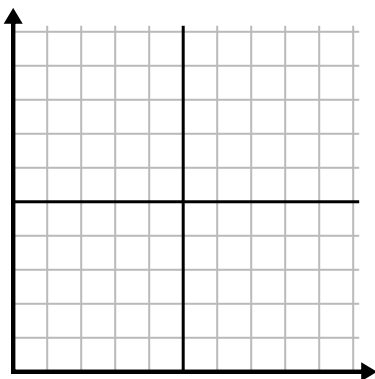
2)

Month	1	2	3	4	5
Electric Bill Price	225	150	75	125	50



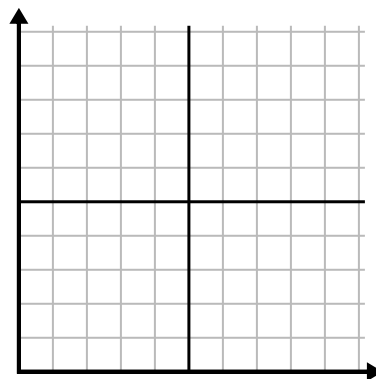
3)

Year	1	2	3	4	5
Ink Cartridges Used	16	2	10	12	8



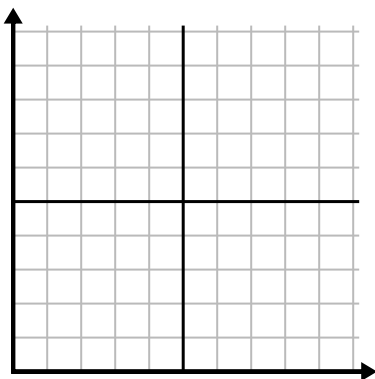
4)

Day	1	2	3	4	5	6
Money Spent	2	7	9	8	5	1



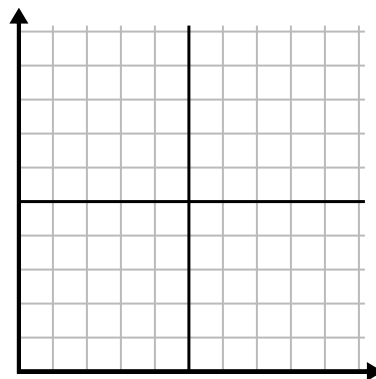
5)

Hour	1	2	3	4	5	6	7
Amount Sold	5	4	2	9	7	6	8



6)

Day	1	2	3	4	5	6
Meals Sold	600	900	700	500	100	400

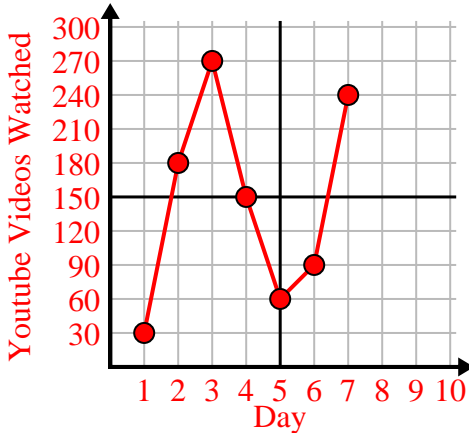




Fill in the grid using the chart.

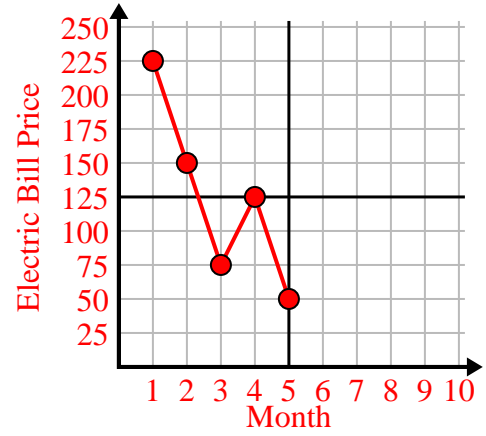
1)

Day	1	2	3	4	5	6	7
Youtube Videos Watched	30	180	270	150	60	90	240



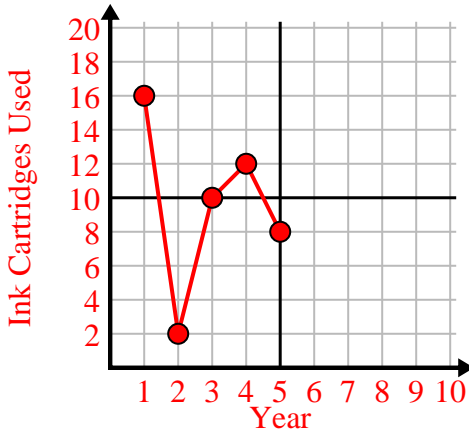
2)

Month	1	2	3	4	5
Electric Bill Price	225	150	75	125	50



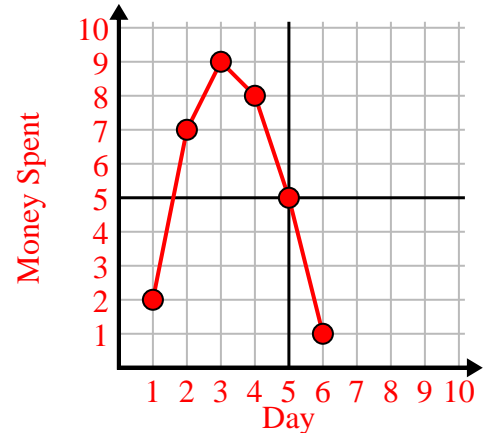
3)

Year	1	2	3	4	5
Ink Cartridges Used	16	2	10	12	8



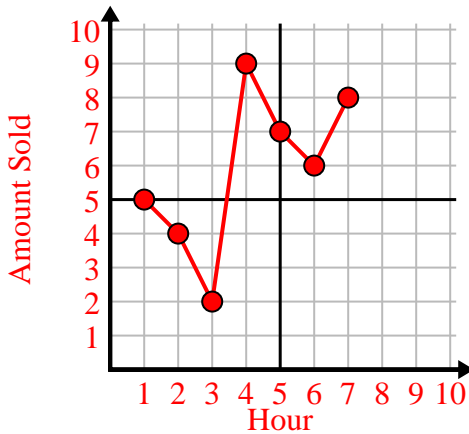
4)

Day	1	2	3	4	5	6
Money Spent	2	7	9	8	5	1



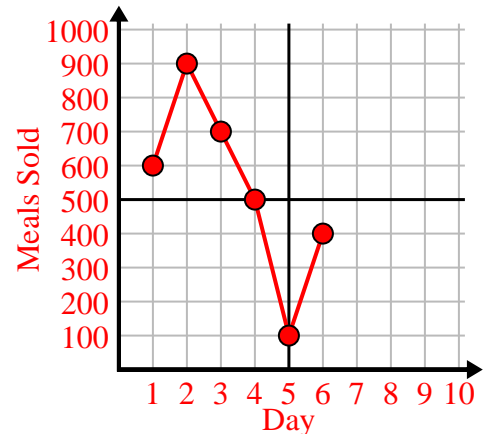
5)

Hour	1	2	3	4	5	6	7
Amount Sold	5	4	2	9	7	6	8



6)

Day	1	2	3	4	5	6
Meals Sold	600	900	700	500	100	400

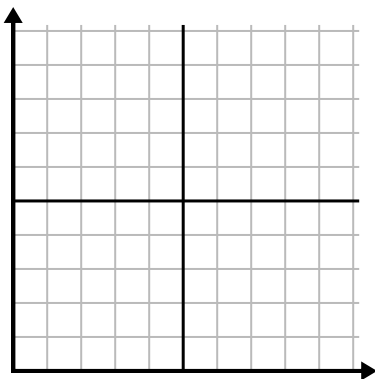




Fill in the grid using the chart.

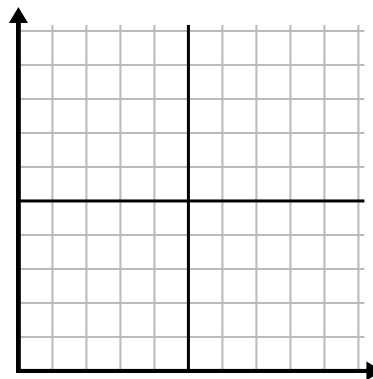
1)

Month	1	2	3	4	5	6
Electric Bill Price	175	50	250	200	100	150



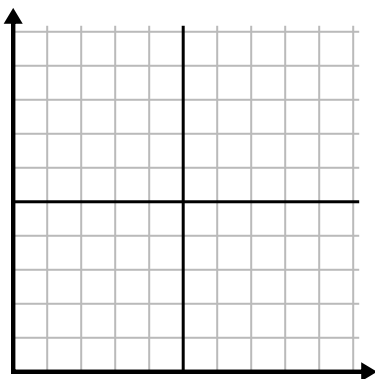
2)

Day	1	2	3	4	5
Meals Sold	900	300	600	1,000	400



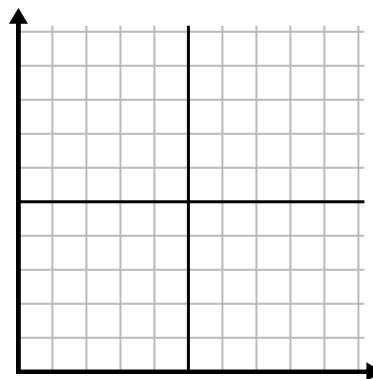
3)

Week	1	2	3	4	5	6	7
Hours of TV watched	15	30	50	35	10	25	45



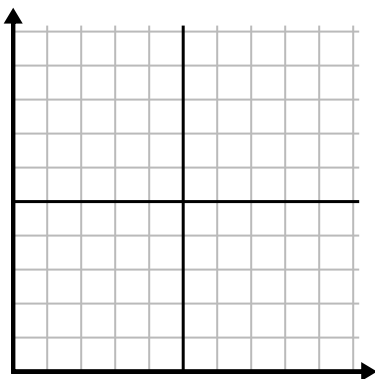
4)

Hour	1	2	3	4	5
Amount Sold	2	3	8	1	4



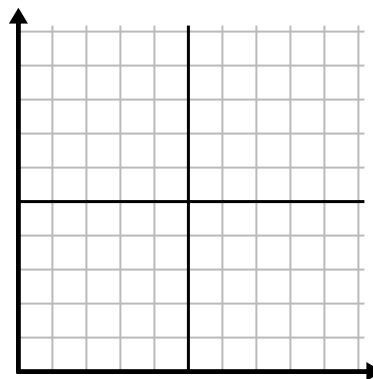
5)

Day	1	2	3	4	5
Calories Burned	200	180	40	80	120



6)

Year	1	2	3	4	5	6
Ink Cartridges Used	18	20	14	16	12	8

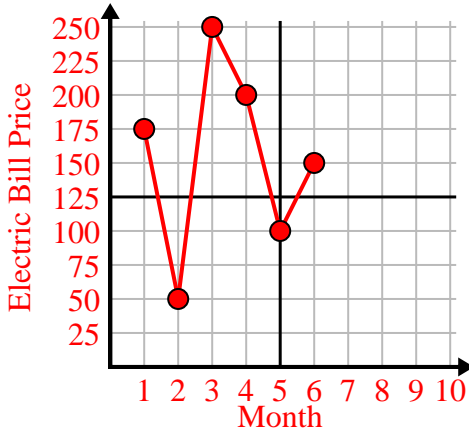




Fill in the grid using the chart.

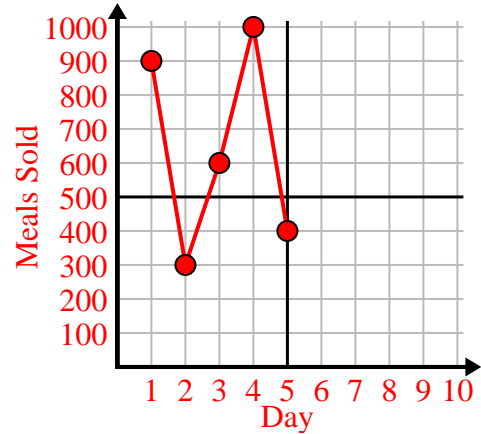
1)

Month	1	2	3	4	5	6
Electric Bill Price	175	50	250	200	100	150



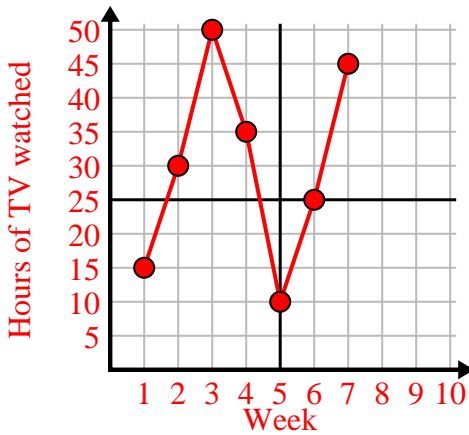
2)

Day	1	2	3	4	5
Meals Sold	900	300	600	1,000	400



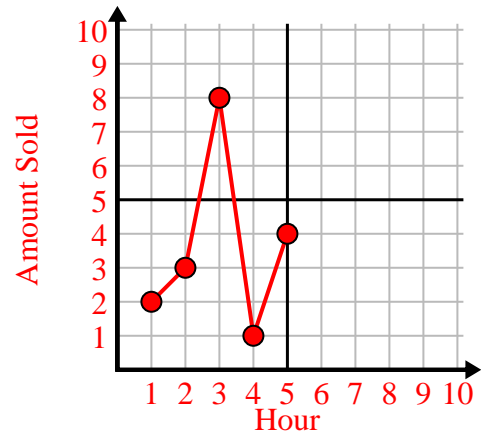
3)

Week	1	2	3	4	5	6	7
Hours of TV watched	15	30	50	35	10	25	45



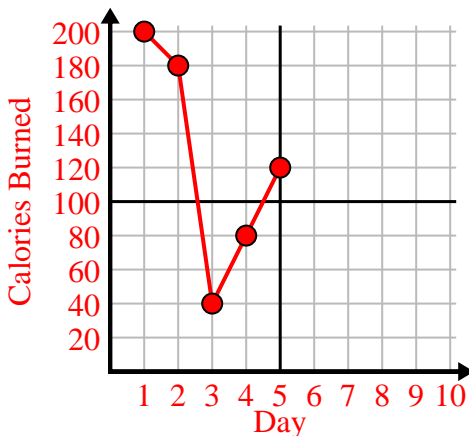
4)

Hour	1	2	3	4	5
Amount Sold	2	3	8	1	4



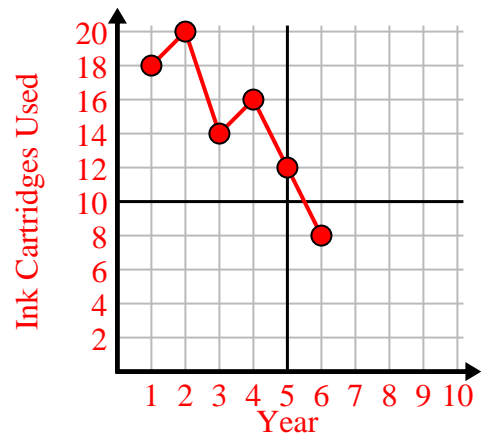
5)

Day	1	2	3	4	5
Calories Burned	200	180	40	80	120



6)

Year	1	2	3	4	5	6
Ink Cartridges Used	18	20	14	16	12	8

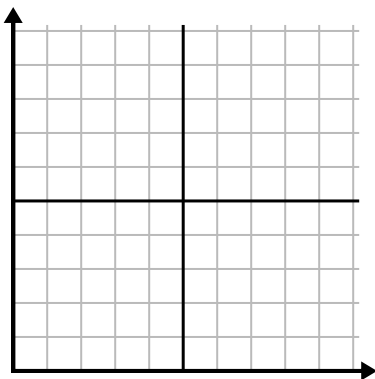




Fill in the grid using the chart.

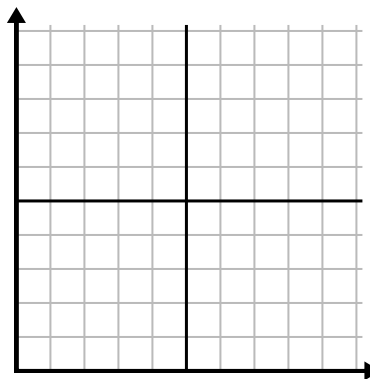
1)

Day	1	2	3	4	5	6	7
Texts Sent	5	30	25	50	35	15	10



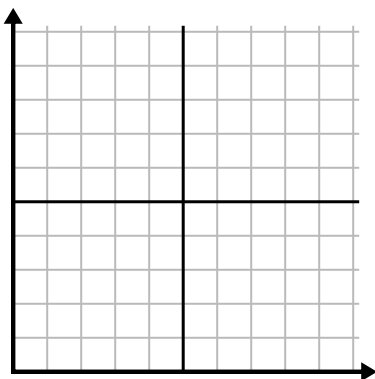
2)

Day	1	2	3	4	5	6	7
Money Spent	1	5	4	6	10	2	3



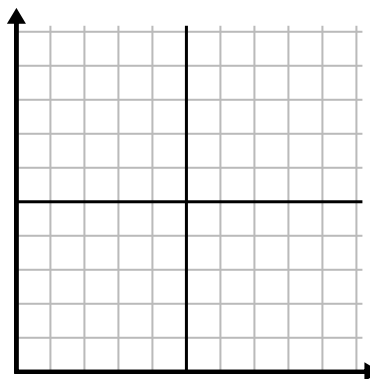
3)

Week	1	2	3	4	5
Water Used (gallons)	20	60	100	90	70



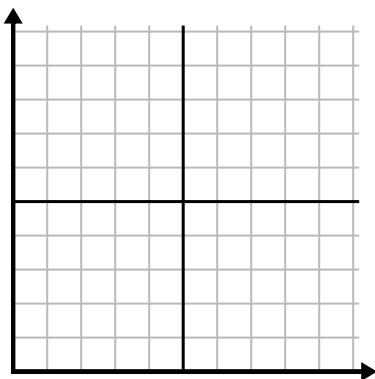
4)

Day	1	2	3	4	5	6
Calories Burned	80	180	40	20	100	200



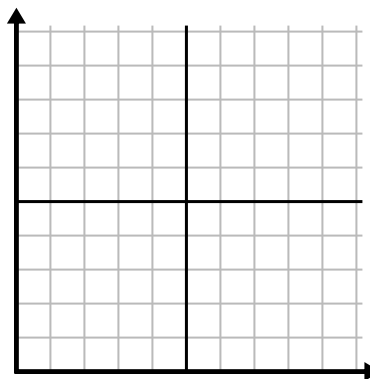
5)

Month	1	2	3	4	5
Electric Bill Price	150	175	125	200	25



6)

Hour	1	2	3	4	5	6
Amount Sold	4	9	7	10	3	6

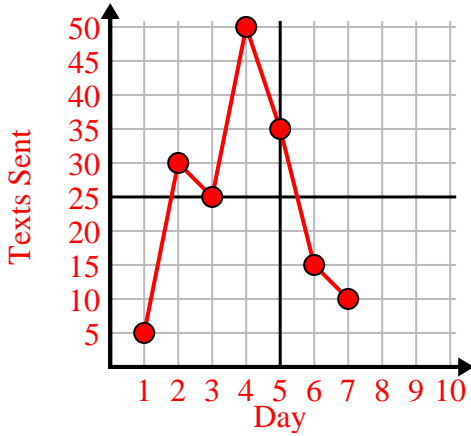




Fill in the grid using the chart.

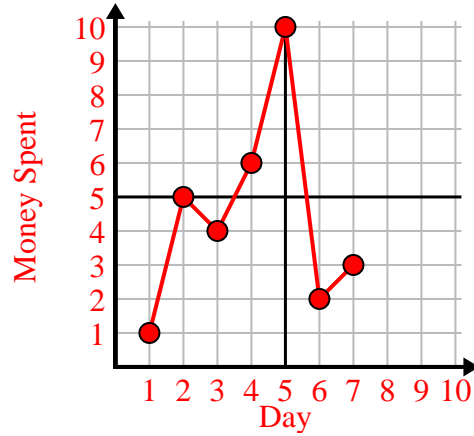
1)

Day	1	2	3	4	5	6	7
Texts Sent	5	30	25	50	35	15	10



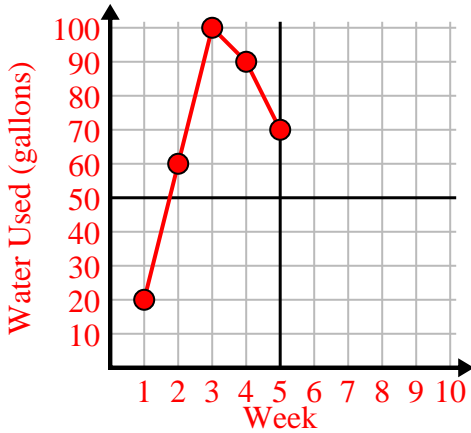
2)

Day	1	2	3	4	5	6	7
Money Spent	1	5	4	6	10	2	3



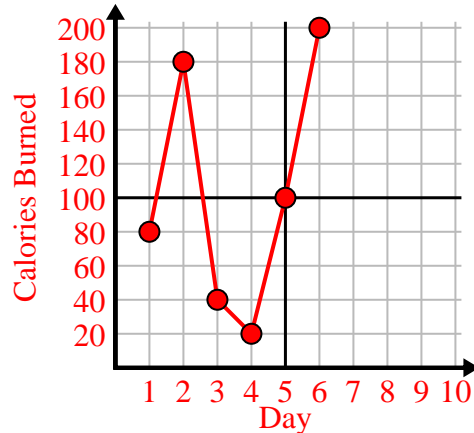
3)

Week	1	2	3	4	5
Water Used (gallons)	20	60	100	90	70



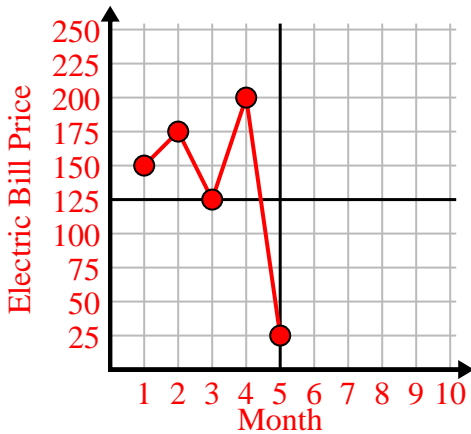
4)

Day	1	2	3	4	5	6
Calories Burned	80	180	40	20	100	200



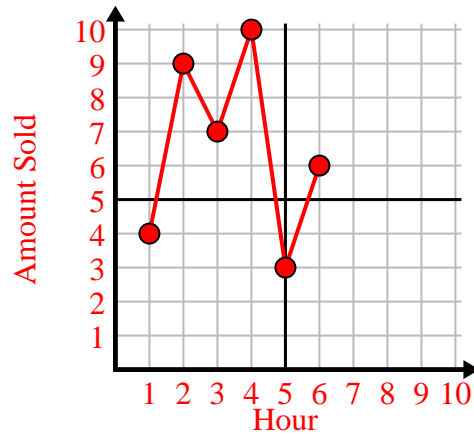
5)

Month	1	2	3	4	5
Electric Bill Price	150	175	125	200	25



6)

Hour	1	2	3	4	5	6
Amount Sold	4	9	7	10	3	6

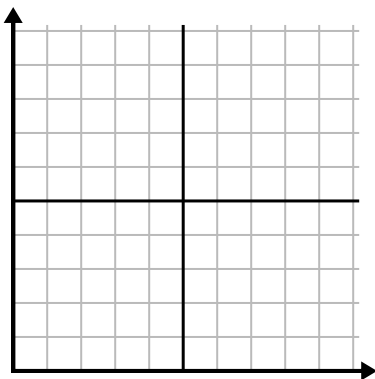




Fill in the grid using the chart.

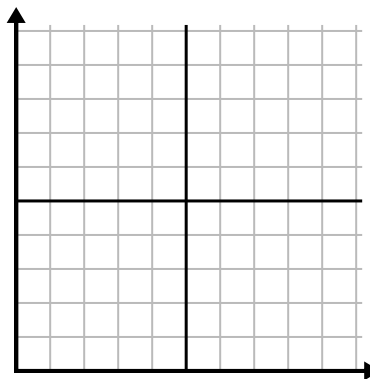
1)

Day	1	2	3	4	5
Calories Burned	160	40	100	20	180



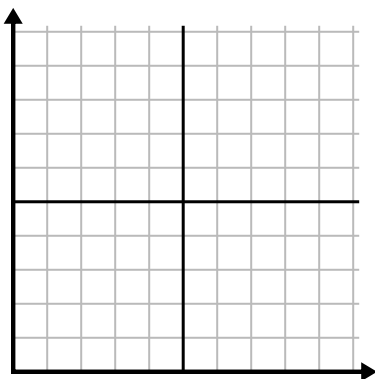
2)

Year	1	2	3	4	5
Boxes of Pens Used	9	2	8	6	10



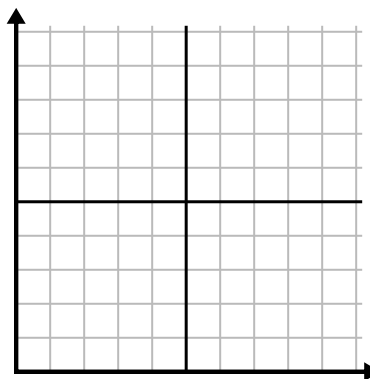
3)

Day	1	2	3	4	5
Texts Sent	40	25	45	5	30



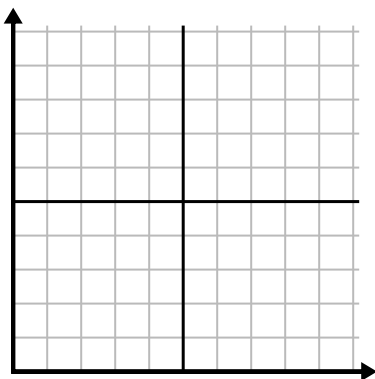
4)

Day	1	2	3	4	5	6	7
Meals Sold	600	900	200	1,000	500	400	700



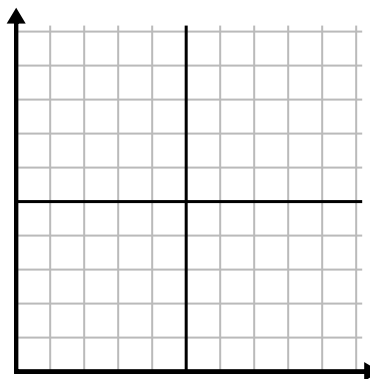
5)

Hour	1	2	3	4	5
Amount Sold	8	5	10	3	9



6)

Week	1	2	3	4	5
Water Used (gallons)	70	80	10	40	100

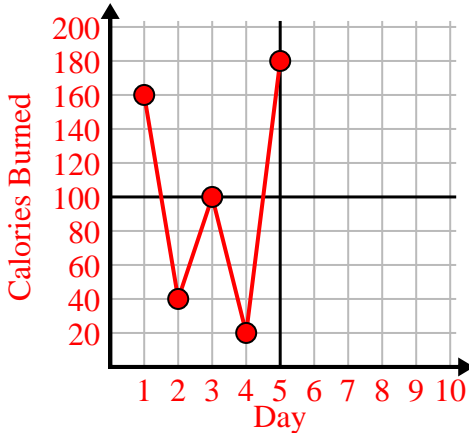




Fill in the grid using the chart.

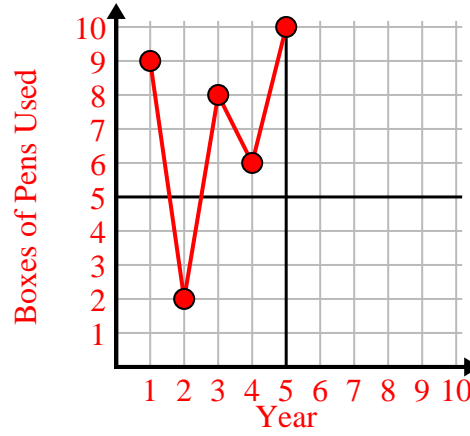
1)

Day	1	2	3	4	5
Calories Burned	160	40	100	20	180



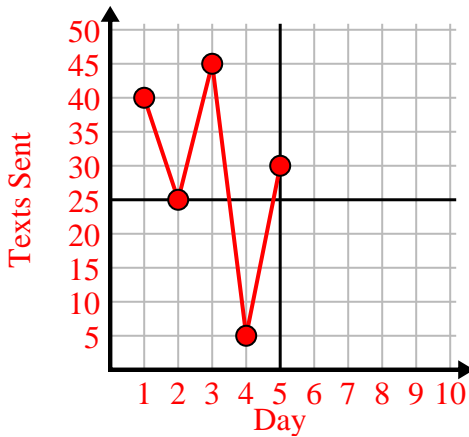
2)

Year	1	2	3	4	5
Boxes of Pens Used	9	2	8	6	10



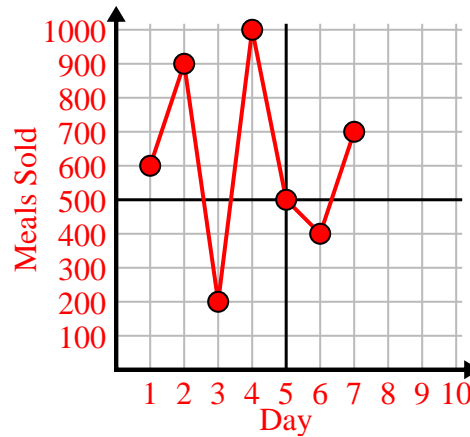
3)

Day	1	2	3	4	5
Texts Sent	40	25	45	5	30



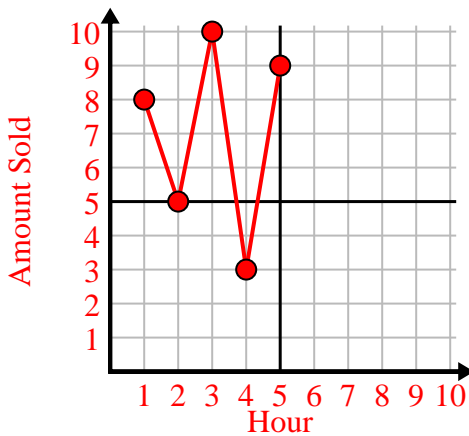
4)

Day	1	2	3	4	5	6	7
Meals Sold	600	900	200	1,000	500	400	700



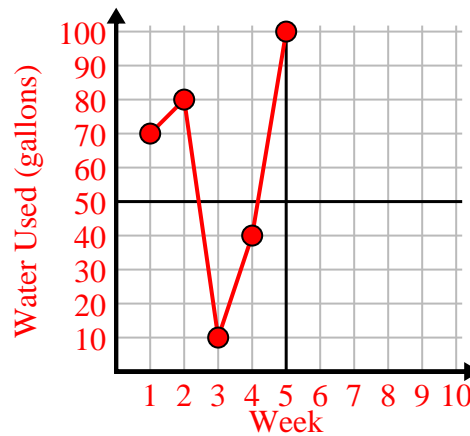
5)

Hour	1	2	3	4	5
Amount Sold	8	5	10	3	9



6)

Week	1	2	3	4	5
Water Used (gallons)	70	80	10	40	100

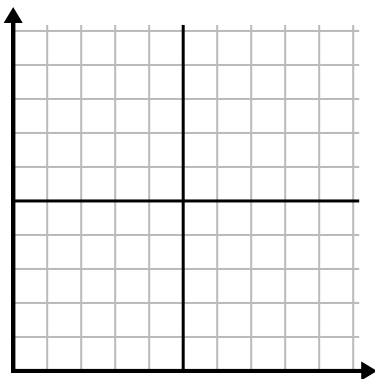




Fill in the grid using the chart.

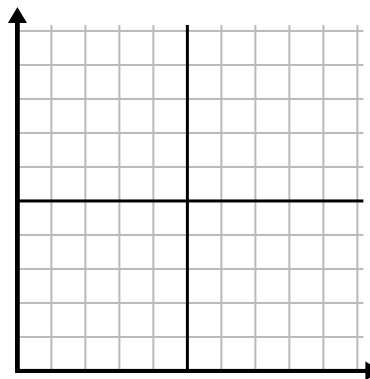
1)

Day	1	2	3	4	5	6
Calories Burned	80	60	140	100	40	180



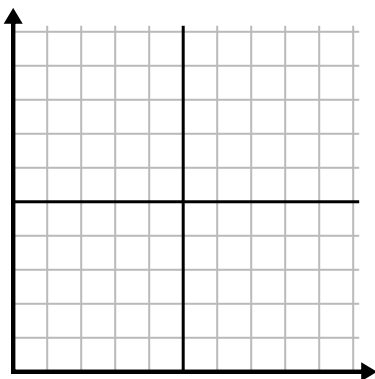
2)

Month	1	2	3	4	5
Electric Bill Price	225	250	175	150	75



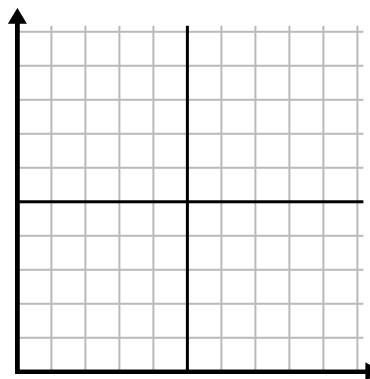
3)

Hour	1	2	3	4	5
Amount Sold	1	9	2	6	5



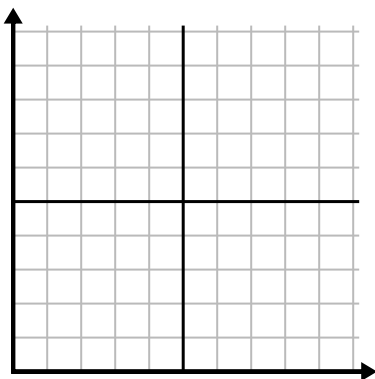
4)

Day	1	2	3	4	5	6	7
Texts Sent	5	10	50	30	20	15	25



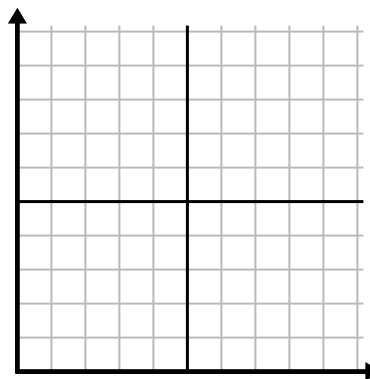
5)

Week	1	2	3	4	5	6	7
Water Used (gallons)	90	10	80	100	50	20	70



6)

Day	1	2	3	4	5	6	7
Money Spent	8	7	6	5	4	3	10

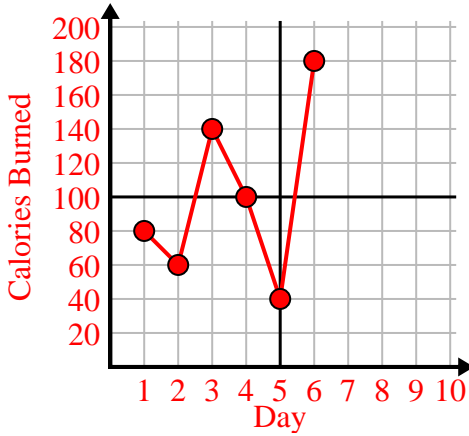




Fill in the grid using the chart.

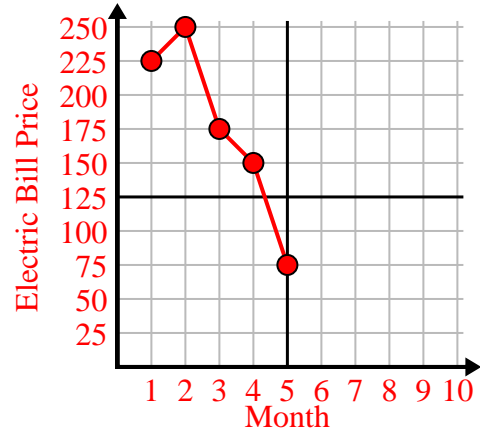
1)

Day	1	2	3	4	5	6
Calories Burned	80	60	140	100	40	180



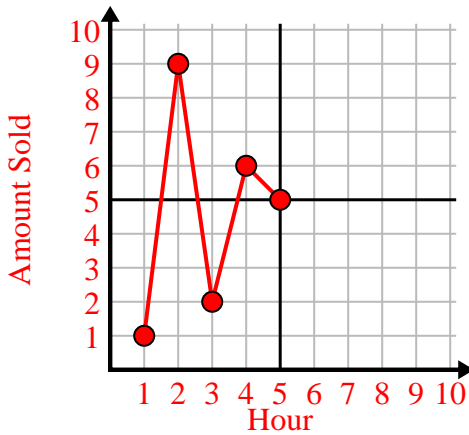
2)

Month	1	2	3	4	5
Electric Bill Price	225	250	175	150	75



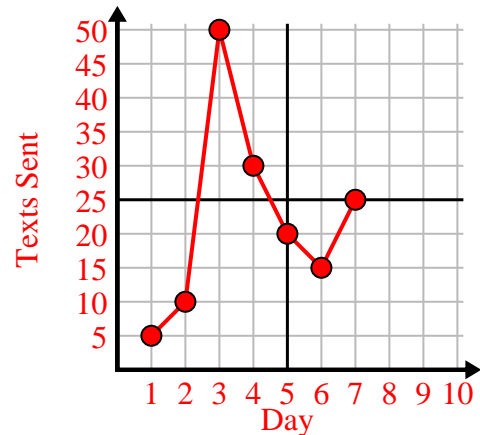
3)

Hour	1	2	3	4	5
Amount Sold	1	9	2	6	5



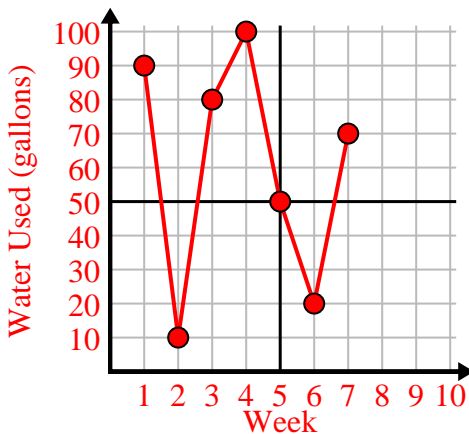
4)

Day	1	2	3	4	5	6	7
Texts Sent	5	10	50	30	20	15	25



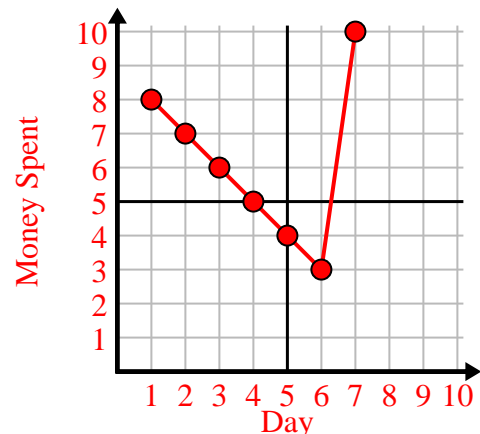
5)

Week	1	2	3	4	5	6	7
Water Used (gallons)	90	10	80	100	50	20	70



6)

Day	1	2	3	4	5	6	7
Money Spent	8	7	6	5	4	3	10

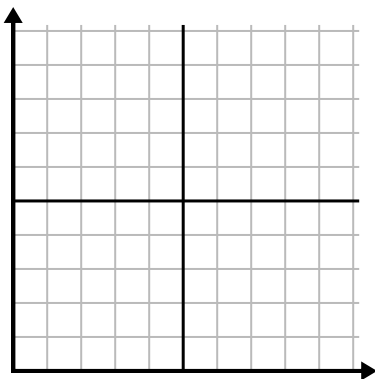




Fill in the grid using the chart.

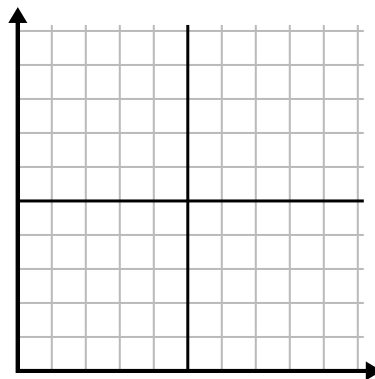
1)

Day	1	2	3	4	5
Meals Sold	1,000	300	900	100	700



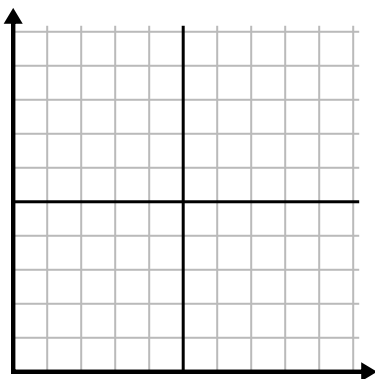
2)

Day	1	2	3	4	5	6
Texts Sent	40	30	50	15	25	10



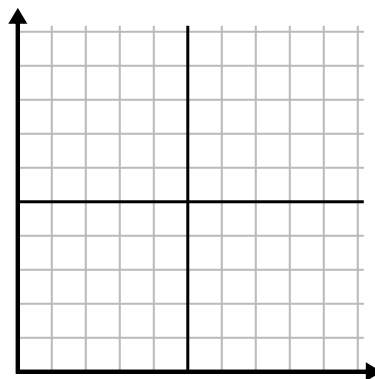
3)

Year	1	2	3	4	5	6
Boxes of Pens Used	10	3	9	1	2	6



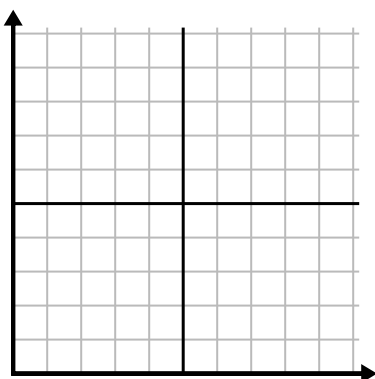
4)

Year	1	2	3	4	5
Ink Cartridges Used	2	18	4	20	12



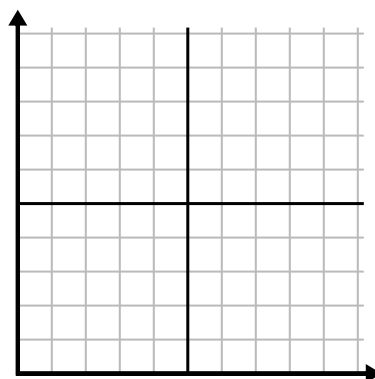
5)

Hour	1	2	3	4	5	6
Amount Sold	6	5	3	4	7	9



6)

Week	1	2	3	4	5	6
Water Used (gallons)	10	60	80	70	20	40

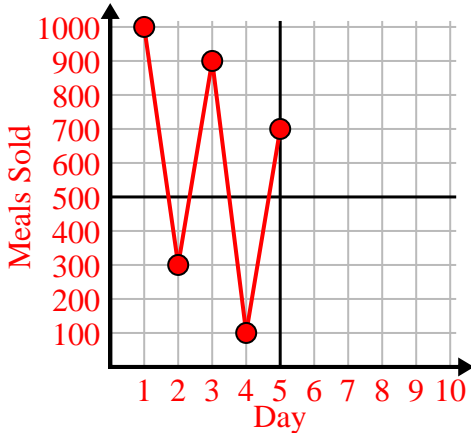




Fill in the grid using the chart.

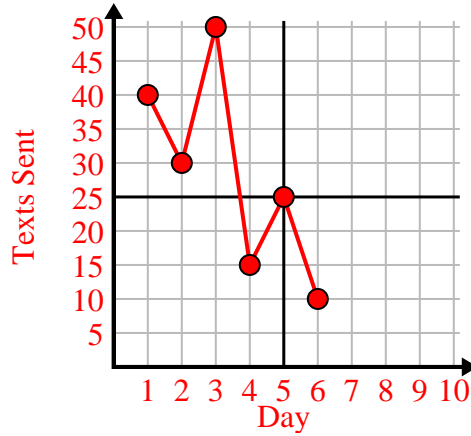
1)

Day	1	2	3	4	5
Meals Sold	1,000	300	900	100	700



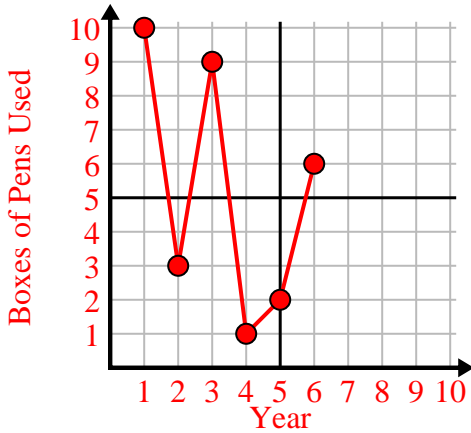
2)

Day	1	2	3	4	5	6
Texts Sent	40	30	50	15	25	10



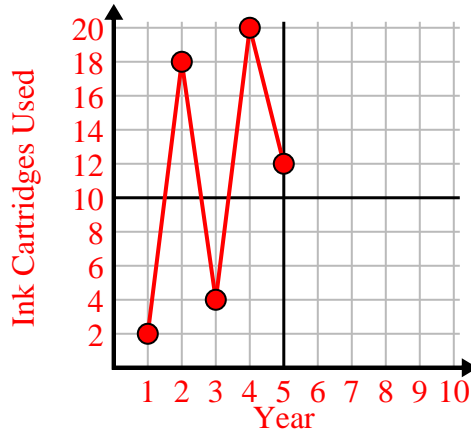
3)

Year	1	2	3	4	5	6
Boxes of Pens Used	10	3	9	1	2	6



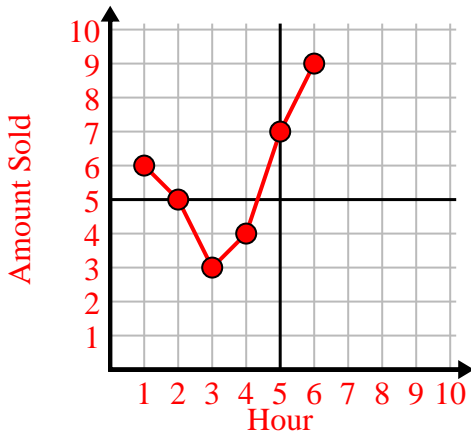
4)

Year	1	2	3	4	5
Ink Cartridges Used	2	18	4	20	12



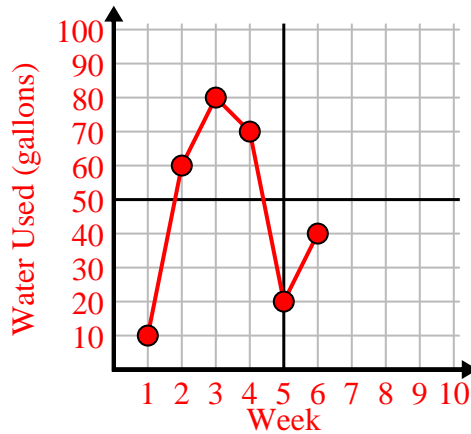
5)

Hour	1	2	3	4	5	6
Amount Sold	6	5	3	4	7	9



6)

Week	1	2	3	4	5	6
Water Used (gallons)	10	60	80	70	20	40

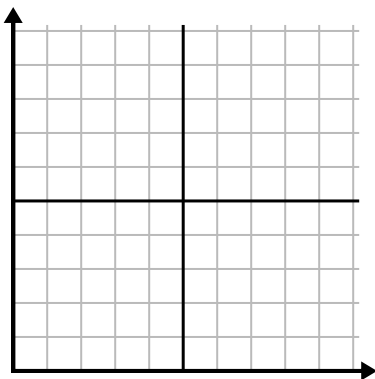




Fill in the grid using the chart.

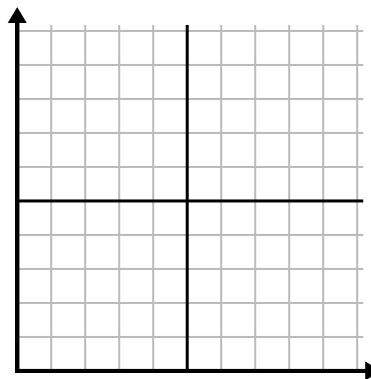
1)

Hour	1	2	3	4	5	6	7
Amount Sold	10	6	5	4	1	8	9



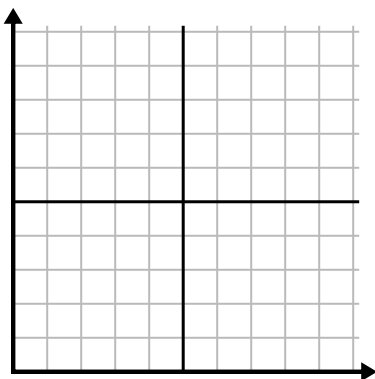
2)

Week	1	2	3	4	5	6	7
Water Used (gallons)	30	50	40	100	80	10	20



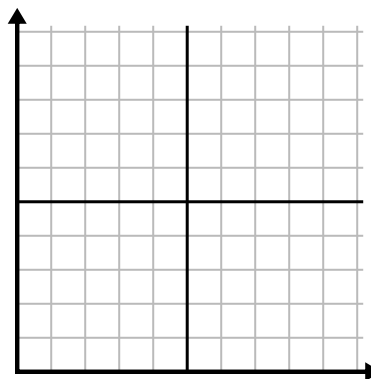
3)

Year	1	2	3	4	5	6	7
Ink Cartridges Used	8	18	6	20	16	10	14



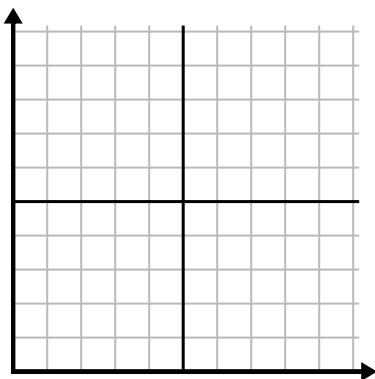
4)

Day	1	2	3	4	5	6	7
Meals Sold	900	400	700	500	1,000	600	100



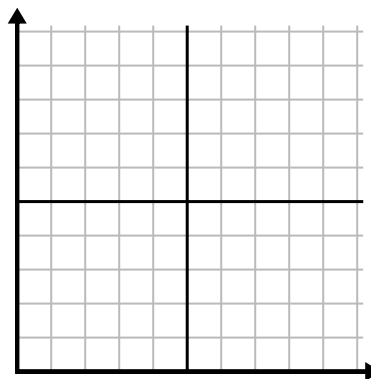
5)

Day	1	2	3	4	5	6
Texts Sent	40	35	30	50	10	20



6)

Month	1	2	3	4	5	6
Electric Bill Price	25	150	175	250	200	50

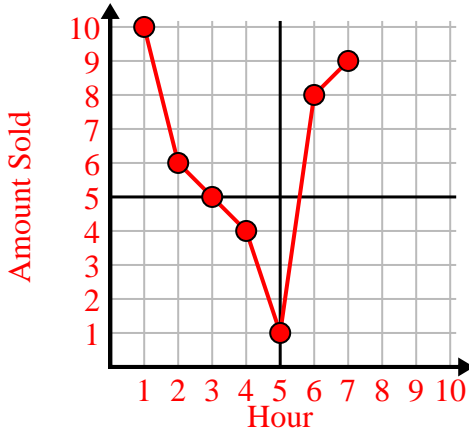




Fill in the grid using the chart.

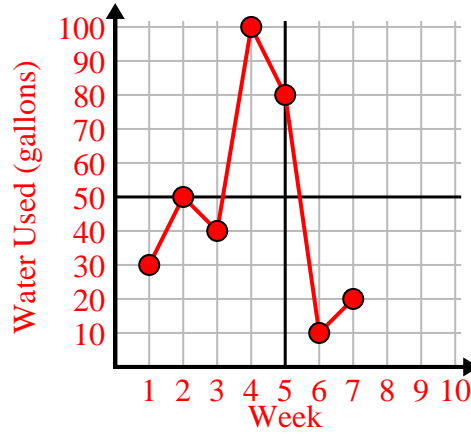
1)

Hour	1	2	3	4	5	6	7
Amount Sold	10	6	5	4	1	8	9



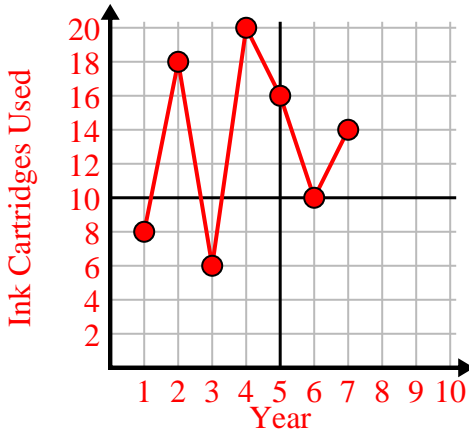
2)

Week	1	2	3	4	5	6	7
Water Used (gallons)	30	50	40	100	80	10	20



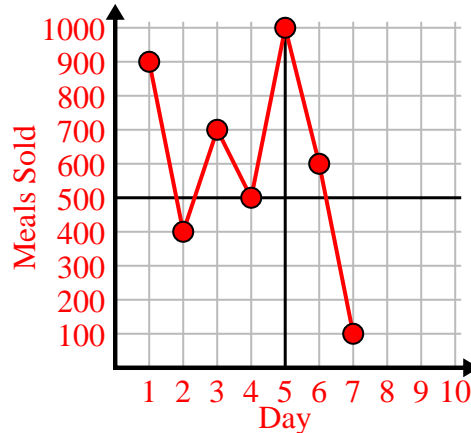
3)

Year	1	2	3	4	5	6	7
Ink Cartridges Used	8	18	6	20	16	10	14



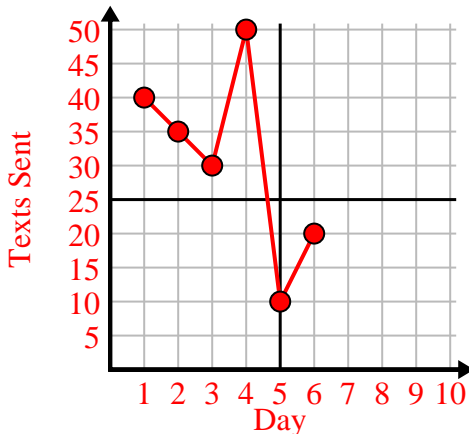
4)

Day	1	2	3	4	5	6	7
Meals Sold	900	400	700	500	1,000	600	100



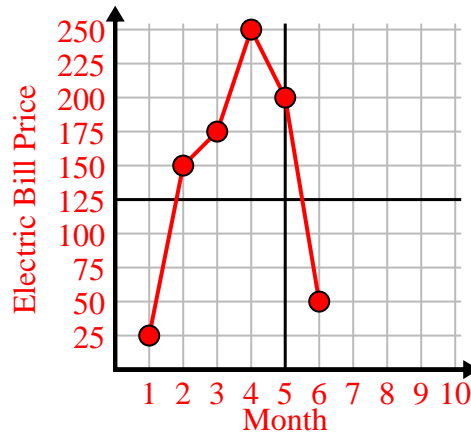
5)

Day	1	2	3	4	5	6
Texts Sent	40	35	30	50	10	20



6)

Month	1	2	3	4	5	6
Electric Bill Price	25	150	175	250	200	50

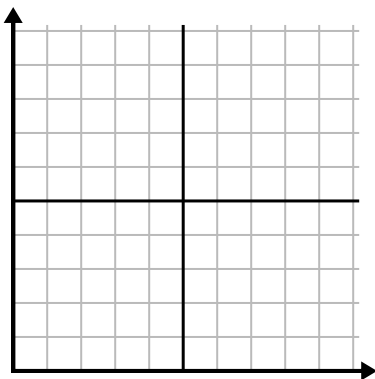




Fill in the grid using the chart.

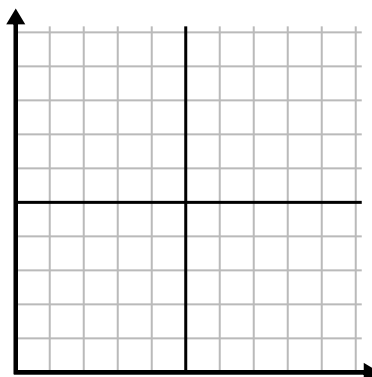
1)

Month	1	2	3	4	5	6
Electric Bill Price	50	75	250	150	175	25



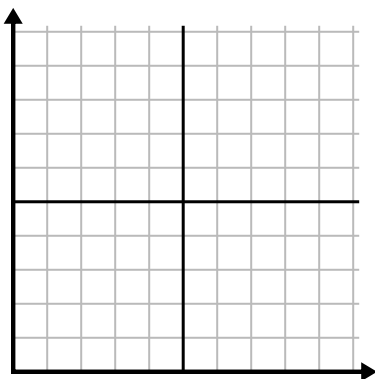
2)

Day	1	2	3	4	5	6	7
Youtube Videos Watched	90	210	120	150	60	30	300



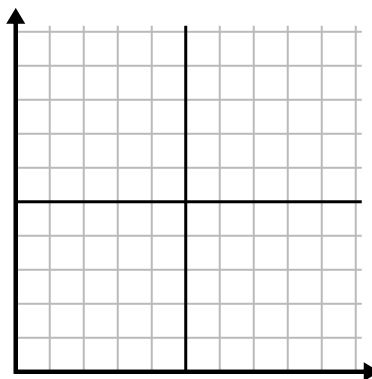
3)

Week	1	2	3	4	5	6
Hours of TV watched	25	30	15	10	20	50



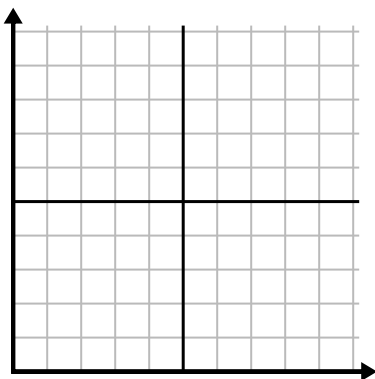
4)

Day	1	2	3	4	5	6	7
Meals Sold	900	400	200	800	100	500	300



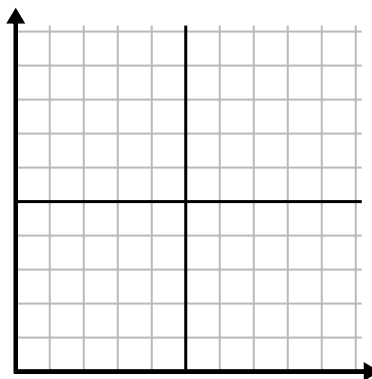
5)

Week	1	2	3	4	5
Water Used (gallons)	60	80	10	30	20



6)

Day	1	2	3	4	5
Calories Burned	140	120	180	200	160





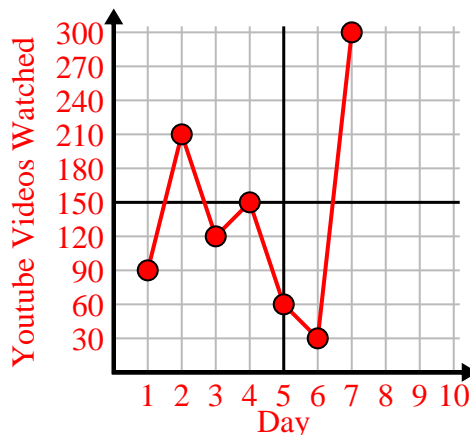
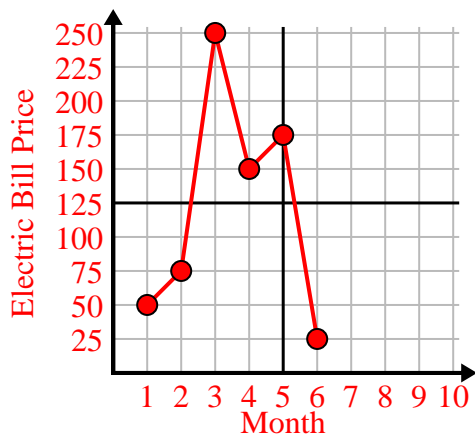
Fill in the grid using the chart.

1)

Month	1	2	3	4	5	6
Electric Bill Price	50	75	250	150	175	25

2)

Day	1	2	3	4	5	6	7
Youtube Videos Watched	90	210	120	150	60	30	300

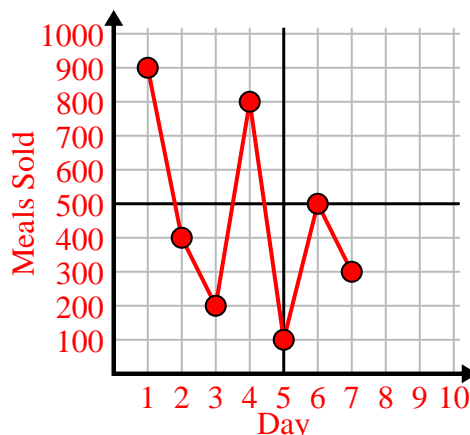
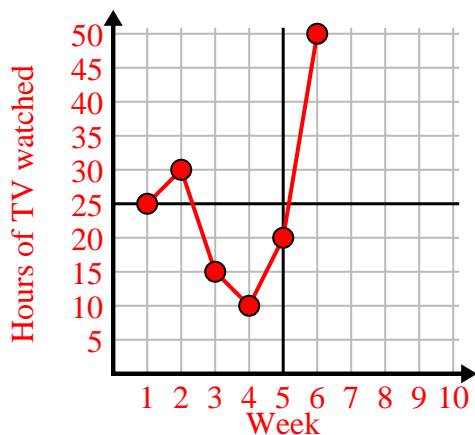


3)

Week	1	2	3	4	5	6
Hours of TV watched	25	30	15	10	20	50

4)

Day	1	2	3	4	5	6	7
Meals Sold	900	400	200	800	100	500	300

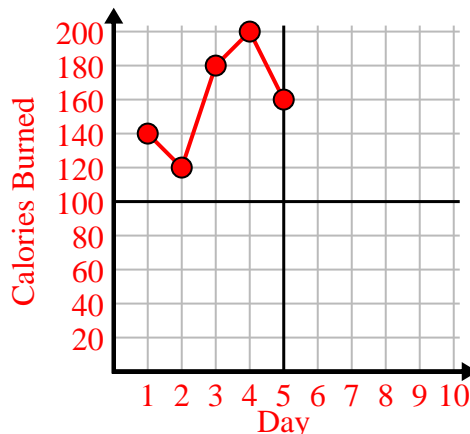
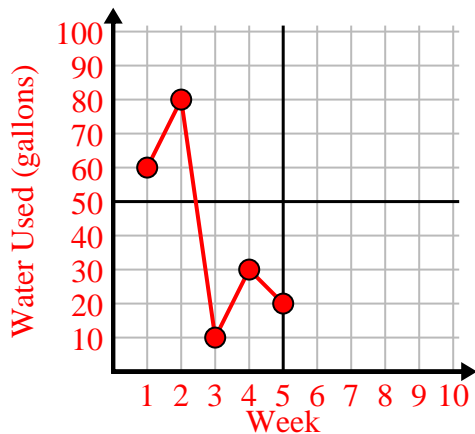


5)

Week	1	2	3	4	5
Water Used (gallons)	60	80	10	30	20

6)

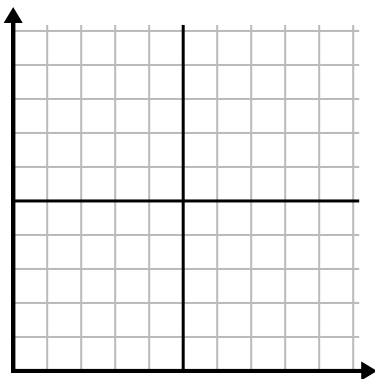
Day	1	2	3	4	5
Calories Burned	140	120	180	200	160



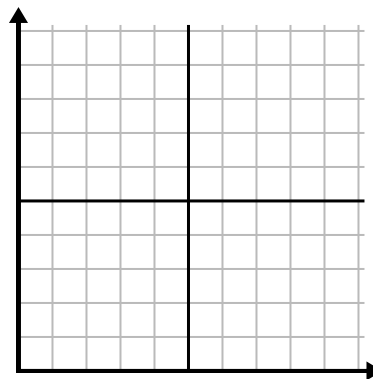


Fill in the grid using the chart.

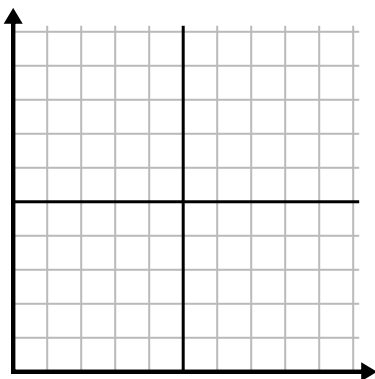
1)	Week	1	2	3	4	5	6	7
	Hours of TV watched	50	25	45	10	15	30	35



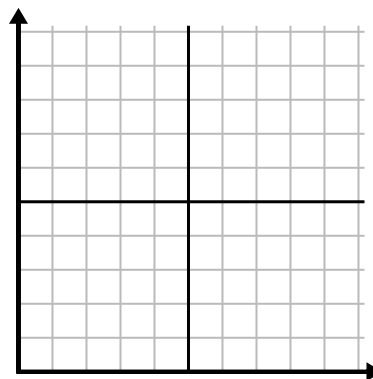
2)	Day	1	2	3	4	5	6
	Texts Sent	20	5	50	30	10	15



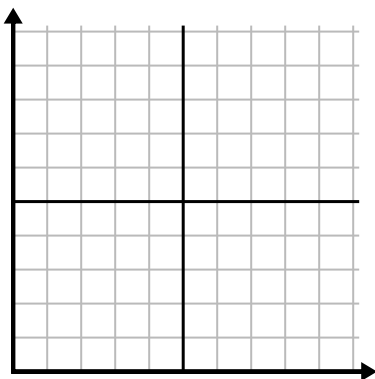
3)	Day	1	2	3	4	5	6
	Youtube Videos Watched	300	240	60	210	180	270



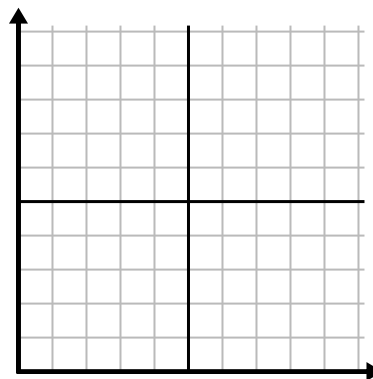
4)	Day	1	2	3	4	5
	Money Spent	5	6	7	10	3



5)	Hour	1	2	3	4	5	6	7
	Amount Sold	8	1	6	10	3	7	4



6)	Month	1	2	3	4	5
	Electric Bill Price	125	200	150	25	75

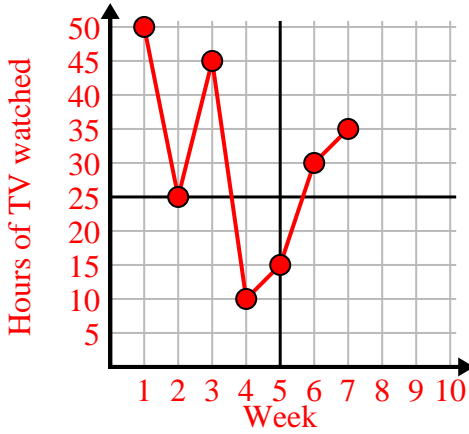




Fill in the grid using the chart.

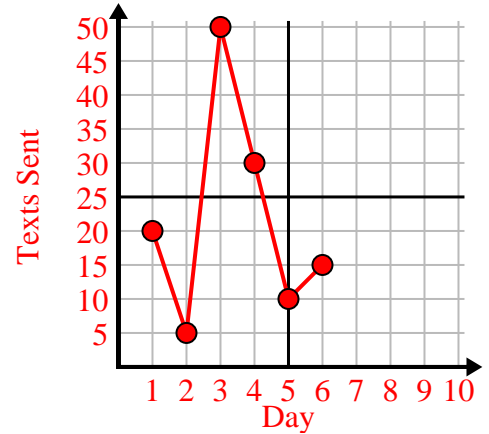
1)

Week	1	2	3	4	5	6	7
Hours of TV watched	50	25	45	10	15	30	35



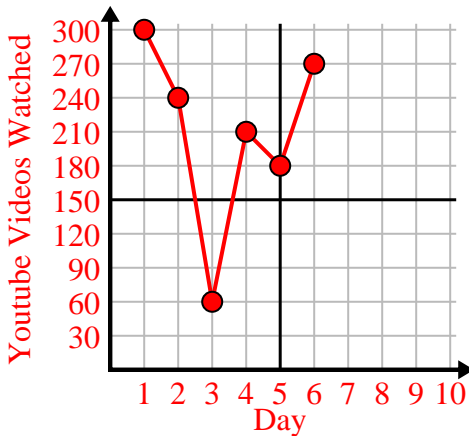
2)

Day	1	2	3	4	5	6
Texts Sent	20	5	50	30	10	15



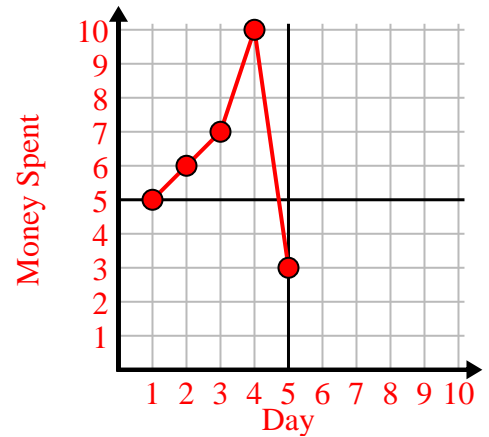
3)

Day	1	2	3	4	5	6
Youtube Videos Watched	300	240	60	210	180	270



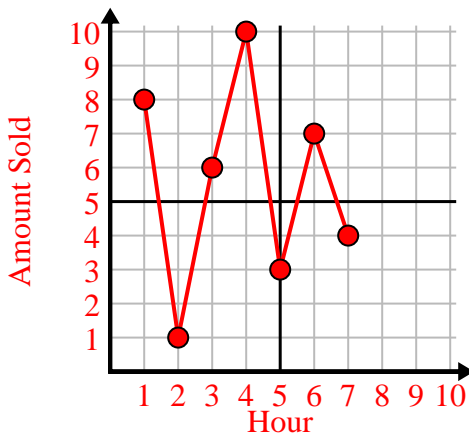
4)

Day	1	2	3	4	5
Money Spent	5	6	7	10	3



5)

Hour	1	2	3	4	5	6	7
Amount Sold	8	1	6	10	3	7	4



6)

Month	1	2	3	4	5
Electric Bill Price	125	200	150	25	75

