





































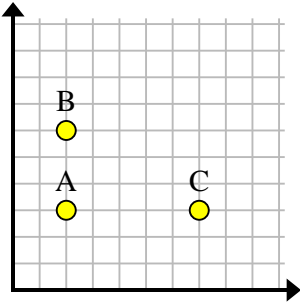




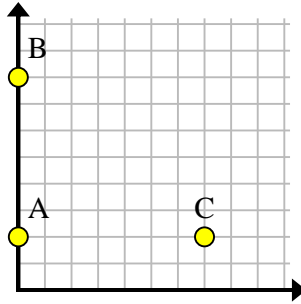


Find the coordinates of point D to make a rectangle.

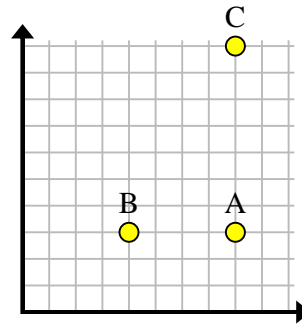
Ex)



1)



2)



Answers

Ex. (7, 6)

1. \_\_\_\_\_

2. \_\_\_\_\_

3. \_\_\_\_\_

4. \_\_\_\_\_

5. \_\_\_\_\_

6. \_\_\_\_\_

7. \_\_\_\_\_

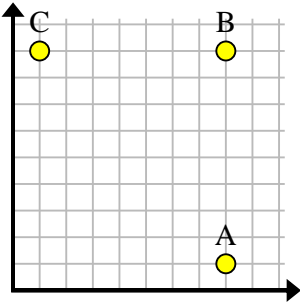
8. \_\_\_\_\_

9. \_\_\_\_\_

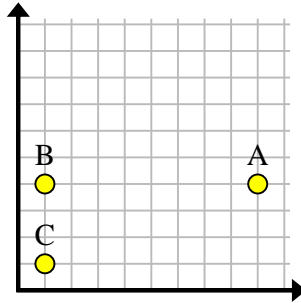
10. \_\_\_\_\_

11. \_\_\_\_\_

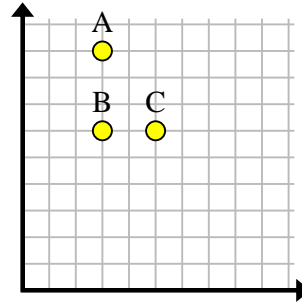
3)



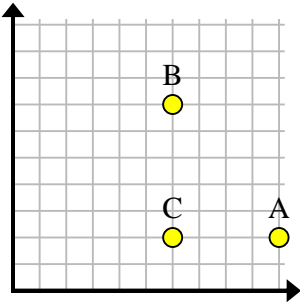
4)



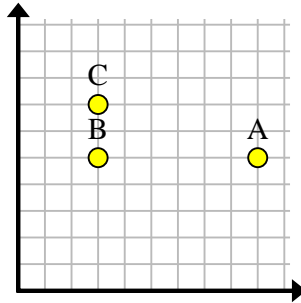
5)



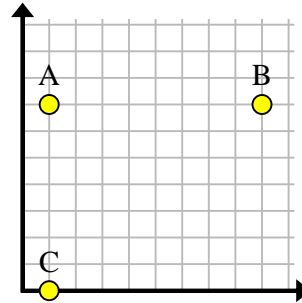
6)



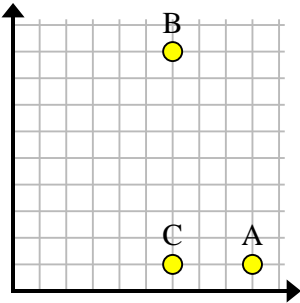
7)



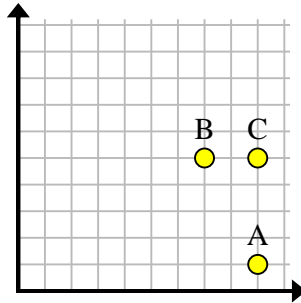
8)



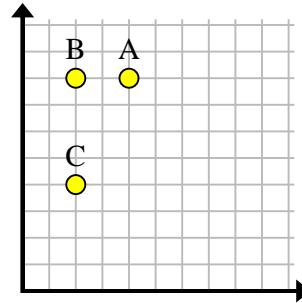
9)



10)



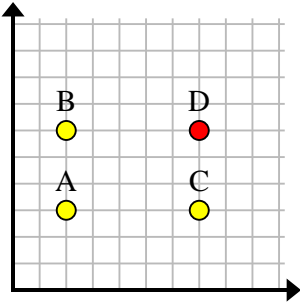
11)



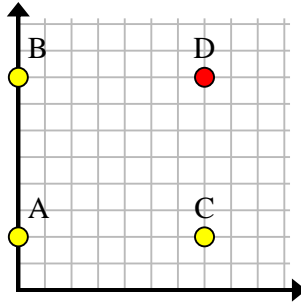


Find the coordinates of point D to make a rectangle.

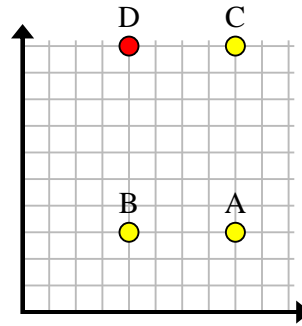
Ex)



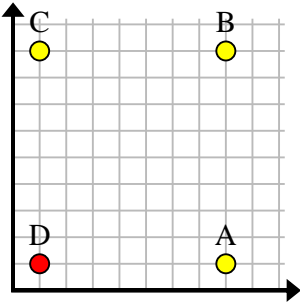
1)



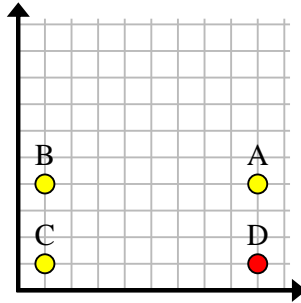
2)



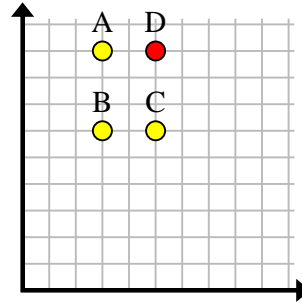
3)



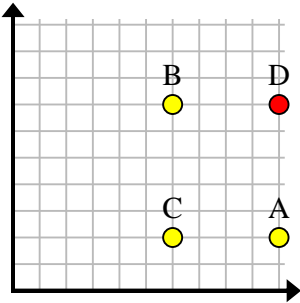
4)



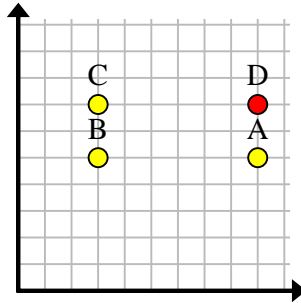
5)



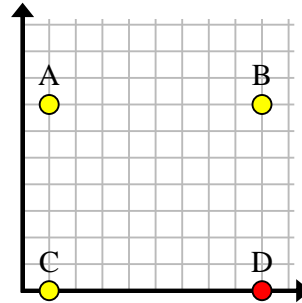
6)



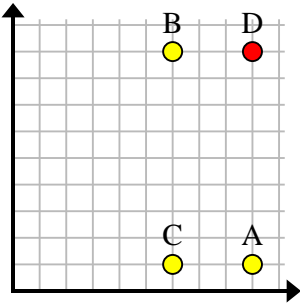
7)



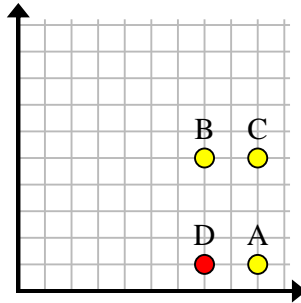
8)



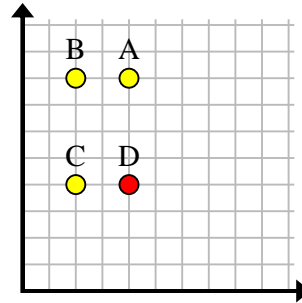
9)



10)



11)



Answers

Ex. (7, 6)

1. (7, 8)

2. (4, 10)

3. (1, 1)

4. (9, 1)

5. (5, 9)

6. (10, 7)

7. (9, 7)

8. (9, 0)

9. (9, 9)

10. (7, 1)

11. (4, 4)