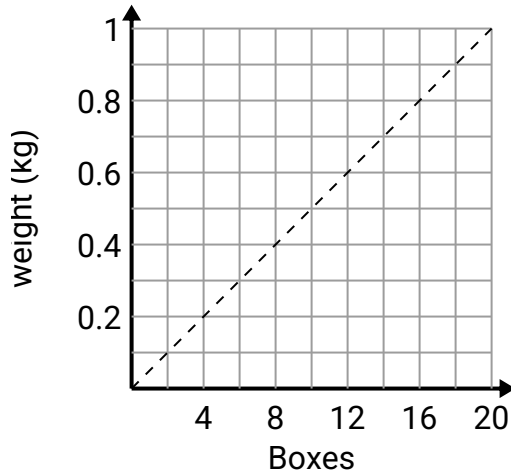




Determine which statements about the graph are true.

Answers

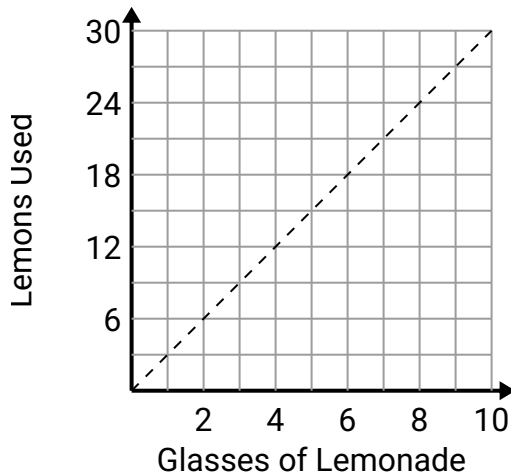
1)



- A. The point (10 , 0.5) shows that 10 boxes weigh 0.5 kilograms.
- B. The point (8 , 0.4) shows that 8 boxes weigh 0.4 kilograms.
- C. The point (0.6 , 12) shows that 0.6 kilograms is the weight of 12 boxes.
- D. The point (18 , 0.9) shows that 18 boxes weigh 0.9 kilograms.

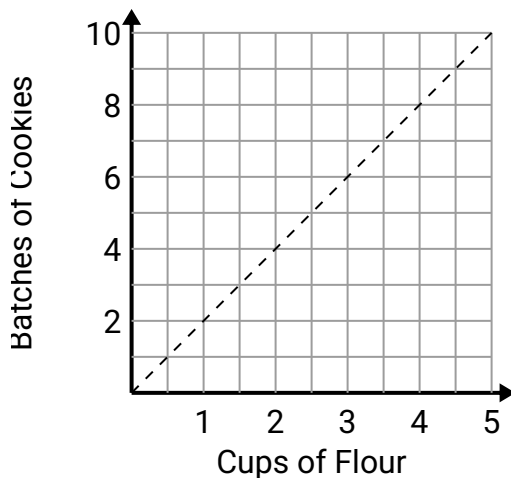
1. _____
2. _____
3. _____

2)



- A. The point (21 , 7) shows that it will take 21 lemons to make 7 glasses of lemonade.
- B. The point (3 , 1) shows that making 1 glass of lemonade will take 3 lemons.
- C. The point (3 , 9) shows that making 3 glasses of lemonade will take 9 lemons.
- D. The point (7 , 21) shows that making 7 glasses of lemonade will take 21 lemons.

3)



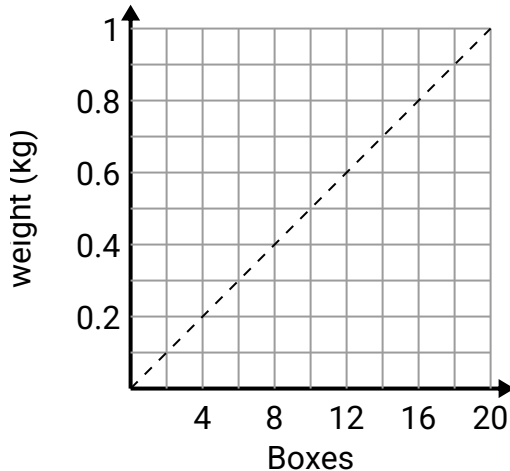
- A. The point (1 , 2) shows that 1 cups of flour will make 2 batches of cookies.
- B. The point (0.5 , 1) shows that 0.5 cup of flour will make 1 batch of cookies.
- C. The point (5 , 2.5) shows that 2.5 cups of flour will make 5 batches of cookies.
- D. The point (2 , 1) shows that 1 cups of flour will make 2 batches of cookies.



Determine which statements about the graph are true.

Answers

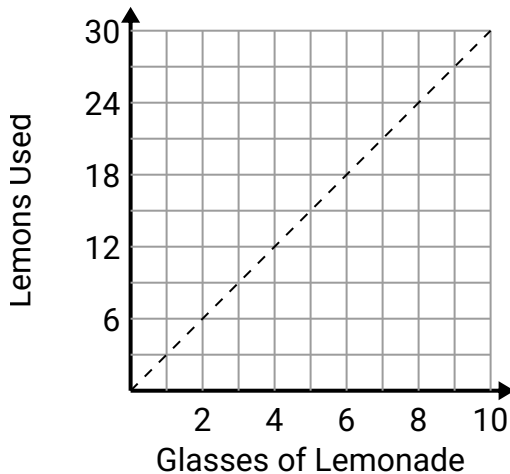
1)



- A. The point (10 , 0.5) shows that 10 boxes weigh 0.5 kilograms.
- B. The point (8 , 0.4) shows that 8 boxes weigh 0.4 kilograms.
- C. The point (0.6 , 12) shows that 0.6 kilograms is the weight of 12 boxes.
- D. The point (18 , 0.9) shows that 18 boxes weigh 0.9 kilograms.

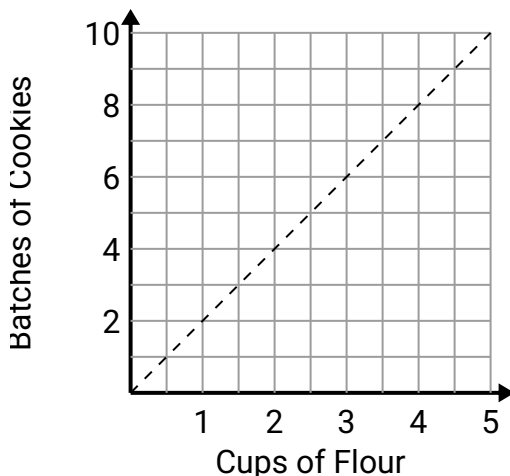
1. **A,B,D**2. **C,D**3. **A,B**

2)



- A. The point (21 , 7) shows that it will take 21 lemons to make 7 glasses of lemonade.
- B. The point (3 , 1) shows that making 1 glass of lemonade will take 3 lemons.
- C. The point (3 , 9) shows that making 3 glasses of lemonade will take 9 lemons.
- D. The point (7 , 21) shows that making 7 glasses of lemonade will take 21 lemons.

3)



- A. The point (1 , 2) shows that 1 cups of flour will make 2 batches of cookies.
- B. The point (0.5 , 1) shows that 0.5 cup of flour will make 1 batch of cookies.
- C. The point (5 , 2.5) shows that 2.5 cups of flour will make 5 batches of cookies.
- D. The point (2 , 1) shows that 1 cups of flour will make 2 batches of cookies.