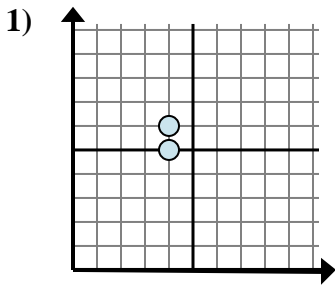


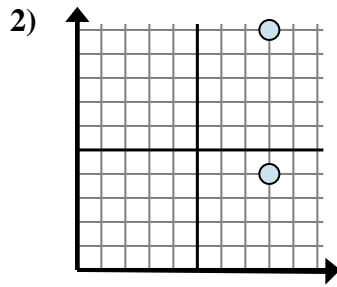


Determine which expression best shows the distance between the two points.

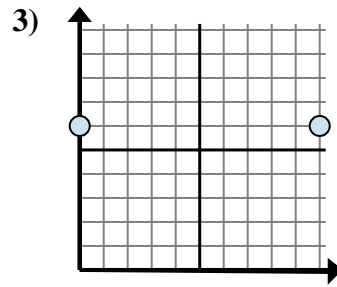
Answers



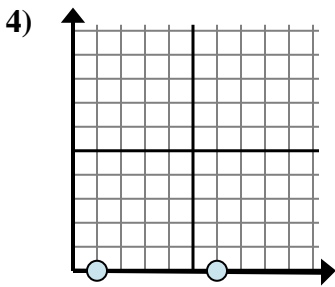
- A. $6 - 5$
- B. $4 - 4$
- C. $5 - 6$
- D. $6 - 4$



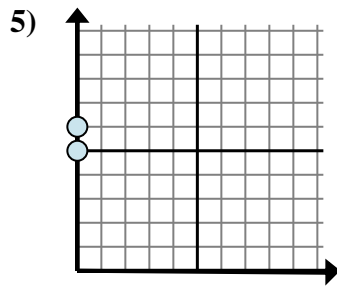
- A. $4 - 10$
- B. $8 - 8$
- C. $8 - 10$
- D. $10 - 4$



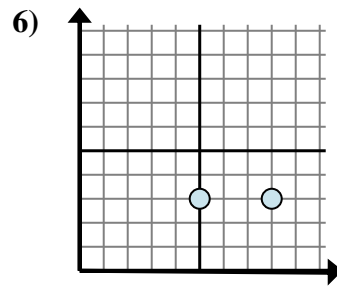
- A. $10 - 0$
- B. $0 - 10$
- C. $6 - 0$
- D. $6 - 0$



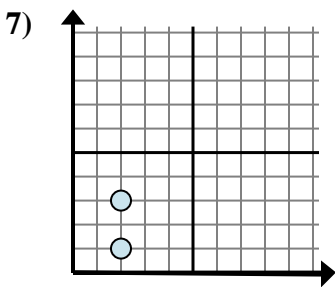
- A. $0 - 0$
- B. $0 - 0$
- C. $0 - 1$
- D. $6 - 1$



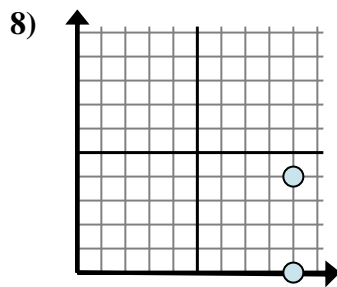
- A. $0 - 6$
- B. $0 - 0$
- C. $6 - 5$
- D. $6 - 0$



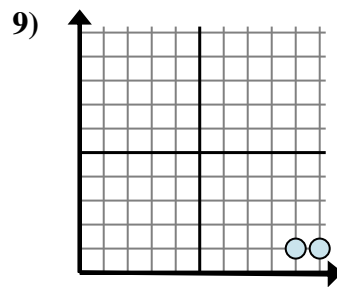
- A. $3 - 8$
- B. $8 - 3$
- C. $3 - 3$
- D. $8 - 5$



- A. $2 - 2$
- B. $3 - 2$
- C. $3 - 1$
- D. $2 - 3$



- A. $0 - 4$
- B. $9 - 4$
- C. $4 - 0$
- D. $9 - 9$



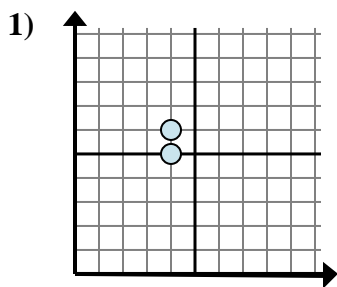
- A. $1 - 9$
- B. $10 - 9$
- C. $1 - 9$
- D. $9 - 1$

1. _____
2. _____
3. _____
4. _____
5. _____
6. _____
7. _____
8. _____
9. _____

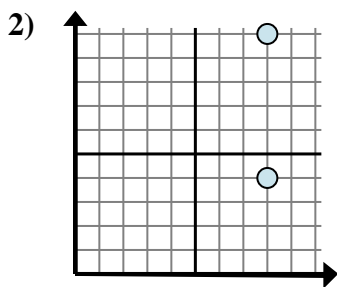


Determine which expression best shows the distance between the two points.

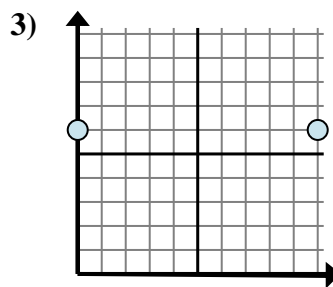
Answers



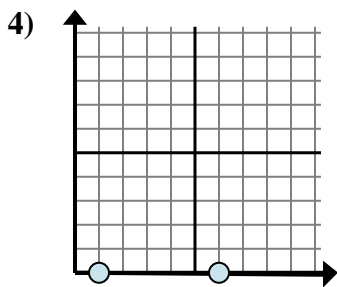
- A. $6 - 5$
- B. $4 - 4$
- C. $5 - 6$
- D. $6 - 4$



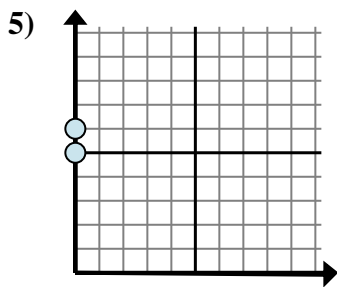
- A. $4 - 10$
- B. $8 - 8$
- C. $8 - 10$
- D. $10 - 4$



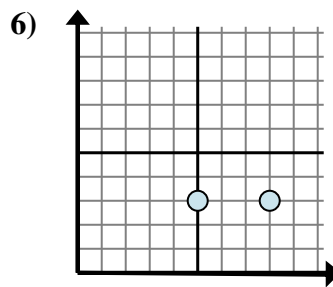
- A. $10 - 0$
- B. $0 - 10$
- C. $6 - 0$
- D. $6 - 0$



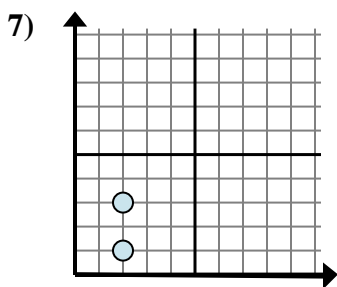
- A. $0 - 0$
- B. $0 - 0$
- C. $0 - 1$
- D. $6 - 1$



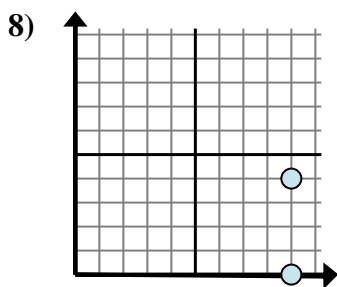
- A. $0 - 6$
- B. $0 - 0$
- C. $6 - 5$
- D. $6 - 0$



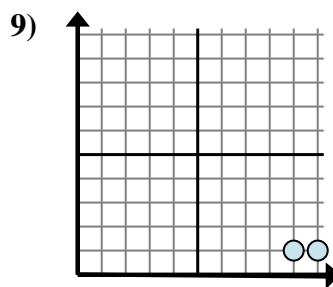
- A. $3 - 8$
- B. $8 - 3$
- C. $3 - 3$
- D. $8 - 5$



- A. $2 - 2$
- B. $3 - 2$
- C. $3 - 1$
- D. $2 - 3$



- A. $0 - 4$
- B. $9 - 4$
- C. $4 - 0$
- D. $9 - 9$



- A. $1 - 9$
- B. $10 - 9$
- C. $1 - 9$
- D. $9 - 1$

1. **A**

2. **D**

3. **A**

4. **D**

5. **C**

6. **D**

7. **C**

8. **C**

9. **B**