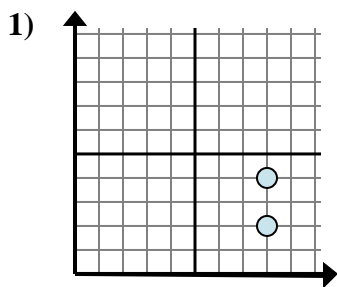


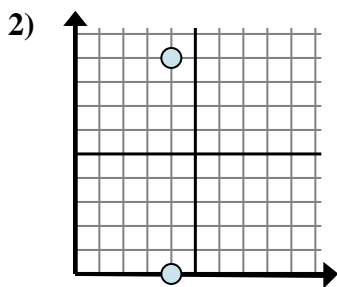


Determine which expression best shows the distance between the two points.

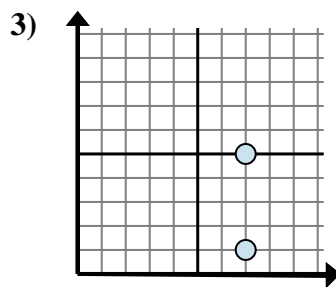
Answers



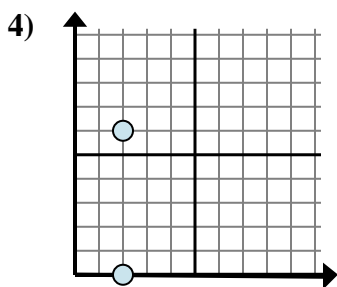
- A. $8 - 8$
- B. $4 - 2$
- C. $4 - 8$
- D. $8 - 4$



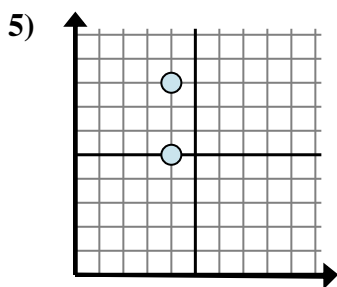
- A. $0 - 4$
- B. $4 - 4$
- C. $9 - 0$
- D. $4 - 4$



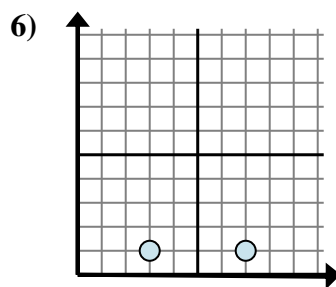
- A. $1 - 7$
- B. $1 - 5$
- C. $5 - 7$
- D. $5 - 1$



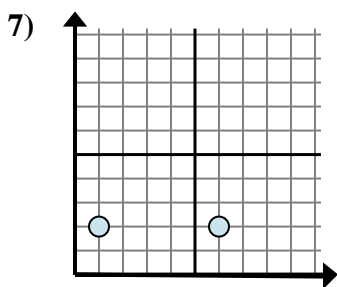
- A. $2 - 0$
- B. $6 - 0$
- C. $6 - 2$
- D. $2 - 2$



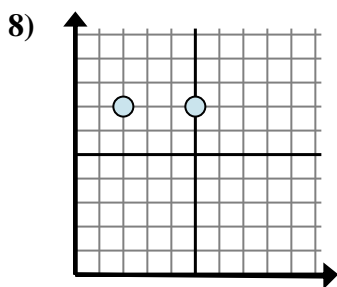
- A. $5 - 4$
- B. $8 - 5$
- C. $4 - 4$
- D. $5 - 8$



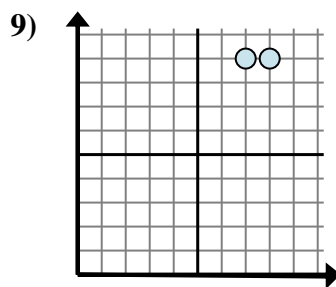
- A. $7 - 1$
- B. $7 - 3$
- C. $1 - 3$
- D. $3 - 1$



- A. $2 - 2$
- B. $2 - 6$
- C. $6 - 1$
- D. $1 - 2$



- A. $5 - 7$
- B. $5 - 2$
- C. $2 - 7$
- D. $7 - 7$

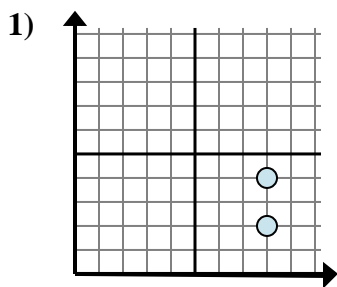


- A. $9 - 7$
- B. $8 - 7$
- C. $9 - 9$
- D. $7 - 8$

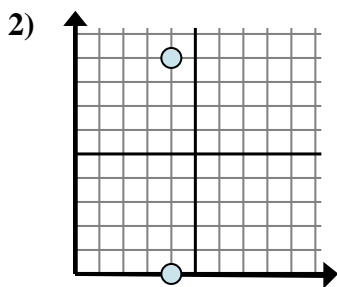
1. _____
2. _____
3. _____
4. _____
5. _____
6. _____
7. _____
8. _____
9. _____



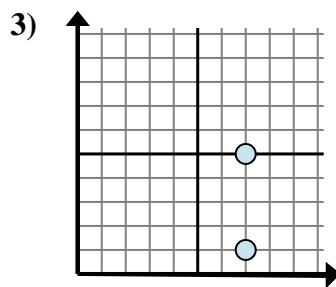
Determine which expression best shows the distance between the two points.



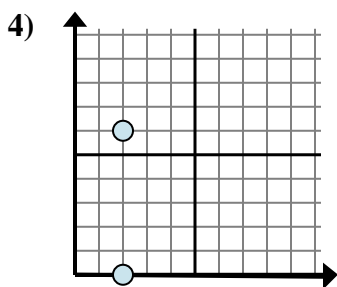
- A. $8 - 8$
- B. $4 - 2$
- C. $4 - 8$
- D. $8 - 4$



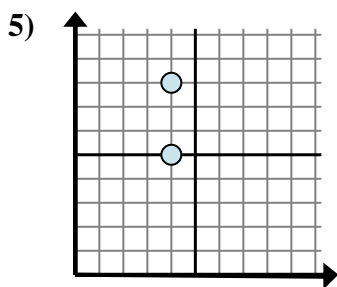
- A. $0 - 4$
- B. $4 - 4$
- C. $9 - 0$
- D. $4 - 4$



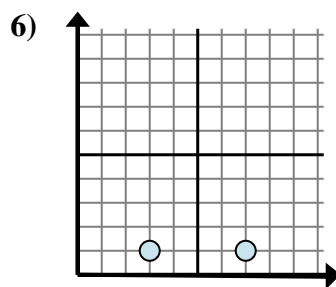
- A. $1 - 7$
- B. $1 - 5$
- C. $5 - 7$
- D. $5 - 1$



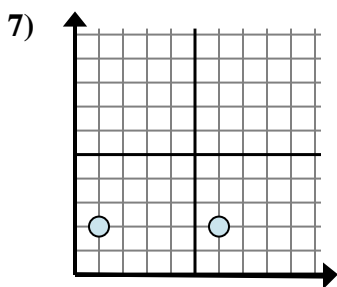
- A. $2 - 0$
- B. $6 - 0$
- C. $6 - 2$
- D. $2 - 2$



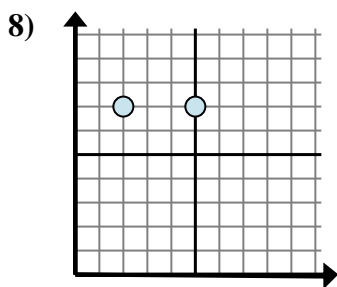
- A. $5 - 4$
- B. $8 - 5$
- C. $4 - 4$
- D. $5 - 8$



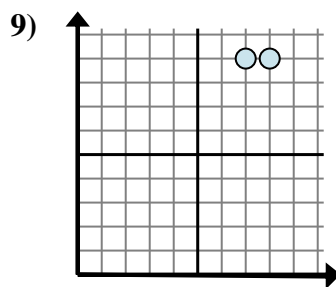
- A. $7 - 1$
- B. $7 - 3$
- C. $1 - 3$
- D. $3 - 1$



- A. $2 - 2$
- B. $2 - 6$
- C. $6 - 1$
- D. $1 - 2$



- A. $5 - 7$
- B. $5 - 2$
- C. $2 - 7$
- D. $7 - 7$



- A. $9 - 7$
- B. $8 - 7$
- C. $9 - 9$
- D. $7 - 8$

Answers

1. **B**

2. **C**

3. **D**

4. **B**

5. **B**

6. **B**

7. **C**

8. **B**

9. **B**