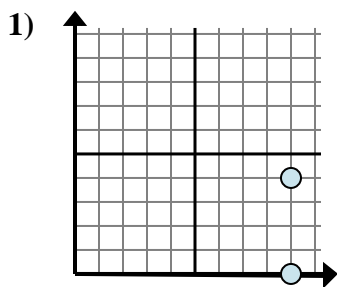


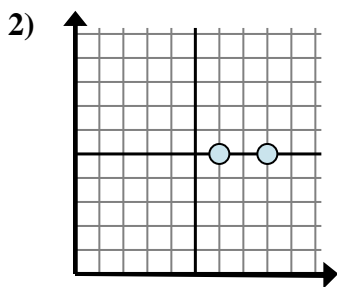


Determine which expression best shows the distance between the two points.

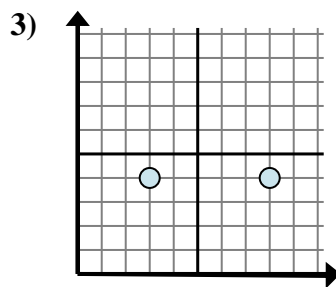
Answers



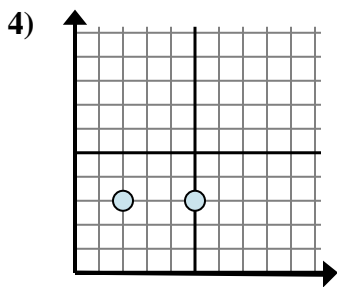
- A. $0 - 4$
- B. $9 - 0$
- C. $4 - 0$
- D. $9 - 9$



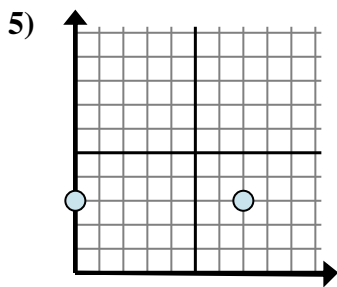
- A. $5 - 5$
- B. $6 - 5$
- C. $5 - 6$
- D. $8 - 6$



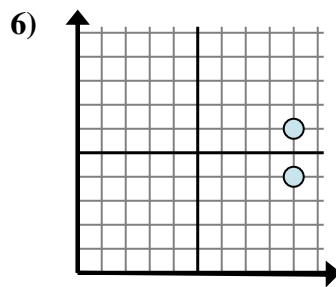
- A. $8 - 4$
- B. $4 - 3$
- C. $4 - 4$
- D. $8 - 3$



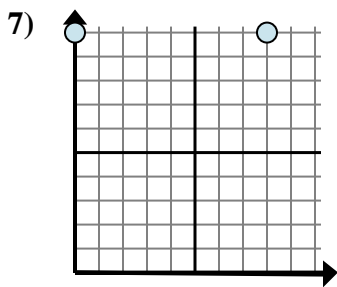
- A. $5 - 2$
- B. $3 - 3$
- C. $3 - 5$
- D. $2 - 5$



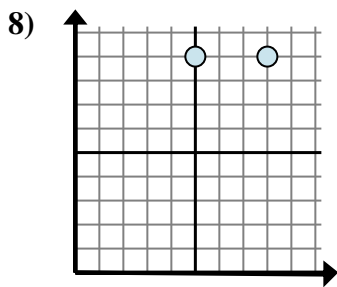
- A. $7 - 0$
- B. $3 - 3$
- C. $3 - 3$
- D. $3 - 7$



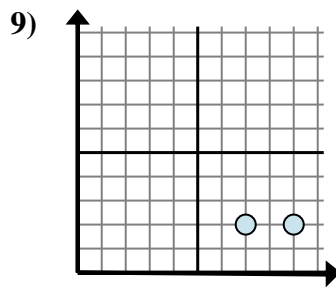
- A. $4 - 9$
- B. $9 - 9$
- C. $4 - 6$
- D. $6 - 4$



- A. $0 - 8$
- B. $10 - 10$
- C. $8 - 10$
- D. $8 - 0$



- A. $5 - 8$
- B. $9 - 5$
- C. $8 - 5$
- D. $9 - 9$



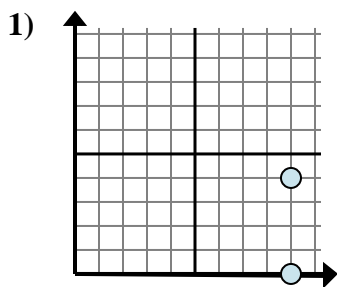
- A. $7 - 2$
- B. $9 - 2$
- C. $2 - 7$
- D. $9 - 7$

1. _____
2. _____
3. _____
4. _____
5. _____
6. _____
7. _____
8. _____
9. _____

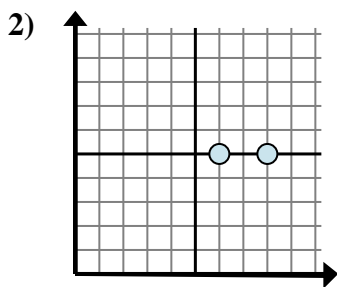


Determine which expression best shows the distance between the two points.

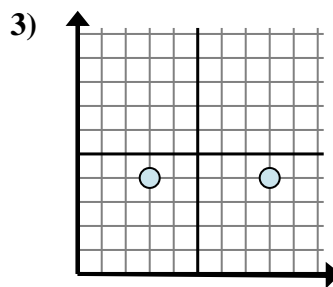
Answers



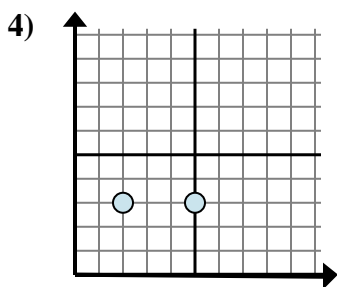
- A. $0 - 4$
- B. $9 - 0$
- C. $4 - 0$
- D. $9 - 9$



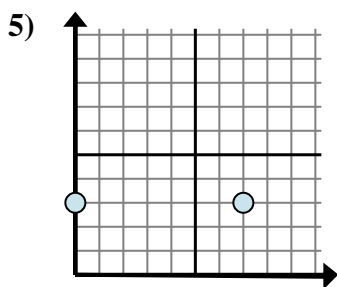
- A. $5 - 5$
- B. $6 - 5$
- C. $5 - 6$
- D. $8 - 6$



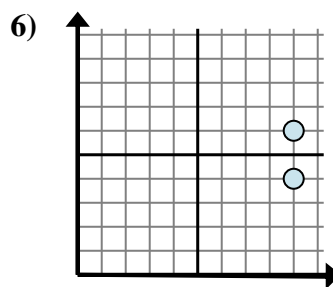
- A. $8 - 4$
- B. $4 - 3$
- C. $4 - 4$
- D. $8 - 3$



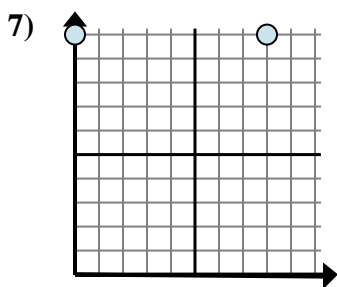
- A. $5 - 2$
- B. $3 - 3$
- C. $3 - 5$
- D. $2 - 5$



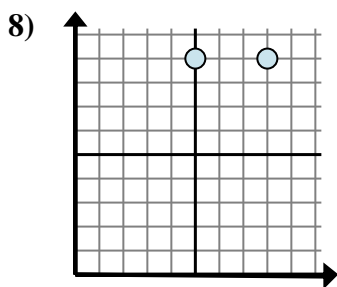
- A. $7 - 0$
- B. $3 - 3$
- C. $3 - 3$
- D. $3 - 7$



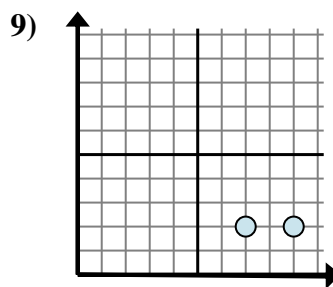
- A. $4 - 9$
- B. $9 - 9$
- C. $4 - 6$
- D. $6 - 4$



- A. $0 - 8$
- B. $10 - 10$
- C. $8 - 10$
- D. $8 - 0$



- A. $5 - 8$
- B. $9 - 5$
- C. $8 - 5$
- D. $9 - 9$



- A. $7 - 2$
- B. $9 - 2$
- C. $2 - 7$
- D. $9 - 7$

- 1. **C**
- 2. **D**
- 3. **D**
- 4. **A**
- 5. **A**
- 6. **D**
- 7. **D**
- 8. **C**
- 9. **D**