



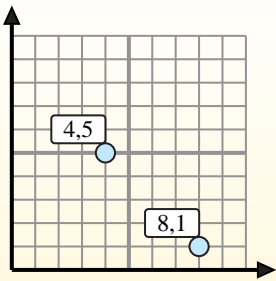
Find the midpoint of the set of coordinates.

Midpoint Formula

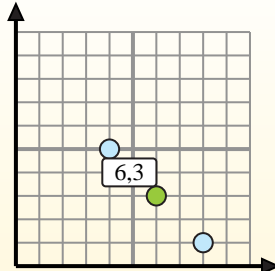
$$\frac{x_1 + x_2}{2}, \frac{y_1 + y_2}{2}$$

To find the midpoint of the coordinates (4,5) and (8,1), plug the values into the midpoint formula.

$$\frac{4 + 8}{2}, \frac{5 + 1}{2}$$



The midpoint is at (6,3).



Answers

1) (8, 6) & (3, 10)

2) (8, 7) & (8, 5)

3) (2, 5) & (2, 6)

4) (10, 7) & (3, 0)

5) (8, 10) & (7, 3)

6) (3, 7) & (10, 0)

7) (1, 6) & (10, 3)

8) (1, 1) & (1, 9)

9) (3, 4) & (7, 9)

10) (1, 0) & (2, 1)

11) (4, 8) & (10, 10)

12) (2, 2) & (3, 8)

1. _____
2. _____
3. _____
4. _____
5. _____
6. _____
7. _____
8. _____
9. _____
10. _____
11. _____
12. _____



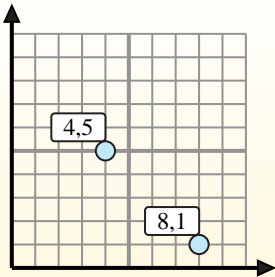
Find the midpoint of the set of coordinates.

Midpoint Formula

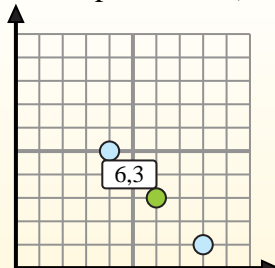
$$\frac{x_1 + x_2}{2}, \frac{y_1 + y_2}{2}$$

To find the midpoint of the coordinates (4,5) and (8,1), plug the values into the midpoint formula.

$$\frac{4 + 8}{2}, \frac{5 + 1}{2}$$



The midpoint is at (6,3).



Answers

1) $(8, 6) \& (3, 10) \left(\frac{8+3}{2}, \frac{6+10}{2} \right) = (5.5, 8)$

2) $(8, 7) \& (8, 5) \left(\frac{8+8}{2}, \frac{7+5}{2} \right) = (8, 6)$

3) $(2, 5) \& (2, 6) \left(\frac{2+2}{2}, \frac{5+6}{2} \right) = (2, 5.5)$

4) $(10, 7) \& (3, 0) \left(\frac{10+3}{2}, \frac{7+0}{2} \right) = (6.5, 3.5)$

5) $(8, 10) \& (7, 3) \left(\frac{8+7}{2}, \frac{10+3}{2} \right) = (7.5, 6.5)$

6) $(3, 7) \& (10, 0) \left(\frac{3+10}{2}, \frac{7+0}{2} \right) = (6.5, 3.5)$

7) $(1, 6) \& (10, 3) \left(\frac{1+10}{2}, \frac{6+3}{2} \right) = (5.5, 4.5)$

8) $(1, 1) \& (1, 9) \left(\frac{1+1}{2}, \frac{1+9}{2} \right) = (1, 5)$

9) $(3, 4) \& (7, 9) \left(\frac{3+7}{2}, \frac{4+9}{2} \right) = (5, 6.5)$

10) $(1, 0) \& (2, 1) \left(\frac{1+2}{2}, \frac{0+1}{2} \right) = (1.5, 0.5)$

11) $(4, 8) \& (10, 10) \left(\frac{4+10}{2}, \frac{8+10}{2} \right) = (7, 9)$

12) $(2, 2) \& (3, 8) \left(\frac{2+3}{2}, \frac{2+8}{2} \right) = (2.5, 5)$

1. (5.5, 8)

2. (8, 6)

3. (2, 5.5)

4. (6.5, 3.5)

5. (7.5, 6.5)

6. (6.5, 3.5)

7. (5.5, 4.5)

8. (1, 5)

9. (5, 6.5)

10. (1.5, 0.5)

11. (7, 9)

12. (2.5, 5)