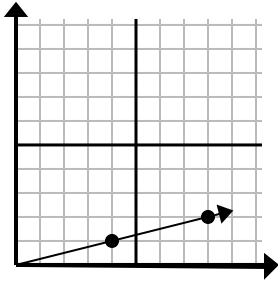




Determine which choice represents a point on the line if it were to continue.

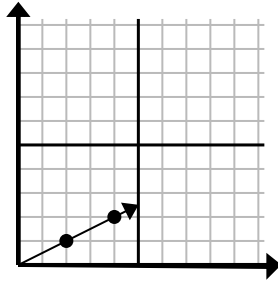
Answers

1)



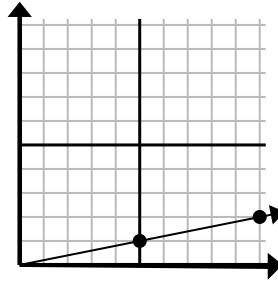
- A. (12, 3)
- B. (28, 7)
- C. (20, 5)
- D. (10, 2)

2)



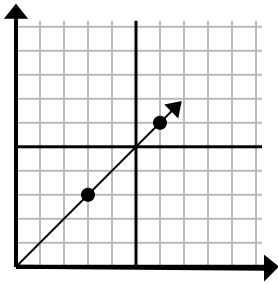
- A. (6, 3)
- B. (10, 5)
- C. (14, 7)
- D. (7, 3)

3)



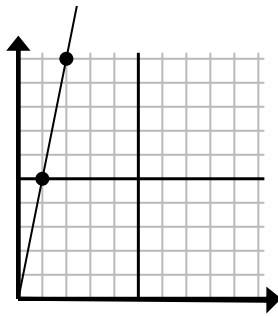
- A. (14, 3)
- B. (13, 5)
- C. (15, 3)
- D. (35, 7)

4)



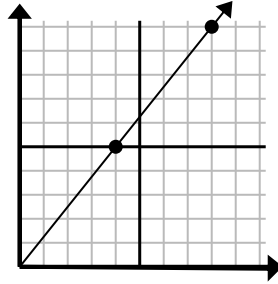
- A. (8, 7)
- B. (15, 15)
- C. (9, 9)
- D. (21, 21)

5)



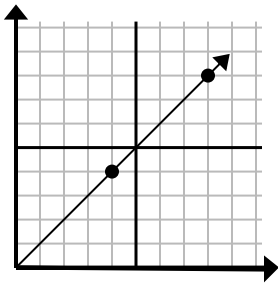
- A. (3, 15)
- B. (3, 7)
- C. (7, 35)
- D. (5, 25)

6)



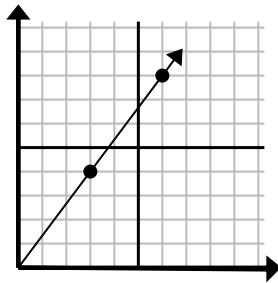
- A. (12, 10)
- B. (24, 30)
- C. (13, 9)
- D. (12, 15)

7)



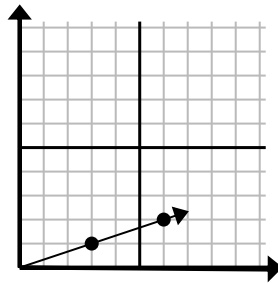
- A. (12, 8)
- B. (12, 12)
- C. (13, 8)
- D. (20, 20)

8)



- A. (21, 28)
- B. (8, 6)
- C. (9, 12)
- D. (9, 7)

9)

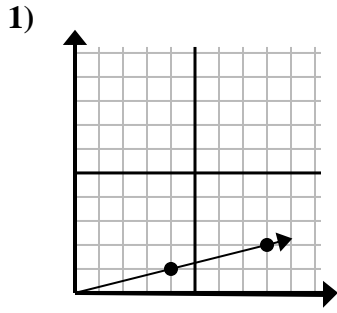


- A. (15, 5)
- B. (9, 3)
- C. (10, 2)
- D. (12, 4)

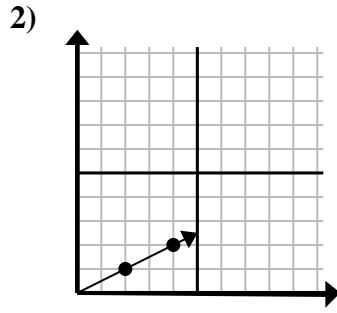
1. _____
2. _____
3. _____
4. _____
5. _____
6. _____
7. _____
8. _____
9. _____



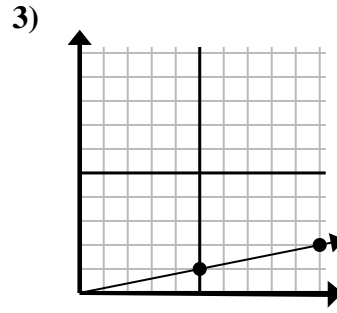
Determine which choice represents a point on the line if it were to continue.



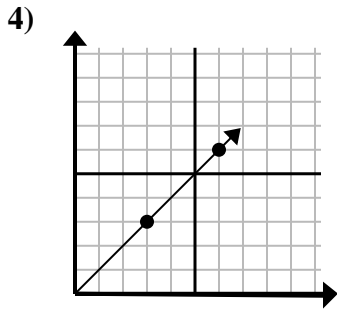
- A. (12, 3)
- B. (28, 7)
- C. (20, 5)
- D. (10, 2)



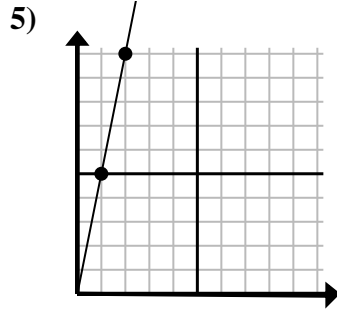
- A. (6, 3)
- B. (10, 5)
- C. (14, 7)
- D. (7, 3)



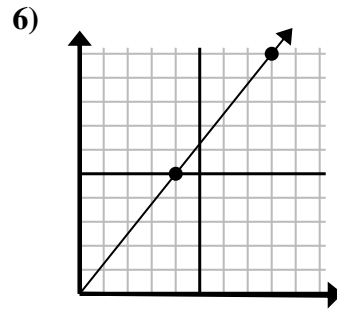
- A. (14, 3)
- B. (13, 5)
- C. (15, 3)
- D. (35, 7)



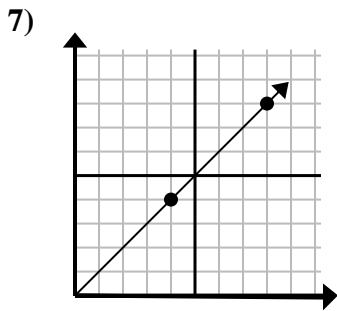
- A. (8, 7)
- B. (15, 15)
- C. (9, 9)
- D. (21, 21)



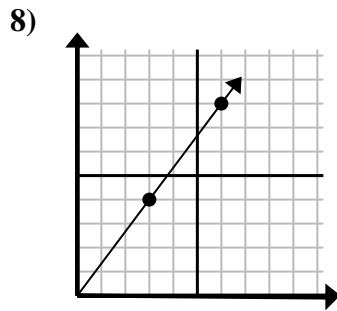
- A. (3, 15)
- B. (3, 7)
- C. (7, 35)
- D. (5, 25)



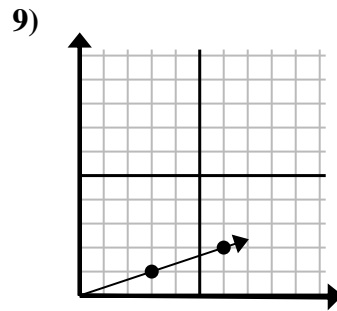
- A. (12, 10)
- B. (24, 30)
- C. (13, 9)
- D. (12, 15)



- A. (12, 8)
- B. (12, 12)
- C. (13, 8)
- D. (20, 20)



- A. (21, 28)
- B. (8, 6)
- C. (9, 12)
- D. (9, 7)



- A. (15, 5)
- B. (9, 3)
- C. (10, 2)
- D. (12, 4)

Answers

- 1. **A**
- 2. **A**
- 3. **C**
- 4. **C**
- 5. **A**
- 6. **D**
- 7. **B**
- 8. **C**
- 9. **B**