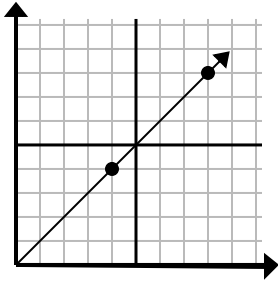




Determine which choice represents a point on the line if it were to continue.

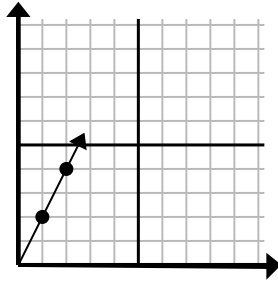
Answers

1)



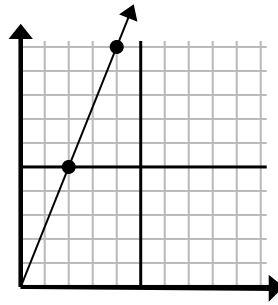
- A. (12, 12)
- B. (16, 16)
- C. (11, 6)
- D. (11, 7)

2)



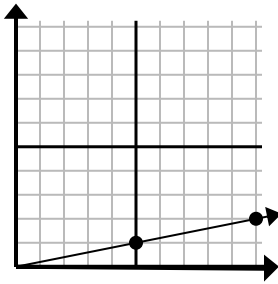
- A. (5, 10)
- B. (3, 6)
- C. (4, 8)
- D. (4, 6)

3)



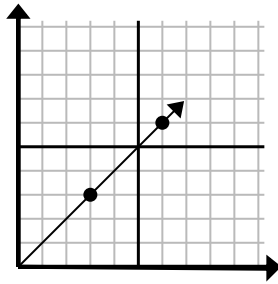
- A. (6, 15)
- B. (10, 25)
- C. (14, 35)
- D. (5, 7)

4)



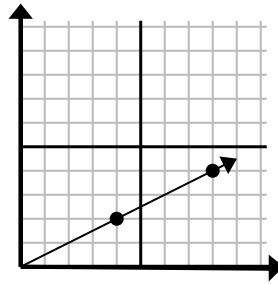
- A. (20, 4)
- B. (25, 5)
- C. (15, 4)
- D. (15, 3)

5)



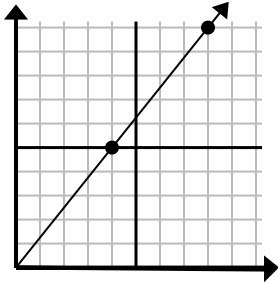
- A. (10, 7)
- B. (9, 9)
- C. (21, 21)
- D. (18, 18)

6)



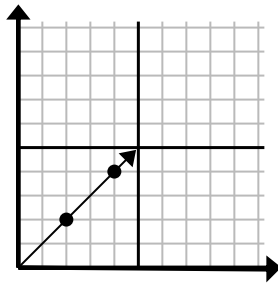
- A. (16, 8)
- B. (12, 3)
- C. (12, 6)
- D. (12, 7)

7)



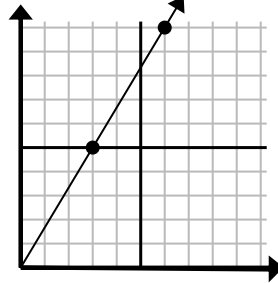
- A. (24, 30)
- B. (12, 15)
- C. (20, 25)
- D. (9, 10)

8)



- A. (5, 6)
- B. (6, 6)
- C. (9, 6)
- D. (10, 10)

9)



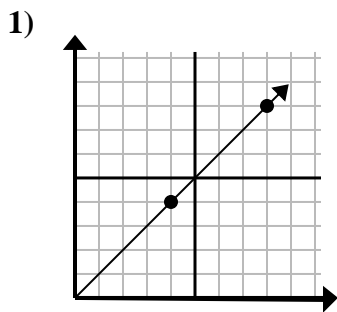
- A. (8, 8)
- B. (9, 10)
- C. (9, 15)
- D. (18, 30)

1. _____
2. _____
3. _____
4. _____
5. _____
6. _____
7. _____
8. _____
9. _____

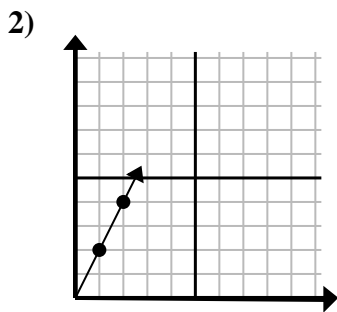


Determine which choice represents a point on the line if it were to continue.

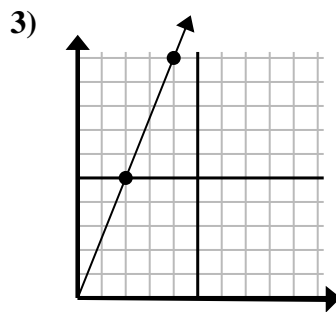
Answers



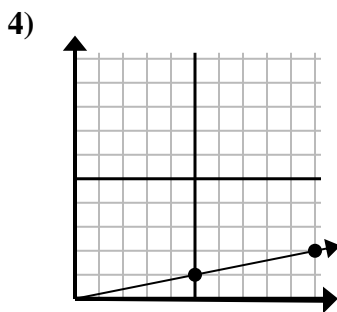
- A. (12, 12)
- B. (16, 16)
- C. (11, 6)
- D. (11, 7)



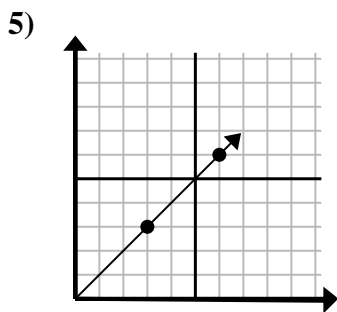
- A. (5, 10)
- B. (3, 6)
- C. (4, 8)
- D. (4, 6)



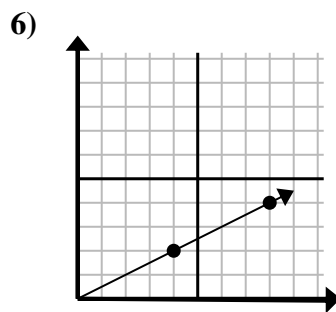
- A. (6, 15)
- B. (10, 25)
- C. (14, 35)
- D. (5, 7)



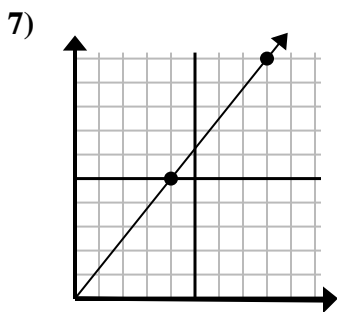
- A. (20, 4)
- B. (25, 5)
- C. (15, 4)
- D. (15, 3)



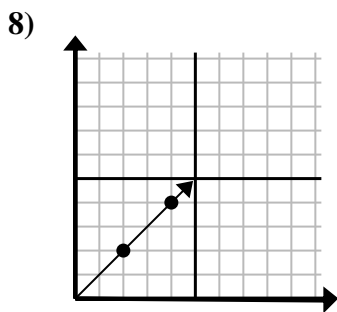
- A. (10, 7)
- B. (9, 9)
- C. (21, 21)
- D. (18, 18)



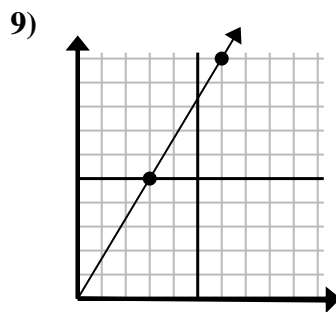
- A. (16, 8)
- B. (12, 3)
- C. (12, 6)
- D. (12, 7)



- A. (24, 30)
- B. (12, 15)
- C. (20, 25)
- D. (9, 10)



- A. (5, 6)
- B. (6, 6)
- C. (9, 6)
- D. (10, 10)



- A. (8, 8)
- B. (9, 10)
- C. (9, 15)
- D. (18, 30)

- 1. **A**
- 2. **B**
- 3. **A**
- 4. **D**
- 5. **B**
- 6. **C**
- 7. **B**
- 8. **B**
- 9. **C**