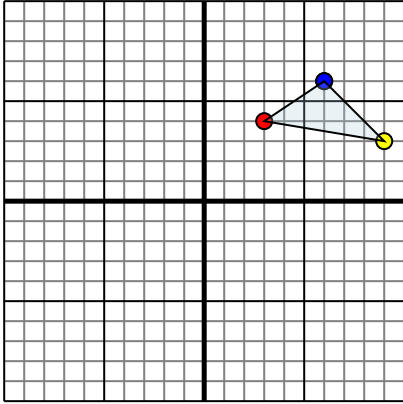




Reflect each shape as described.

1)

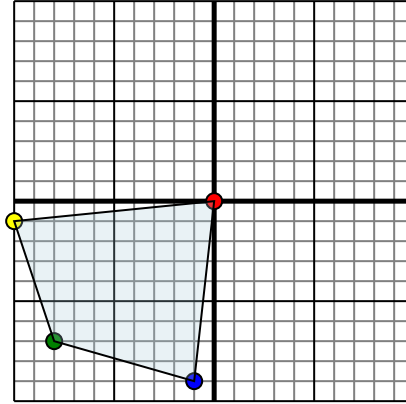


The shape above has the following coordinates:

- A. (3,4)
- B. (9,3)
- C. (6,6)

Reflect the shape over the X axis.

2)

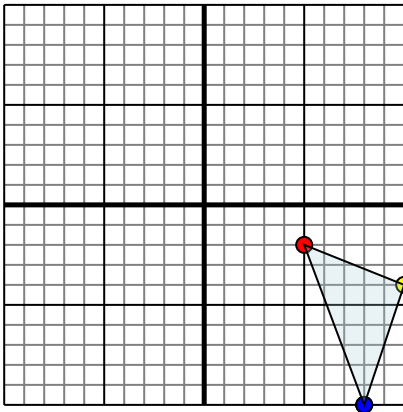


The shape above has the following coordinates:

- A. (0,0)
- B. (-10,-1)
- C. (-8,-7)
- D. (-1,-9)

Reflect the shape over the X axis.

3)

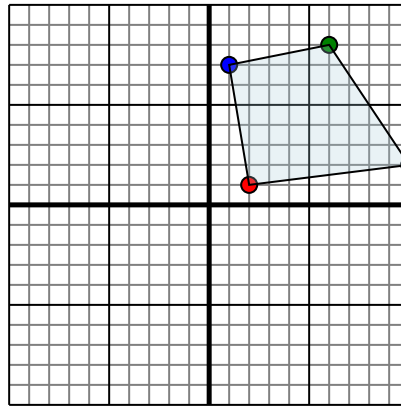


The shape above has the following coordinates:

- A. (5,-2)
- B. (10,-4)
- C. (8,-10)

Reflect the shape over the X axis.

4)



The shape above has the following coordinates:

- A. (2,1)
- B. (10,2)
- C. (6,8)
- D. (1,7)

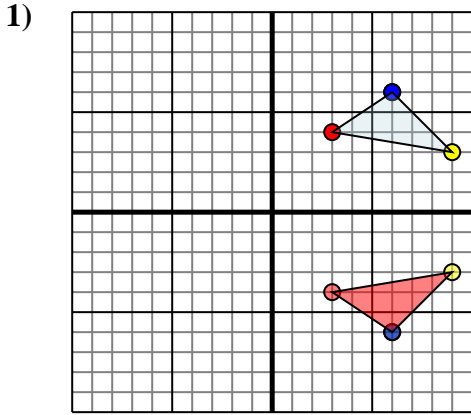
Reflect the shape over the Y axis.

Answers

- 1. _____
- 2. _____
- 3. _____
- 4. _____



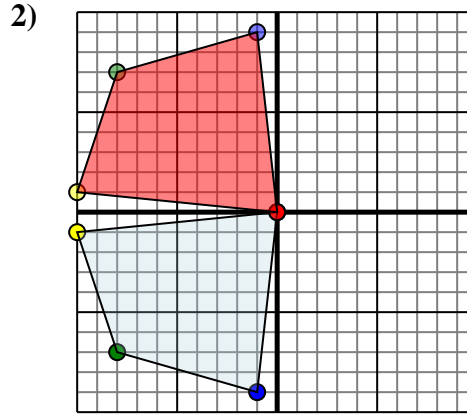
Reflect each shape as described.



The shape above has the following coordinates:

- A. (3,4)
- B. (9,3)
- C. (6,6)

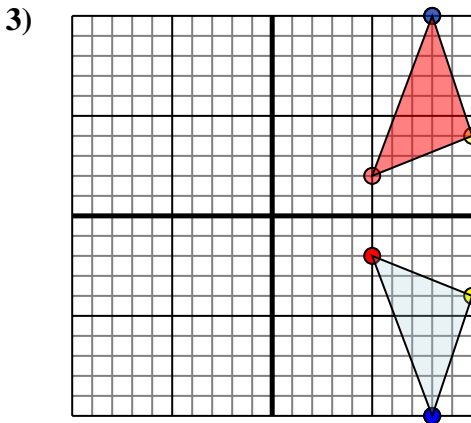
Reflect the shape over the X axis.



The shape above has the following coordinates:

- A. (0,0)
- B. (-10,-1)
- C. (-8,-7)
- D. (-1,-9)

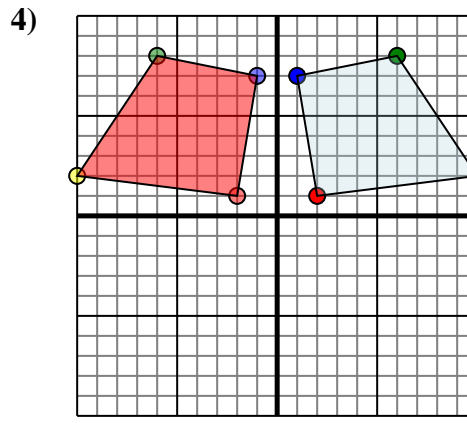
Reflect the shape over the X axis.



The shape above has the following coordinates:

- A. (5,-2)
- B. (10,-4)
- C. (8,-10)

Reflect the shape over the X axis.



The shape above has the following coordinates:

- A. (2,1)
- B. (10,2)
- C. (6,8)
- D. (1,7)

Reflect the shape over the Y axis.

Answers

1. **3,-4** **9,-3** **6,-6** Graph
2. **0,0** **-10,1** **-8,7** **-1,9** Graph
3. **5,2** **10,4** **8,10** Graph
4. **-2,1** **-10,2** **-6,8** **-1,7** Graph