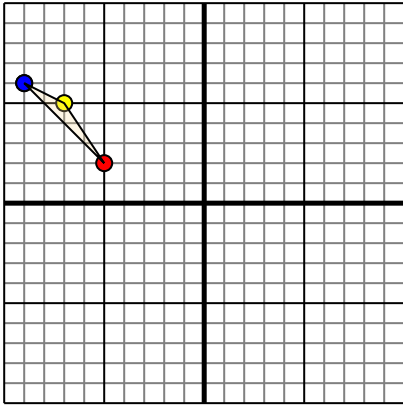




Translate each shape as described.

1)

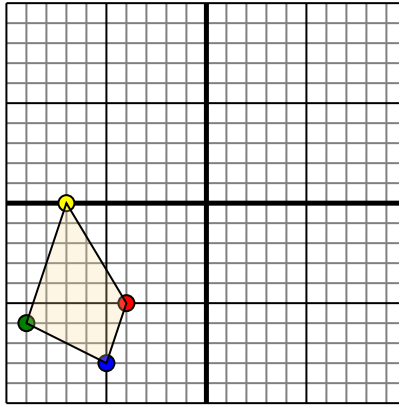


The shape above has the following coordinates:

- A. (-5,2)
- B. (-7,5)
- C. (-9,6)

Move the shape 2 units right and 9 units down.

2)

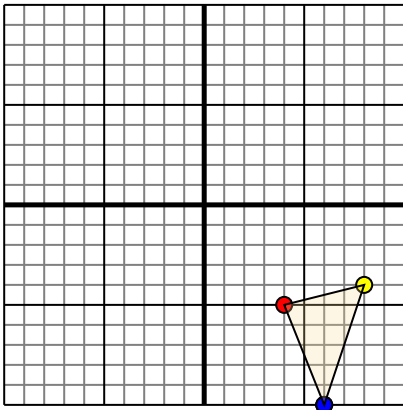


The shape above has the following coordinates:

- A. (-4,-5)
- B. (-7,0)
- C. (-9,-6)
- D. (-5,-8)

Move the shape 7 units right and 10 units up.

3)

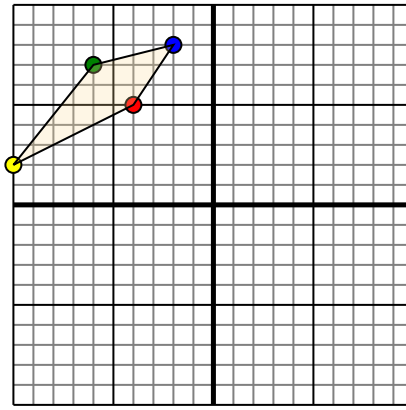


The shape above has the following coordinates:

- A. (4,-5)
- B. (8,-4)
- C. (6,-10)

Move the shape 7 units left and 6 units up.

4)



The shape above has the following coordinates:

- A. (-4,5)
- B. (-10,2)
- C. (-6,7)
- D. (-2,8)

Move the shape 6 units right and 10 units down.

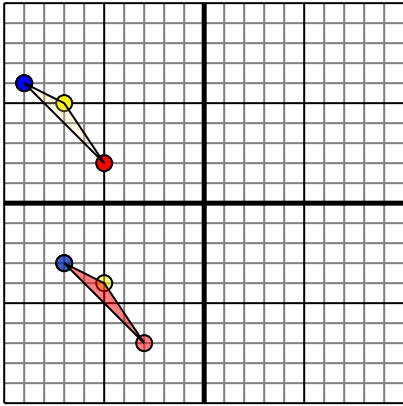
Answers

- 1. _____ [Graph](#)
- 2. _____ [Graph](#)
- 3. _____ [Graph](#)
- 4. _____ [Graph](#)



Translate each shape as described.

1)

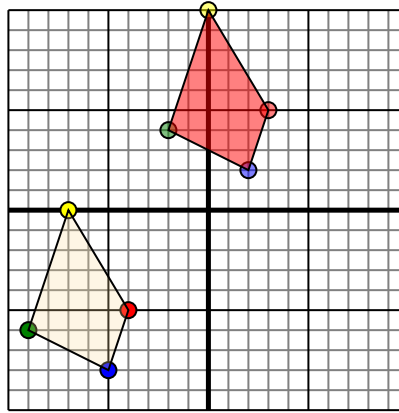


The shape above has the following coordinates:

- A. (-5,2)
- B. (-7,5)
- C. (-9,6)

Move the shape 2 units right and 9 units down.

2)

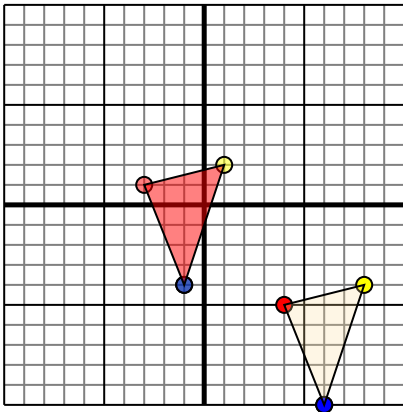


The shape above has the following coordinates:

- A. (-4,-5)
- B. (-7,0)
- C. (-9,-6)
- D. (-5,-8)

Move the shape 7 units right and 10 units up.

3)

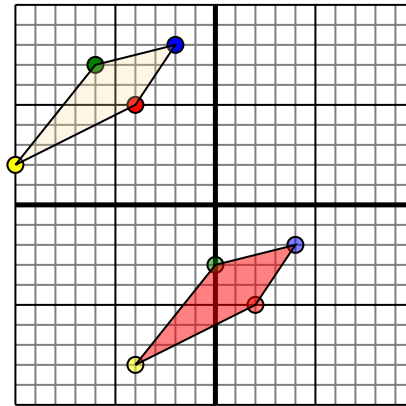


The shape above has the following coordinates:

- A. (4,-5)
- B. (8,-4)
- C. (6,-10)

Move the shape 7 units left and 6 units up.

4)



The shape above has the following coordinates:

- A. (-4,5)
- B. (-10,2)
- C. (-6,7)
- D. (-2,8)

Move the shape 6 units right and 10 units down.

Answers

1. -3,-7 -5,-4 -7,-3 [Graph](#)
2. 3,5 0,10 -2,4 2,2 [Graph](#)
3. -3,1 1,2 -1,-4 [Graph](#)
4. 2,-5 -4,-8 0,-3 4,-2 [Graph](#)