





Create and label the line plot using the set of numbers provided.

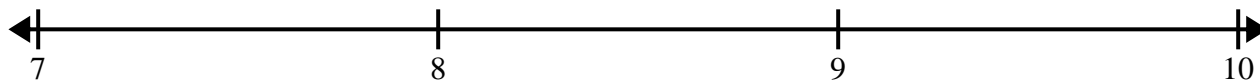
- 1) $7\frac{1}{2}$ 6 $6\frac{1}{2}$ 7 $8\frac{1}{2}$ $6\frac{1}{2}$ $8\frac{1}{2}$ 8
 $8\frac{1}{2}$ 7 $7\frac{1}{2}$ $7\frac{1}{2}$ 7 $6\frac{1}{2}$ 8 6




- 2) $11\frac{3}{8}$ $10\frac{3}{8}$ $10\frac{6}{8}$ $10\frac{5}{8}$ $9\frac{2}{8}$ $10\frac{2}{8}$ $10\frac{5}{8}$ $10\frac{6}{8}$
 $11\frac{5}{8}$ $10\frac{1}{8}$ $11\frac{3}{8}$ $9\frac{5}{8}$ $9\frac{7}{8}$ $11\frac{2}{8}$ $9\frac{3}{8}$ $11\frac{1}{8}$




- 3) $7\frac{1}{2}$ $7\frac{1}{2}$ 8 $7\frac{1}{2}$ 9 8 7 $8\frac{1}{2}$
 9 8 $9\frac{1}{2}$ $9\frac{1}{2}$ 7 $8\frac{1}{2}$ 9 $8\frac{1}{2}$



- 4) $4\frac{5}{8}$ $6\frac{4}{8}$ $4\frac{1}{8}$ $6\frac{7}{8}$ $4\frac{7}{8}$ $6\frac{1}{8}$ $6\frac{5}{8}$ $5\frac{3}{8}$
 $5\frac{4}{8}$ $5\frac{4}{8}$ $4\frac{6}{8}$ $6\frac{5}{8}$ $6\frac{4}{8}$ $4\frac{3}{8}$ $5\frac{4}{8}$ $6\frac{2}{8}$



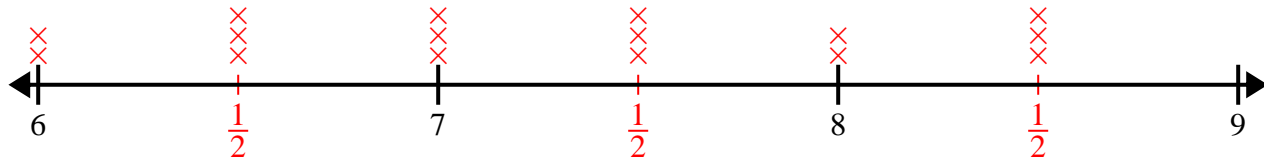
- 5) $8\frac{1}{4}$ $9\frac{1}{4}$ 8 $8\frac{3}{4}$ $7\frac{3}{4}$ $7\frac{1}{4}$ $8\frac{2}{4}$ $7\frac{3}{4}$
 $7\frac{1}{4}$ $7\frac{3}{4}$ $8\frac{1}{4}$ $7\frac{1}{4}$ $7\frac{2}{4}$ $8\frac{1}{4}$ $9\frac{2}{4}$ 7



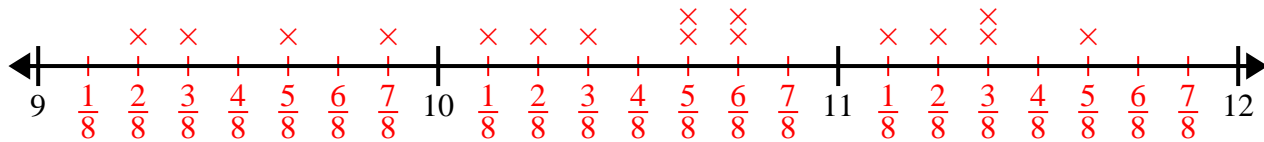


Create and label the line plot using the set of numbers provided.

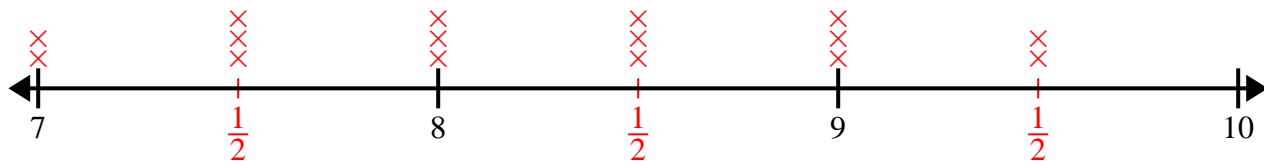
- 1) $7\frac{1}{2}$ 6 $6\frac{1}{2}$ 7 $8\frac{1}{2}$ $6\frac{1}{2}$ $8\frac{1}{2}$ 8
 $8\frac{1}{2}$ 7 $7\frac{1}{2}$ $7\frac{1}{2}$ 7 $6\frac{1}{2}$ 8 6



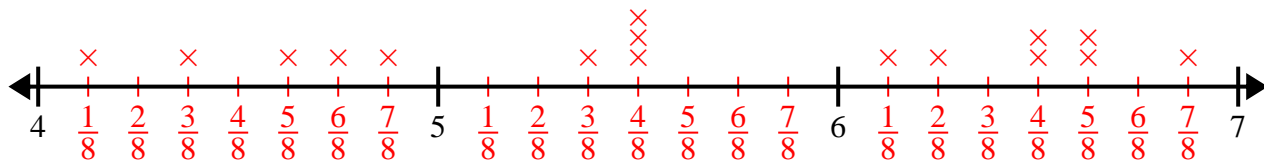
- 2) $11\frac{3}{8}$ $10\frac{3}{8}$ $10\frac{6}{8}$ $10\frac{5}{8}$ $9\frac{2}{8}$ $10\frac{2}{8}$ $10\frac{5}{8}$ $10\frac{6}{8}$
 $11\frac{5}{8}$ $10\frac{1}{8}$ $11\frac{3}{8}$ $9\frac{5}{8}$ $9\frac{7}{8}$ $11\frac{2}{8}$ $9\frac{3}{8}$ $11\frac{1}{8}$



- 3) $7\frac{1}{2}$ $7\frac{1}{2}$ 8 $7\frac{1}{2}$ 9 8 7 $8\frac{1}{2}$
 9 8 $9\frac{1}{2}$ $9\frac{1}{2}$ 7 $8\frac{1}{2}$ 9 $8\frac{1}{2}$



- 4) $4\frac{5}{8}$ $6\frac{4}{8}$ $4\frac{1}{8}$ $6\frac{7}{8}$ $4\frac{7}{8}$ $6\frac{1}{8}$ $6\frac{5}{8}$ $5\frac{3}{8}$
 $5\frac{4}{8}$ $5\frac{4}{8}$ $4\frac{6}{8}$ $6\frac{5}{8}$ $6\frac{4}{8}$ $4\frac{3}{8}$ $5\frac{4}{8}$ $6\frac{2}{8}$



- 5) $8\frac{1}{4}$ $9\frac{1}{4}$ 8 $8\frac{3}{4}$ $7\frac{3}{4}$ $7\frac{1}{4}$ $8\frac{2}{4}$ $7\frac{3}{4}$
 $7\frac{1}{4}$ $7\frac{3}{4}$ $8\frac{1}{4}$ $7\frac{1}{4}$ $7\frac{2}{4}$ $8\frac{1}{4}$ $9\frac{2}{4}$ 7

