




Measure each of the bars (in centimeters) and then generate a line plot based on the information.

Answers


















- 1. \_\_\_\_\_
- 2. \_\_\_\_\_
- 3. \_\_\_\_\_
- 4. \_\_\_\_\_
- 5. \_\_\_\_\_
- 6. \_\_\_\_\_
- 7. \_\_\_\_\_
- 8. \_\_\_\_\_
- 9. \_\_\_\_\_
- 10. \_\_\_\_\_
- 11. \_\_\_\_\_
- 12. \_\_\_\_\_
- 13. \_\_\_\_\_
- 14. \_\_\_\_\_
- 15. \_\_\_\_\_

**Line Plot**



Measure each of the bars (in centimeters) and then generate a line plot based on the information.

- 1)  6
- 2)  6
- 3)  9
- 4)  6
- 5)  6
- 6)  6
- 7)  6
- 8)  9
- 9)  9
- 10)  9
- 11)  6
- 12)  6
- 13)  2
- 14)  9
- 15)  3

- Answers
- 1. 6
  - 2. 6
  - 3. 9
  - 4. 6
  - 5. 6
  - 6. 6
  - 7. 6
  - 8. 9
  - 9. 9
  - 10. 9
  - 11. 6
  - 12. 6
  - 13. 2
  - 14. 9
  - 15. 3

