



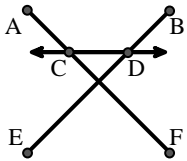
Match the description on the top with the visual image on the bottom.

**Answers**

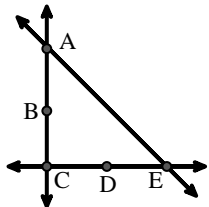
- 1)  $\overleftrightarrow{AB}$  intersecting  $\overleftrightarrow{AD}$
- 2) Acute  $\angle BED$
- 3)  $\overline{BE}$  intersecting  $\overleftrightarrow{CD}$
- 4)  $\angle BAC$  creating an obtuse angle
- 5) D as the midpoint of  $\overleftrightarrow{CE}$
- 6)  $\overleftrightarrow{BC}$  intersecting  $\angle ACD$
- 7)  $\overleftrightarrow{AC}$  intersected by  $\overline{BD}$
- 8)  $\overleftrightarrow{AC}$  perpendicular to  $\overleftrightarrow{AD}$
- 9)  $\overleftrightarrow{AB}$  intersecting  $\angle BCD$  at point B
- 10)  $\overleftrightarrow{AC}$  parallel to  $\overleftrightarrow{EB}$
- 11)  $\angle DEC$  intersected by  $\overleftrightarrow{AC}$
- 12) Acute  $\angle ABC$  intersecting  $\overleftrightarrow{AD}$

1. \_\_\_\_\_
2. \_\_\_\_\_
3. \_\_\_\_\_
4. \_\_\_\_\_
5. \_\_\_\_\_
6. \_\_\_\_\_
7. \_\_\_\_\_
8. \_\_\_\_\_
9. \_\_\_\_\_
10. \_\_\_\_\_
11. \_\_\_\_\_
12. \_\_\_\_\_

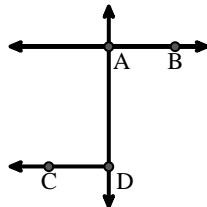
A.



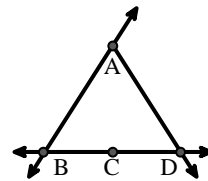
B.



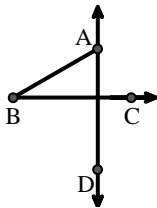
C.



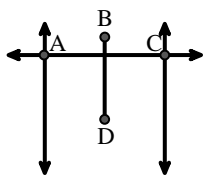
D.



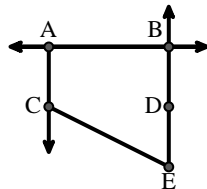
E.



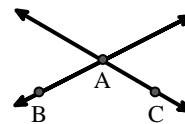
F.



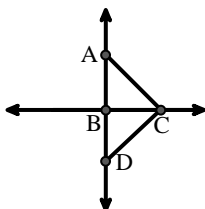
G.



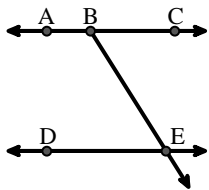
H.



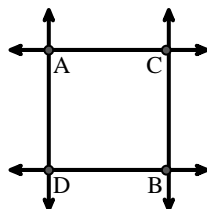
I.



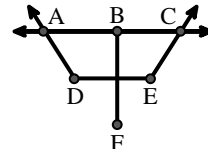
J.



K.



L.





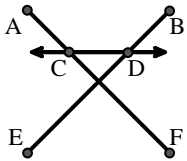
Match the description on the top with the visual image on the bottom.

**Answers**

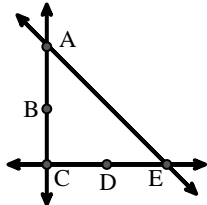
- 1)  $\overleftrightarrow{AB}$  intersecting  $\overleftrightarrow{AD}$
- 2) Acute  $\angle BED$
- 3)  $\overline{BE}$  intersecting  $\overleftrightarrow{CD}$
- 4)  $\angle BAC$  creating an obtuse angle
- 5) D as the midpoint of  $\overleftrightarrow{CE}$
- 6)  $\overleftrightarrow{BC}$  intersecting  $\angle ACD$
- 7)  $\overleftrightarrow{AC}$  intersected by  $\overline{BD}$
- 8)  $\overleftrightarrow{AC}$  perpendicular to  $\overleftrightarrow{AD}$
- 9)  $\overleftrightarrow{AB}$  intersecting  $\angle BCD$  at point B
- 10)  $\overleftrightarrow{AC}$  parallel to  $\overleftrightarrow{EB}$
- 11)  $\angle DEC$  intersected by  $\overleftrightarrow{AC}$
- 12) Acute  $\angle ABC$  intersecting  $\overleftrightarrow{AD}$

1. **C**
2. **J**
3. **A**
4. **H**
5. **B**
6. **I**
7. **F**
8. **K**
9. **D**
10. **G**
11. **L**
12. **E**

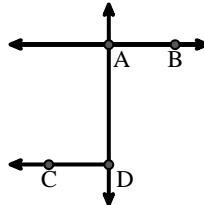
A.



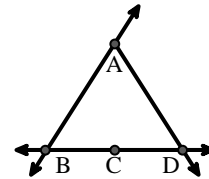
B.



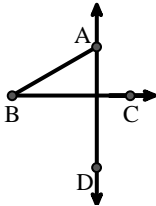
C.



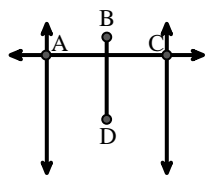
D.



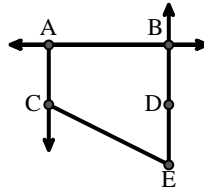
E.



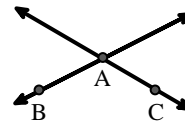
F.



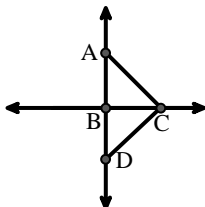
G.



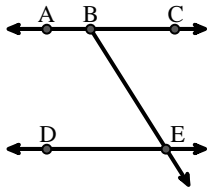
H.



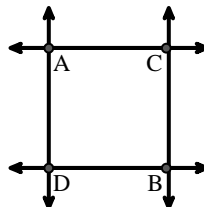
I.



J.



K.



L.

