



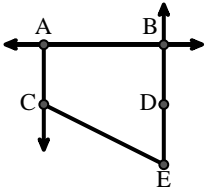
Match the description on the top with the visual image on the bottom.

**Answers**

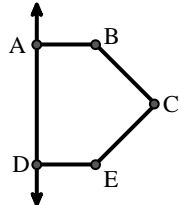
- 1)  $\overleftrightarrow{AD}$  intersecting  $\overleftrightarrow{BC}$  at point E
- 2)  $\overrightarrow{AC}$  parallel to  $\overrightarrow{EB}$
- 3) D as the midpoint of  $\overleftrightarrow{CE}$
- 4)  $\overleftrightarrow{AC}$  intersected by  $\overline{BD}$
- 5)  $\overline{BE}$  intersecting  $\overleftrightarrow{CD}$
- 6)  $\overleftrightarrow{BC}$  intersecting  $\angle ACD$
- 7)  $\angle BAC$  creating an obtuse angle
- 8) Acute  $\angle ABC$  intersecting  $\overleftrightarrow{AD}$
- 9)  $\overleftrightarrow{AB}$  intersecting  $\overleftrightarrow{AD}$
- 10)  $\overleftrightarrow{BA}$  intersecting  $\overleftrightarrow{AD}$
- 11)  $\overleftrightarrow{AB}$  parallel to  $\overleftrightarrow{CD}$
- 12) Right  $\angle ADE$

1. \_\_\_\_\_
2. \_\_\_\_\_
3. \_\_\_\_\_
4. \_\_\_\_\_
5. \_\_\_\_\_
6. \_\_\_\_\_
7. \_\_\_\_\_
8. \_\_\_\_\_
9. \_\_\_\_\_
10. \_\_\_\_\_
11. \_\_\_\_\_
12. \_\_\_\_\_

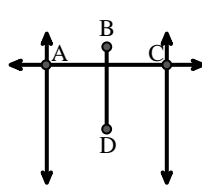
A.



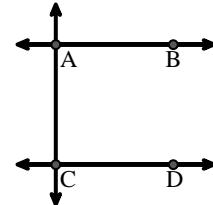
B.



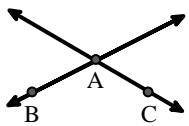
C.



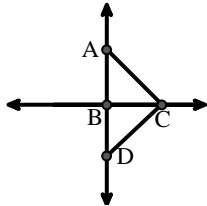
D.



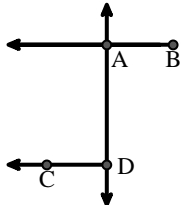
E.



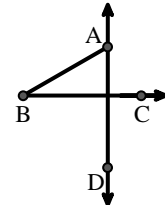
F.



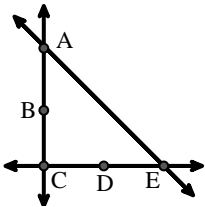
G.



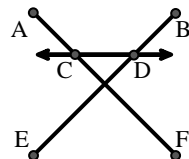
H.



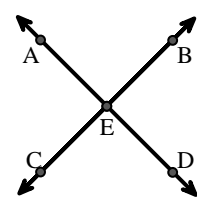
I.



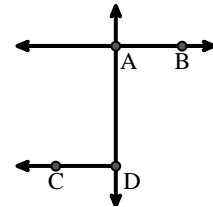
J.



K.



L.





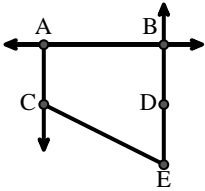
Match the description on the top with the visual image on the bottom.

**Answers**

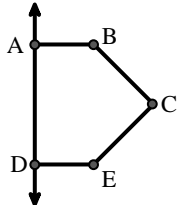
- 1)  $\overleftrightarrow{AD}$  intersecting  $\overleftrightarrow{BC}$  at point E
- 2)  $\overleftrightarrow{AC}$  parallel to  $\overleftrightarrow{EB}$
- 3) D as the midpoint of  $\overleftrightarrow{CE}$
- 4)  $\overleftrightarrow{AC}$  intersected by  $\overleftrightarrow{BD}$
- 5)  $\overleftrightarrow{BE}$  intersecting  $\overleftrightarrow{CD}$
- 6)  $\overleftrightarrow{BC}$  intersecting  $\angle ACD$
- 7)  $\angle BAC$  creating an obtuse angle
- 8) Acute  $\angle ABC$  intersecting  $\overleftrightarrow{AD}$
- 9)  $\overleftrightarrow{AB}$  intersecting  $\overleftrightarrow{AD}$
- 10)  $\overleftrightarrow{BA}$  intersecting  $\overleftrightarrow{AD}$
- 11)  $\overleftrightarrow{AB}$  parallel to  $\overleftrightarrow{CD}$
- 12) Right  $\angle ADE$

1. **K**
2. **A**
3. **I**
4. **C**
5. **J**
6. **F**
7. **E**
8. **H**
9. **L**
10. **G**
11. **D**
12. **B**

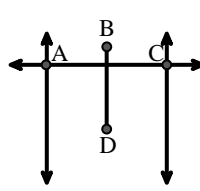
A.



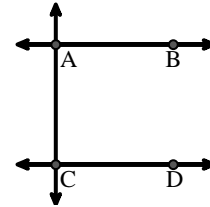
B.



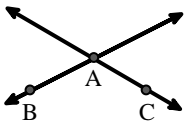
C.



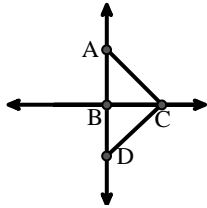
D.



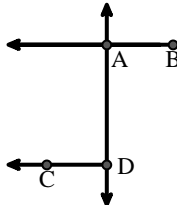
E.



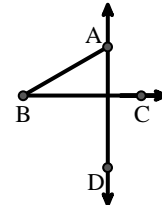
F.



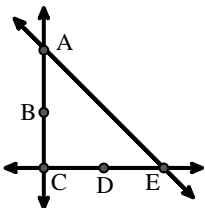
G.



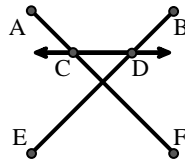
H.



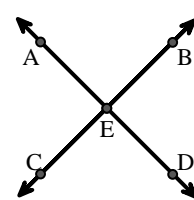
I.



J.



K.



L.

