



Determine which letter best represents the length / height.

**Answers**

**Inch (in)**

An inch is about the distance of the last joint of your finger.



**Foot (ft)**

A foot is 12 inches. The length of a ruler.



**Yard (yd)**

1 yard is the same as 3 feet. From the floor to a door knob is about 1 yard.




**Mile (mi)**

A mile is 5,280 feet. Most major roads are at least a mile long.



1. \_\_\_\_\_
2. \_\_\_\_\_
3. \_\_\_\_\_
4. \_\_\_\_\_
5. \_\_\_\_\_
6. \_\_\_\_\_
7. \_\_\_\_\_
8. \_\_\_\_\_
9. \_\_\_\_\_

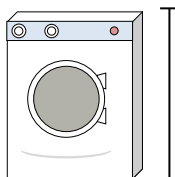
1)



Can of Soda

- A. 1 foot
- B. 1 inch
- C. 1 yard
- D. 4 inches


2)



Washing Machine

- A. 3 feet
- B. 1 foot
- C. 2 yards
- D. 4 inches

3)



Lollipop

- A. 1 foot
- B. 3 inches
- C. 1 mile
- D. 5 inches

4)



Bicycle

- A. 10 inches
- B. 3 inches
- C. 1 yard
- D. 3 yards


5)



Shovel

- A. 11 inches
- B. 2 feet
- C. 4 feet
- D. 3 yards

6)



Bowling Ball Height

- A. 10 inches
- B. 10 feet
- C. 1 yard
- D. 4 inches

7)



File Cabinet

- A. 11 inches
- B. 5 feet
- C. 1 foot
- D. 2 feet

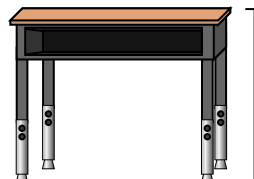
8)



Pencil

- A. 1 yard
- B. 7 inches
- C. 1 foot
- D. 1 inch

9)



Desk

- A. 2 yards
- B. 6 inches
- C. 11 inches
- D. 2 feet



Determine which letter best represents the length / height.

**Answers**

**Inch (in)**

**Foot (ft)**

**Yard (yd)**


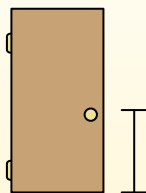
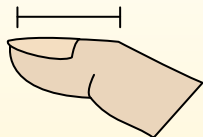
**Mile (mi)**

An inch is about the distance of the last joint of your finger.

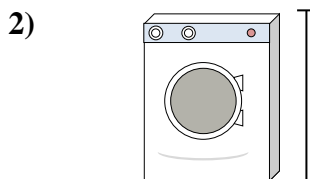
A foot is 12 inches. The length of a ruler.

1 yard is the same as 3 feet. From the floor to a door knob is about 1 yard.


A mile is 5,280 feet. Most major roads are at least a mile long.



- Can of Soda
- A. 1 foot
  - B. 1 inch
  - C. 1 yard
  - D. 4 inches




- Washing Machine
- A. 3 feet
  - B. 1 foot
  - C. 2 yards
  - D. 4 inches



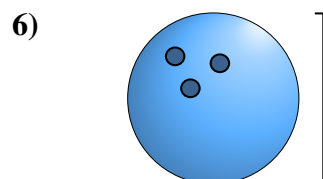
- Lollipop
- A. 1 foot
  - B. 3 inches
  - C. 1 mile
  - D. 5 inches



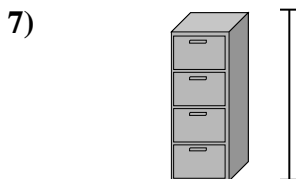
- Bicycle
- A. 10 inches
  - B. 3 inches
  - C. 1 yard
  - D. 3 yards



- Shovel
- A. 11 inches
  - B. 2 feet
  - C. 4 feet
  - D. 3 yards



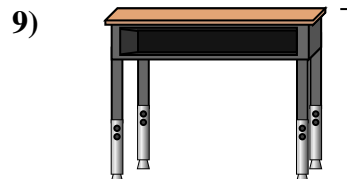
- Bowling Ball Height
- A. 10 inches
  - B. 10 feet
  - C. 1 yard
  - D. 4 inches



- File Cabinet
- A. 11 inches
  - B. 5 feet
  - C. 1 foot
  - D. 2 feet



- Pencil
- A. 1 yard
  - B. 7 inches
  - C. 1 foot
  - D. 1 inch



- Desk
- A. 2 yards
  - B. 6 inches
  - C. 11 inches
  - D. 2 feet

- 1.   **D**
- 2.   **A**
- 3.   **D**
- 4.   **C**
- 5.   **C**
- 6.   **A**
- 7.   **B**
- 8.   **B**
- 9.   **D**