




Measure the width and height of each block in inches and in centimeters.


Ex)



1)



2)



3)



4)

**Answers**Ex.  $\underline{3\frac{1}{2}}$  **1**  $\underline{8.9}$   $\underline{2.5}$ 

1. \_\_\_\_\_




2. \_\_\_\_\_

3. \_\_\_\_\_

4. \_\_\_\_\_



Measure the width and height of each block in inches and in centimeters.



**Answers**

- Ex.  $\underline{3\frac{1}{2}}$  **1**  $\underline{8.9}$   $\underline{2.5}$
1. **5** **1**  $\underline{12.7}$   $\underline{2.5}$
2.  $\underline{2\frac{1}{2}}$  **1**  $\underline{6.4}$   $\underline{2.5}$
3. **4**  $\underline{0\frac{1}{2}}$   $\underline{10.2}$  **1.3**
4.  $\underline{1\frac{1}{2}}$   $\underline{0\frac{1}{2}}$  **3.8** **1.3**