



Measure the width and height of each block in inches and in centimeters.

**Answers**

Ex)



Ex. 3 1/2 0 1/2 **8.9** **1.3**


1. \_\_\_\_\_

2. \_\_\_\_\_

3. \_\_\_\_\_

4. \_\_\_\_\_


1)




2)



3)



4)





Measure the width and height of each block in inches and in centimeters.

Ex)



**Answers**

Ex.  $3\frac{1}{2}$   $0\frac{1}{2}$  **8.9** **1.3**


1. **1**  $1\frac{1}{2}$  **2.5** **3.8**

2.  $1\frac{1}{2}$  **1** **3.8** **2.5**


3.  $5\frac{1}{2}$   $1\frac{1}{2}$  **14** **3.8**

4. **5** **1** **12.7** **2.5**


1)



2)



3)



4)

