




Measure the width and height of each block in inches and in centimeters.


Ex)



1)



2)



3)



4)



Answers

Ex. 5 1/2 1 14 2.5

1. _____

2. _____


3. _____

4. _____



Measure the width and height of each block in inches and in centimeters.

Ex)



Answers

Ex. 5 1/2 1 14 2.5

1. 2 0 1/2 5.1 1.3

2. 0 1/2 1 1.3 2.5

3. 3 1/2 1 8.9 2.5

4. 3 0 1/2 7.6 1.3

1)



2)



3)



4)

