





Use the units provided to measure the width of each of the bars.



Answers

1. \_\_\_\_\_

2. \_\_\_\_\_

3. \_\_\_\_\_

4. \_\_\_\_\_

5. \_\_\_\_\_

6. \_\_\_\_\_

7. \_\_\_\_\_


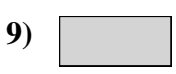
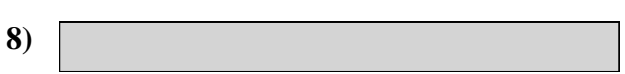


8. \_\_\_\_\_

9. \_\_\_\_\_

10. \_\_\_\_\_



Use the units provided to measure the width of each of the bars.



Answers

1. 8

2. 2

3. 3

4. 10

5. 7

6. 9

7. 4

8. 5

9. 1

10. 6