



Determine the amount of money shown.

Answers

1)



1. _____

2. _____

3. _____

4. _____

5. _____

2)



3)

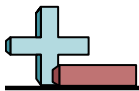


4)



5)





Determine the amount of money shown.



Answers

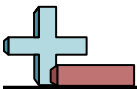
1. \$56.93

2. \$63.67

3. \$51.98

4. \$30.53

5. \$70.03



Determine the amount of money shown.

Answers



1. _____

2. _____

3. _____

4. _____

5. _____





Determine the amount of money shown.



Answers

1. \$47.85

2. \$28.55

3. \$5.59

4. \$64.52

5. \$53.78



Determine the amount of money shown.

Answers



1. _____

2. _____

3. _____

4. _____

5. _____





Determine the amount of money shown.



Answers

1. \$35.56

2. \$61.80

3. \$17.97


4. \$71.35

5. \$75.52



Determine the amount of money shown.

Answers



1. _____

2. _____

3. _____

4. _____

5. _____





Determine the amount of money shown.



Answers

1. \$47.27

2. \$22.22

3. \$55.00

4. \$73.99

5. \$52.43



Determine the amount of money shown.

Answers

1)



1. _____

2. _____

3. _____

4. _____

5. _____

2)



3)

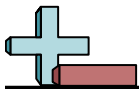


4)



5)





Determine the amount of money shown.



Answers

1. \$68.27

2. \$41.34

3. \$30.32

4. \$58.43

5. \$8.62



Determine the amount of money shown.

Answers



1. _____

2. _____

3. _____

4. _____

5. _____





Determine the amount of money shown.



Answers

1. \$28.26

2. \$63.27

3. \$53.28

4. \$65.32

5. \$25.32



Determine the amount of money shown.

Answers

1)



1. _____


2. _____

3. _____

4. _____

5. _____

2)



3)



4)



5)





Determine the amount of money shown.



Answers

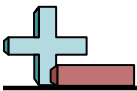
1. **\$97.62**

2. **\$15.69**

3. **\$83.32**

4. **\$98.13**

5. **\$52.33**



Determine the amount of money shown.

Answers



1. _____

2. _____

3. _____

4. _____

5. _____





Determine the amount of money shown.



Answers

1. \$92.02

2. \$71.22

3. \$63.89

4. \$67.29

5. \$90.57



Determine the amount of money shown.

Answers



1. _____

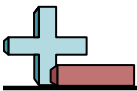
2. _____

3. _____

4. _____

5. _____





Determine the amount of money shown.

Answers



1. _____

2. _____

3. _____

4. _____

5. _____





Determine the amount of money shown.



Answers

1. \$36.22

2. \$66.88

3. \$79.35

4. \$64.81

5. \$68.28