



Solve each problem.

Answers

- 1) At the book fair Adam spent \$8.91 buying books. He gave the cashier the money shown. How much change should he get back?



1. _____

- 2) Robin bought a new board game for \$17.71. She gave the cashier the money shown. How much change should she get back?



2. _____

3. _____

4. _____

5. _____

6. _____

- 3) Rachel spent \$9.55 on a movie ticket. She gave the cashier the money shown. How much change should she get back?



- 4) Dave spent \$16.07 buying some new toys. He bought them using the money shown. How much change should he get back?



- 5) At the fair Tiffany spent \$4.61 buying fair food. She gave the cashier the money shown. How much change should she get back?



- 6) Tom spent \$14.46 on candy at the mall. He gave the cashier the money shown. How much change should he get back?





Solve each problem.

- 1) At the book fair Adam spent \$8.91 buying books. He gave the cashier the money shown. How much change should he get back?



- 2) Robin bought a new board game for \$17.71. She gave the cashier the money shown. How much change should she get back?



- 3) Rachel spent \$9.55 on a movie ticket. She gave the cashier the money shown. How much change should she get back?



- 4) Dave spent \$16.07 buying some new toys. He bought them using the money shown. How much change should he get back?



- 5) At the fair Tiffany spent \$4.61 buying fair food. She gave the cashier the money shown. How much change should she get back?



- 6) Tom spent \$14.46 on candy at the mall. He gave the cashier the money shown. How much change should he get back?



Answers

1. **\$1.09**

2. **\$0.10**

3. **\$0.05**

4. **\$3.93**

5. **\$16.09**

6. **\$5.54**



Solve each problem.

Answers

- 1) Paul spent \$13.91 buying some new toys. He bought them using the money shown. How much change should he get back?



1. _____

- 2) At the book fair Jerry spent \$13.16 buying books. He gave the cashier the money shown. How much change should he get back?



2. _____

3. _____

4. _____

5. _____

6. _____

- 3) Cody bought \$7.97 worth of groceries. He gave the cashier the money shown. How much change should he get back?



- 4) Bianca bought a new board game for \$13.57. She gave the cashier the money shown. How much change should she get back?



- 5) Amy spent \$16.14 on a movie ticket. She gave the cashier the money shown. How much change should she get back?



- 6) Victor spent \$3.95 on candy at the mall. He gave the cashier the money shown. How much change should he get back?





Solve each problem.

- 1) Paul spent \$13.91 buying some new toys. He bought them using the money shown. How much change should he get back?



- 2) At the book fair Jerry spent \$13.16 buying books. He gave the cashier the money shown. How much change should he get back?



- 3) Cody bought \$7.97 worth of groceries. He gave the cashier the money shown. How much change should he get back?



- 4) Bianca bought a new board game for \$13.57. She gave the cashier the money shown. How much change should she get back?



- 5) Amy spent \$16.14 on a movie ticket. She gave the cashier the money shown. How much change should she get back?



- 6) Victor spent \$3.95 on candy at the mall. He gave the cashier the money shown. How much change should he get back?



Answers

1. \$2.09

2. \$0.25

3. \$2.03

4. \$0.10

5. \$4.01

6. \$2.00



Solve each problem.

Answers

- 1) At the fair Faye spent \$6.51 buying fair food. She gave the cashier the money shown. How much change should she get back?



1. _____

2. _____

3. _____

- 2) At the book fair Oliver spent \$3.77 buying books. He gave the cashier the money shown. How much change should he get back?



4. _____

5. _____

6. _____

- 3) Billy spent \$16.69 buying some new toys. He bought them using the money shown. How much change should he get back?



- 4) Frank bought \$12.99 worth of groceries. He gave the cashier the money shown. How much change should he get back?



- 5) Amy bought a new board game for \$4.65. She gave the cashier the money shown. How much change should she get back?



- 6) Haley spent \$17.52 on a movie ticket. She gave the cashier the money shown. How much change should she get back?





Solve each problem.

- 1) At the fair Faye spent \$6.51 buying fair food. She gave the cashier the money shown. How much change should she get back?



<u>Answers</u>	
1.	\$0.25
2.	\$1.23
3.	\$3.31
4.	\$8.01
5.	\$0.10
6.	\$3.23

- 2) At the book fair Oliver spent \$3.77 buying books. He gave the cashier the money shown. How much change should he get back?



- 3) Billy spent \$16.69 buying some new toys. He bought them using the money shown. How much change should he get back?



- 4) Frank bought \$12.99 worth of groceries. He gave the cashier the money shown. How much change should he get back?



- 5) Amy bought a new board game for \$4.65. She gave the cashier the money shown. How much change should she get back?



- 6) Haley spent \$17.52 on a movie ticket. She gave the cashier the money shown. How much change should she get back?





Solve each problem.

Answers

- 1) Gwen spent \$6.92 on a movie ticket. She gave the cashier the money shown. How much change should she get back?



1. _____

2. _____

3. _____

- 2) Victor spent \$8.05 buying some new toys. He bought them using the money shown. How much change should he get back?




4. _____

5. _____

6. _____


- 3) At the fair Janet spent \$17.24 buying fair food. She gave the cashier the money shown. How much change should she get back?



- 4) George spent \$17.07 on candy at the mall. He gave the cashier the money shown. How much change should he get back?

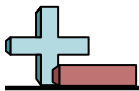


- 5) Carol bought a new board game for \$12.24. She gave the cashier the money shown. How much change should she get back?



- 6) Edward bought \$12.97 worth of groceries. He gave the cashier the money shown. How much change should he get back?





Solve each problem.

- 1) Gwen spent \$6.92 on a movie ticket. She gave the cashier the money shown. How much change should she get back?




<u>Answers</u>	
1.	\$14.08
2.	\$2.05
3.	\$0.10
4.	\$2.93
5.	\$0.10
6.	\$7.03

- 2) Victor spent \$8.05 buying some new toys. He bought them using the money shown. How much change should he get back?




- 3) At the fair Janet spent \$17.24 buying fair food. She gave the cashier the money shown. How much change should she get back?



- 4) George spent \$17.07 on candy at the mall. He gave the cashier the money shown. How much change should he get back?



- 5) Carol bought a new board game for \$12.24. She gave the cashier the money shown. How much change should she get back?



- 6) Edward bought \$12.97 worth of groceries. He gave the cashier the money shown. How much change should he get back?





Solve each problem.

Answers

- 1) Dave spent \$6.90 buying some new toys. He bought them using the money shown. How much change should he get back?



1. _____

- 2) Sam bought \$8.16 worth of groceries. He gave the cashier the money shown. How much change should he get back?



2. _____

3. _____

4. _____

5. _____

6. _____

- 3) Nancy spent \$13.40 on a movie ticket. She gave the cashier the money shown. How much change should she get back?



- 4) At the book fair Paul spent \$11.86 buying books. He gave the cashier the money shown. How much change should he get back?



- 5) At the fair Vanessa spent \$8.52 buying fair food. She gave the cashier the money shown. How much change should she get back?



- 6) Janet bought a new board game for \$9.13. She gave the cashier the money shown. How much change should she get back?





Solve each problem.

- 1) Dave spent \$6.90 buying some new toys. He bought them using the money shown. How much change should he get back?



Answers

1. \$4.00

- 2) Sam bought \$8.16 worth of groceries. He gave the cashier the money shown. How much change should he get back?



2. \$0.25

3. \$2.10

- 3) Nancy spent \$13.40 on a movie ticket. She gave the cashier the money shown. How much change should she get back?



4. \$8.14

5. \$0.10

6. \$0.87

- 4) At the book fair Paul spent \$11.86 buying books. He gave the cashier the money shown. How much change should he get back?



- 5) At the fair Vanessa spent \$8.52 buying fair food. She gave the cashier the money shown. How much change should she get back?



- 6) Janet bought a new board game for \$9.13. She gave the cashier the money shown. How much change should she get back?





Solve each problem.

Answers

- 1) Victor spent \$18.38 buying some new toys. He bought them using the money shown. How much change should he get back?



1. _____

- 2) Olivia bought a new board game for \$7.62. She gave the cashier the money shown. How much change should she get back?



2. _____

- 3) At the book fair Oliver spent \$13.22 buying books. He gave the cashier the money shown. How much change should he get back?



3. _____

- 4) Maria spent \$13.24 on a movie ticket. She gave the cashier the money shown. How much change should she get back?



4. _____

- 5) Adam spent \$4.88 on candy at the mall. He gave the cashier the money shown. How much change should he get back?



5. _____

- 6) Dave bought \$7.26 worth of groceries. He gave the cashier the money shown. How much change should he get back?



6. _____



Solve each problem.

- 1) Victor spent \$18.38 buying some new toys. He bought them using the money shown. How much change should he get back?



1. \$1.62

- 2) Olivia bought a new board game for \$7.62. She gave the cashier the money shown. How much change should she get back?



2. \$3.08

3. \$0.10

- 3) At the book fair Oliver spent \$13.22 buying books. He gave the cashier the money shown. How much change should he get back?



4. \$2.01

5. \$0.12

6. \$13.04

- 4) Maria spent \$13.24 on a movie ticket. She gave the cashier the money shown. How much change should she get back?



- 5) Adam spent \$4.88 on candy at the mall. He gave the cashier the money shown. How much change should he get back?



- 6) Dave bought \$7.26 worth of groceries. He gave the cashier the money shown. How much change should he get back?





Solve each problem.

Answers

- 1) At the book fair Henry spent \$4.35 buying books. He gave the cashier the money shown. How much change should he get back?



1. _____

- 2) Lana bought a new board game for \$7.44. She gave the cashier the money shown. How much change should she get back?



2. _____

3. _____

4. _____

5. _____

6. _____

- 3) Bianca spent \$2.41 on a movie ticket. She gave the cashier the money shown. How much change should she get back?



- 4) Kaleb bought \$8.69 worth of groceries. He gave the cashier the money shown. How much change should he get back?



- 5) Adam spent \$6.12 on candy at the mall. He gave the cashier the money shown. How much change should he get back?



- 6) At the fair Olivia spent \$17.12 buying fair food. She gave the cashier the money shown. How much change should she get back?





Solve each problem.

- 1) At the book fair Henry spent \$4.35 buying books. He gave the cashier the money shown. How much change should he get back?



- 2) Lana bought a new board game for \$7.44. She gave the cashier the money shown. How much change should she get back?



- 3) Bianca spent \$2.41 on a movie ticket. She gave the cashier the money shown. How much change should she get back?



- 4) Kaleb bought \$8.69 worth of groceries. He gave the cashier the money shown. How much change should he get back?



- 5) Adam spent \$6.12 on candy at the mall. He gave the cashier the money shown. How much change should he get back?



- 6) At the fair Olivia spent \$17.12 buying fair food. She gave the cashier the money shown. How much change should she get back?



Answers

1. \$0.05

2. \$2.56

3. \$0.05

4. \$2.01

5. \$0.04

6. \$3.13



Solve each problem.

Answers

- 1) At the fair Janet spent \$13.28 buying fair food. She gave the cashier the money shown. How much change should she get back?



1. _____

- 2) Rachel bought a new board game for \$8.30. She gave the cashier the money shown. How much change should she get back?



2. _____

3. _____

4. _____

5. _____

6. _____

- 3) Oliver spent \$13.61 on candy at the mall. He gave the cashier the money shown. How much change should he get back?



- 4) Paul bought \$9.56 worth of groceries. He gave the cashier the money shown. How much change should he get back?



- 5) Mike spent \$7.66 buying some new toys. He bought them using the money shown. How much change should he get back?



- 6) At the book fair Cody spent \$14.08 buying books. He gave the cashier the money shown. How much change should he get back?





Solve each problem.

- 1) At the fair Janet spent \$13.28 buying fair food. She gave the cashier the money shown. How much change should she get back?



- 2) Rachel bought a new board game for \$8.30. She gave the cashier the money shown. How much change should she get back?



- 3) Oliver spent \$13.61 on candy at the mall. He gave the cashier the money shown. How much change should he get back?



- 4) Paul bought \$9.56 worth of groceries. He gave the cashier the money shown. How much change should he get back?



- 5) Mike spent \$7.66 buying some new toys. He bought them using the money shown. How much change should he get back?



- 6) At the book fair Cody spent \$14.08 buying books. He gave the cashier the money shown. How much change should he get back?



Answers

1. \$2.22

2. \$0.05

3. \$7.04

4. \$0.05

5. \$2.34

6. \$5.92



Solve each problem.

Answers

- 1) Bianca bought a new board game for \$2.96. She gave the cashier the money shown. How much change should she get back?



1. _____

- 2) At the book fair Luke spent \$13.57 buying books. He gave the cashier the money shown. How much change should he get back?



2. _____

3. _____

4. _____

5. _____

6. _____

- 3) Katie spent \$8.28 on a movie ticket. She gave the cashier the money shown. How much change should she get back?



- 4) Victor bought \$11.78 worth of groceries. He gave the cashier the money shown. How much change should he get back?



- 5) George spent \$6.37 on candy at the mall. He gave the cashier the money shown. How much change should he get back?



- 6) John spent \$3.50 buying some new toys. He bought them using the money shown. How much change should he get back?





Solve each problem.

- 1) Bianca bought a new board game for \$2.96. She gave the cashier the money shown. How much change should she get back?



<u>Answers</u>	
1.	\$7.04
2.	\$0.04
3.	\$1.72
4.	\$0.10
5.	\$4.13
6.	\$2.00

- 2) At the book fair Luke spent \$13.57 buying books. He gave the cashier the money shown. How much change should he get back?



- 3) Katie spent \$8.28 on a movie ticket. She gave the cashier the money shown. How much change should she get back?



- 4) Victor bought \$11.78 worth of groceries. He gave the cashier the money shown. How much change should he get back?



- 5) George spent \$6.37 on candy at the mall. He gave the cashier the money shown. How much change should he get back?



- 6) John spent \$3.50 buying some new toys. He bought them using the money shown. How much change should he get back?





Solve each problem.

Answers

- 1) Tom spent \$16.71 on candy at the mall. He gave the cashier the money shown. How much change should he get back?



1. _____

2. _____

3. _____

- 2) Jerry bought \$3.70 worth of groceries. He gave the cashier the money shown. How much change should he get back?



4. _____

5. _____

6. _____

- 3) Victor spent \$8.33 buying some new toys. He bought them using the money shown. How much change should he get back?



- 4) At the book fair Frank spent \$14.05 buying books. He gave the cashier the money shown. How much change should he get back?



- 5) Emily bought a new board game for \$14.67. She gave the cashier the money shown. How much change should she get back?



- 6) Nancy spent \$9.48 on a movie ticket. She gave the cashier the money shown. How much change should she get back?





Solve each problem.

- 1) Tom spent \$16.71 on candy at the mall. He gave the cashier the money shown. How much change should he get back?



- 2) Jerry bought \$3.70 worth of groceries. He gave the cashier the money shown. How much change should he get back?



- 3) Victor spent \$8.33 buying some new toys. He bought them using the money shown. How much change should he get back?



- 4) At the book fair Frank spent \$14.05 buying books. He gave the cashier the money shown. How much change should he get back?



- 5) Emily bought a new board game for \$14.67. She gave the cashier the money shown. How much change should she get back?



- 6) Nancy spent \$9.48 on a movie ticket. She gave the cashier the money shown. How much change should she get back?



Answers

1. \$4.09

2. \$16.30

3. \$0.10

4. \$5.95

5. \$0.04

6. \$1.02