



Solve each problem.

Answers

1) At the book fair Adam spent \$6.83 buying books. He gave the cashier a twenty dollar bill. How much change should he get back?



2) Robin bought a new board game for \$2.78. She gave the cashier a ten dollar bill. How much change should she get back?



3) Rachel spent \$10.55 on a movie ticket. She gave the cashier a twenty dollar bill. How much change should she get back?



- 1. _____
- 2. _____
- 3. _____



Solve each problem.

1) At the book fair Adam spent \$6.83 buying books. He gave the cashier a twenty dollar bill. How much change should he get back?



2) Robin bought a new board game for \$2.78. She gave the cashier a ten dollar bill. How much change should she get back?



3) Rachel spent \$10.55 on a movie ticket. She gave the cashier a twenty dollar bill. How much change should she get back?



Answers

1. **D**

2. **A**

3. **A**



Solve each problem.

Answers

1) Paul spent \$12.91 buying some new toys. He bought them using a twenty dollar bill. How much change should he get back?




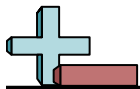
- 1. _____
- 2. _____
- 3. _____

2) At the book fair Jerry spent \$1.16 buying books. He gave the cashier a ten dollar bill. How much change should he get back?



3) Cody bought \$6.97 worth of groceries. He gave the cashier a twenty dollar bill. How much change should he get back?





Solve each problem.


1) Paul spent \$12.91 buying some new toys. He bought them using a twenty dollar bill. How much change should he get back?



2) At the book fair Jerry spent \$1.16 buying books. He gave the cashier a ten dollar bill. How much change should he get back?



3) Cody bought \$6.97 worth of groceries. He gave the cashier a twenty dollar bill. How much change should he get back?



Answers

1. **A**

2. **A**

3. **B**




Solve each problem.

Answers

1) At the fair Faye spent \$7.00 buying fair food. She gave the cashier a twenty dollar bill. How much change should she get back?



2) At the book fair Oliver spent \$5.77 buying books. He gave the cashier a ten dollar bill. How much change should he get back?



3) Billy spent \$10.74 buying some new toys. He bought them using a twenty dollar bill. How much change should he get back?



- 1. _____
- 2. _____
- 3. _____




Solve each problem.

1) At the fair Faye spent \$7.00 buying fair food. She gave the cashier a twenty dollar bill. How much change should she get back?



2) At the book fair Oliver spent \$5.77 buying books. He gave the cashier a ten dollar bill. How much change should he get back?



3) Billy spent \$10.74 buying some new toys. He bought them using a twenty dollar bill. How much change should he get back?



Answers

1. **B**

2. **C**

3. **C**



Solve each problem.

Answers

1) Gwen spent \$7.82 on a movie ticket. She gave the cashier a twenty dollar bill. How much change should she get back?



2) Victor spent \$4.05 buying some new toys. He bought them using a ten dollar bill. How much change should he get back?



3) At the fair Janet spent \$18.24 buying fair food. She gave the cashier a twenty dollar bill. How much change should she get back?



- 1. _____
- 2. _____
- 3. _____



Solve each problem.

1) Gwen spent \$7.82 on a movie ticket. She gave the cashier a twenty dollar bill. How much change should she get back?



2) Victor spent \$4.05 buying some new toys. He bought them using a ten dollar bill. How much change should he get back?



3) At the fair Janet spent \$18.24 buying fair food. She gave the cashier a twenty dollar bill. How much change should she get back?

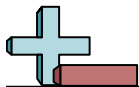


Answers

1. **D**

2. **A**

3. **B**




Solve each problem.

Answers

1) Dave spent \$11.22 buying some new toys. He bought them using a twenty dollar bill. How much change should he get back?



2) Sam bought \$7.02 worth of groceries. He gave the cashier a ten dollar bill. How much change should he get back?



3) Nancy spent \$13.83 on a movie ticket. She gave the cashier a twenty dollar bill. How much change should she get back?



- 1. _____
- 2. _____
- 3. _____




Solve each problem.

1) Dave spent \$11.22 buying some new toys. He bought them using a twenty dollar bill. How much change should he get back?



2) Sam bought \$7.02 worth of groceries. He gave the cashier a ten dollar bill. How much change should he get back?



3) Nancy spent \$13.83 on a movie ticket. She gave the cashier a twenty dollar bill. How much change should she get back?

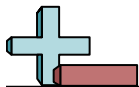


Answers

1. **B**

2. **B**

3. **A**



Solve each problem.


Answers

1) Victor spent \$10.46 buying some new toys. He bought them using a twenty dollar bill. How much change should he get back?




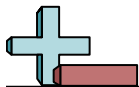
- 1. _____
- 2. _____
- 3. _____

2) Olivia bought a new board game for \$7.90. She gave the cashier a ten dollar bill. How much change should she get back?



3) At the book fair Oliver spent \$12.53 buying books. He gave the cashier a twenty dollar bill. How much change should he get back?






Solve each problem.

1) Victor spent \$10.46 buying some new toys. He bought them using a twenty dollar bill. How much change should he get back?



2) Olivia bought a new board game for \$7.90. She gave the cashier a ten dollar bill. How much change should she get back?



3) At the book fair Oliver spent \$12.53 buying books. He gave the cashier a twenty dollar bill. How much change should he get back?



Answers

1. **C**

2. **C**

3. **C**



Solve each problem.

Answers

1) At the book fair Henry spent \$4.75 buying books. He gave the cashier a twenty dollar bill. How much change should he get back?



- 1. _____
- 2. _____
- 3. _____

2) Lana bought a new board game for \$2.44. She gave the cashier a ten dollar bill. How much change should she get back?



3) Bianca spent \$2.41 on a movie ticket. She gave the cashier a twenty dollar bill. How much change should she get back?





Solve each problem.

1) At the book fair Henry spent \$4.75 buying books. He gave the cashier a twenty dollar bill. How much change should he get back?



2) Lana bought a new board game for \$2.44. She gave the cashier a ten dollar bill. How much change should she get back?



3) Bianca spent \$2.41 on a movie ticket. She gave the cashier a twenty dollar bill. How much change should she get back?



Answers

1. **B**

2. **D**

3. **D**



Solve each problem.

Answers

1) At the fair Janet spent \$5.12 buying fair food. She gave the cashier a twenty dollar bill. How much change should she get back?



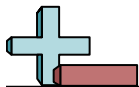
2) Rachel bought a new board game for \$7.21. She gave the cashier a ten dollar bill. How much change should she get back?



3) Oliver spent \$14.61 on candy at the mall. He gave the cashier a twenty dollar bill. How much change should he get back?



- 1. _____
- 2. _____
- 3. _____



Solve each problem.

1) At the fair Janet spent \$5.12 buying fair food. She gave the cashier a twenty dollar bill. How much change should she get back?



2) Rachel bought a new board game for \$7.21. She gave the cashier a ten dollar bill. How much change should she get back?



3) Oliver spent \$14.61 on candy at the mall. He gave the cashier a twenty dollar bill. How much change should he get back?



Answers

1. **D**

2. **D**


3. **D**



Solve each problem.

Answers

1) Bianca bought a new board game for \$2.06. She gave the cashier a twenty dollar bill. How much change should she get back?



- 1. _____
- 2. _____
- 3. _____

2) At the book fair Luke spent \$4.57 buying books. He gave the cashier a ten dollar bill. How much change should he get back?




3) Katie spent \$7.50 on a movie ticket. She gave the cashier a twenty dollar bill. How much change should she get back?





Solve each problem.

1) Bianca bought a new board game for \$2.06. She gave the cashier a twenty dollar bill. How much change should she get back?



2) At the book fair Luke spent \$4.57 buying books. He gave the cashier a ten dollar bill. How much change should he get back?



3) Katie spent \$7.50 on a movie ticket. She gave the cashier a twenty dollar bill. How much change should she get back?

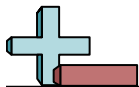


Answers

1. **A**

2. **A**

3. **B**



Solve each problem.

Answers

1) Tom spent \$16.71 on candy at the mall. He gave the cashier a twenty dollar bill. How much change should he get back?




1. _____

2. _____

3. _____

2) Jerry bought \$8.64 worth of groceries. He gave the cashier a ten dollar bill. How much change should he get back?



3) Victor spent \$7.33 buying some new toys. He bought them using a twenty dollar bill. How much change should he get back?





Solve each problem.

1) Tom spent \$16.71 on candy at the mall. He gave the cashier a twenty dollar bill. How much change should he get back?



2) Jerry bought \$8.64 worth of groceries. He gave the cashier a ten dollar bill. How much change should he get back?



3) Victor spent \$7.33 buying some new toys. He bought them using a twenty dollar bill. How much change should he get back?



Answers

1. **A**

2. **C**

3. **A**