

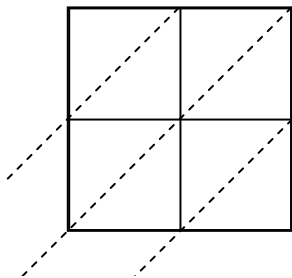


Use lattice multiplication to solve each problem.

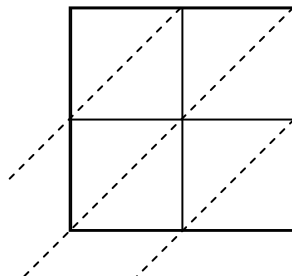
1) $81 \times 91 =$



2) $20 \times 81 =$



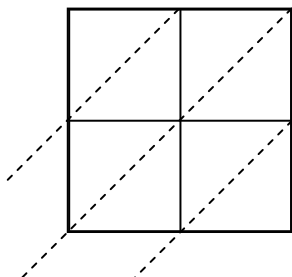
3) $89 \times 36 =$



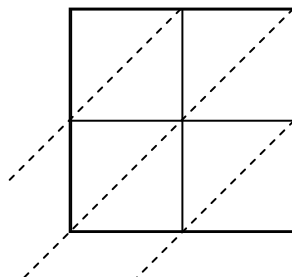
4) $94 \times 82 =$



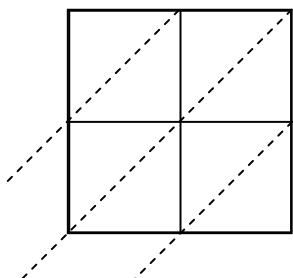
5) $34 \times 51 =$



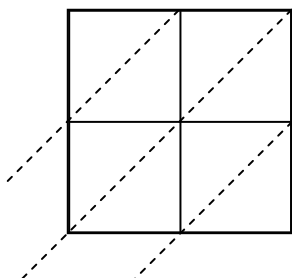
6) $99 \times 92 =$



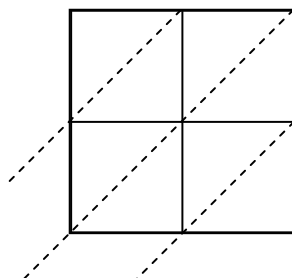
7) $56 \times 74 =$



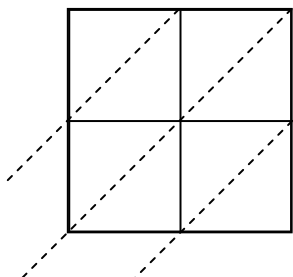
8) $95 \times 33 =$



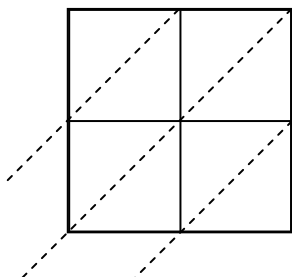
9) $31 \times 49 =$



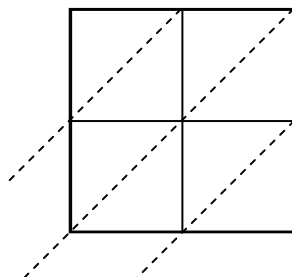
10) $46 \times 89 =$



11) $61 \times 47 =$



12) $47 \times 61 =$



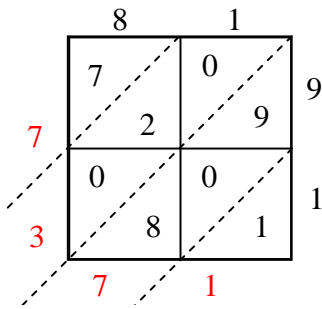
Answers

1. _____
2. _____
3. _____
4. _____
5. _____
6. _____
7. _____
8. _____
9. _____
10. _____
11. _____
12. _____

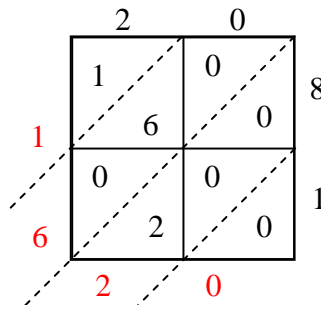


Use lattice multiplication to solve each problem.

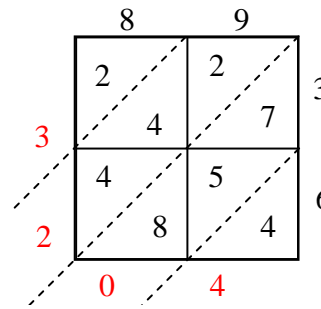
1) $81 \times 91 =$



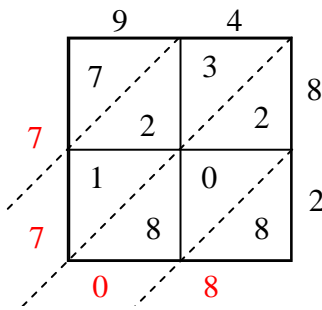
2) $20 \times 81 =$



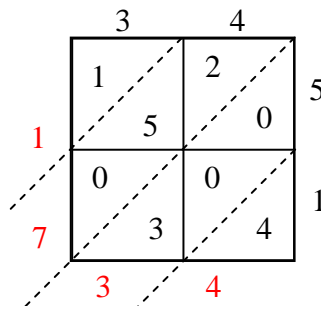
3) $89 \times 36 =$



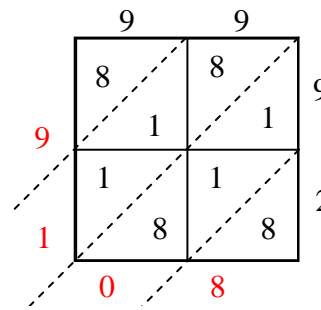
4) $94 \times 82 =$



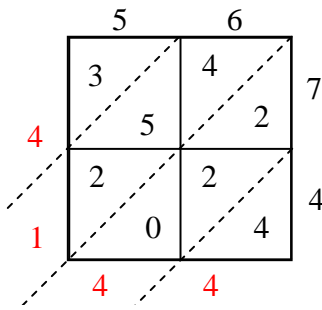
5) $34 \times 51 =$



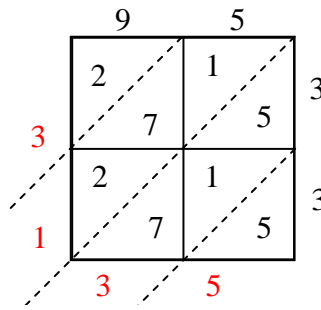
6) $99 \times 92 =$



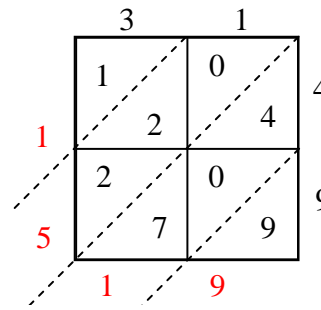
7) $56 \times 74 =$



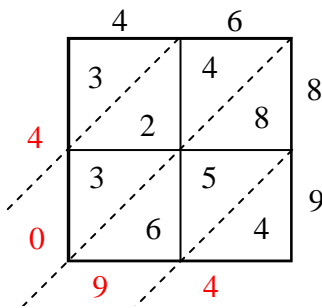
8) $95 \times 33 =$



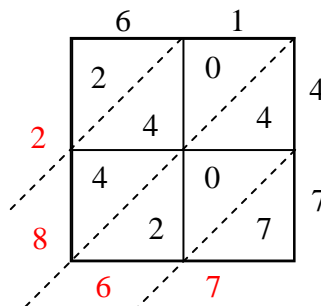
9) $31 \times 49 =$



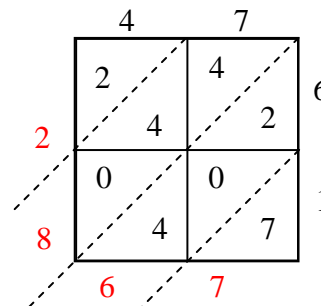
10) $46 \times 89 =$



11) $61 \times 47 =$



12) $47 \times 61 =$



Answers

1. **7,371**

2. **1,620**

3. **3,204**

4. **7,708**

5. **1,734**

6. **9,108**

7. **4,144**

8. **3,135**

9. **1,519**

10. **4,094**

11. **2,867**

12. **2,867**