



Use lattice multiplication to solve each problem.

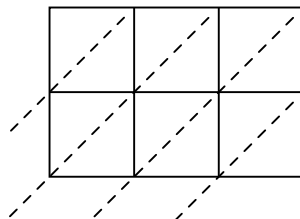
1)  $617 \times 36 =$



2)  $902 \times 60 =$



3)  $936 \times 11 =$



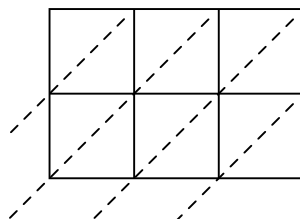
4)  $506 \times 97 =$



5)  $375 \times 92 =$



6)  $944 \times 94 =$



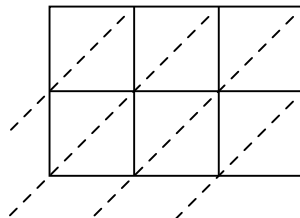
7)  $773 \times 32 =$



8)  $444 \times 54 =$



9)  $950 \times 35 =$



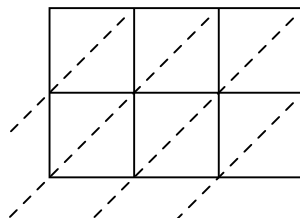
10)  $608 \times 49 =$



11)  $289 \times 74 =$



12)  $530 \times 32 =$



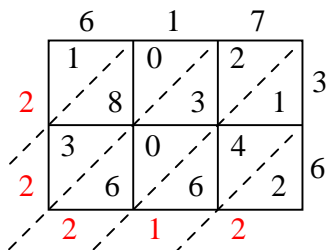
**Answers**

1. \_\_\_\_\_
2. \_\_\_\_\_
3. \_\_\_\_\_
4. \_\_\_\_\_
5. \_\_\_\_\_
6. \_\_\_\_\_
7. \_\_\_\_\_
8. \_\_\_\_\_
9. \_\_\_\_\_
10. \_\_\_\_\_
11. \_\_\_\_\_
12. \_\_\_\_\_

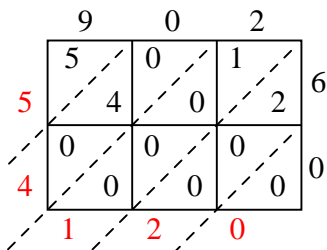


Use lattice multiplication to solve each problem.

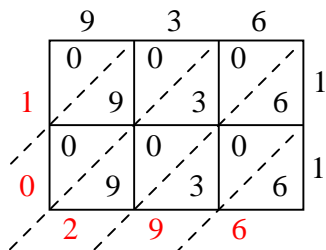
1)  $617 \times 36 =$



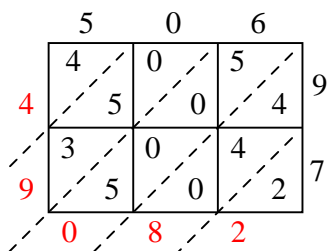
2)  $902 \times 60 =$



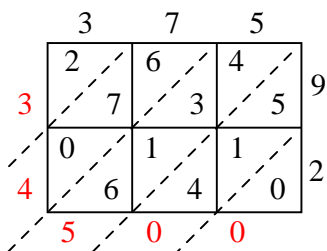
3)  $936 \times 11 =$



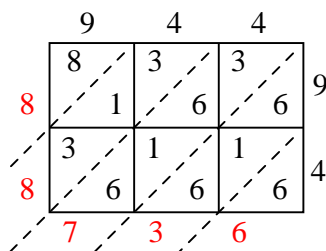
4)  $506 \times 97 =$



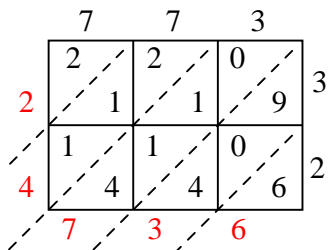
5)  $375 \times 92 =$



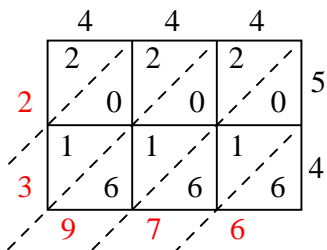
6)  $944 \times 94 =$



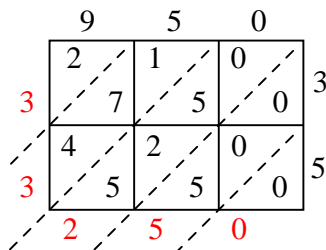
7)  $773 \times 32 =$



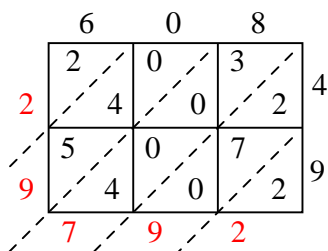
8)  $444 \times 54 =$



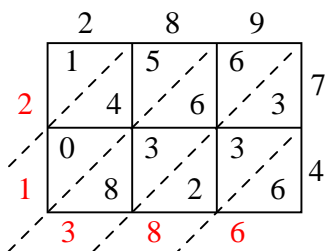
9)  $950 \times 35 =$



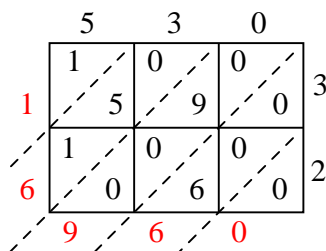
10)  $608 \times 49 =$



11)  $289 \times 74 =$



12)  $530 \times 32 =$



Answers

1. **22,212**

2. **54,120**

3. **10,296**

4. **49,082**

5. **34,500**

6. **88,736**

7. **24,736**

8. **23,976**

9. **33,250**

10. **29,792**

11. **21,386**

12. **16,960**