

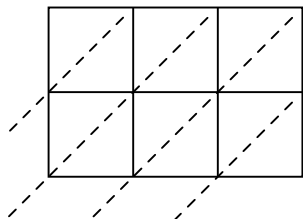


Use lattice multiplication to solve each problem.

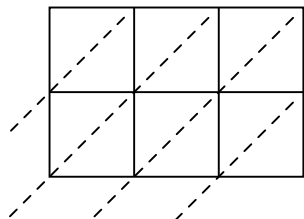
1) $927 \times 78 =$



2) $669 \times 51 =$



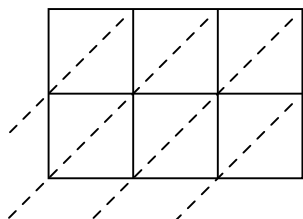
3) $864 \times 95 =$



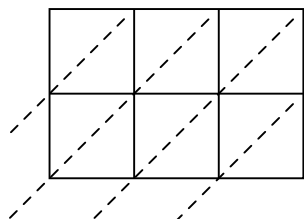
4) $709 \times 28 =$



5) $776 \times 14 =$



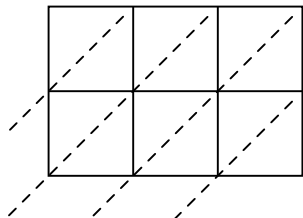
6) $743 \times 46 =$



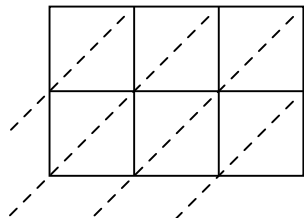
7) $139 \times 10 =$



8) $139 \times 15 =$



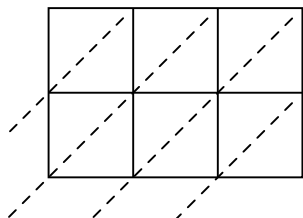
9) $652 \times 85 =$



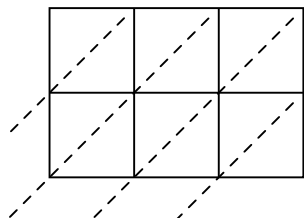
10) $692 \times 17 =$



11) $362 \times 41 =$



12) $355 \times 63 =$



Answers

1. _____

2. _____

3. _____

4. _____

5. _____

6. _____

7. _____

8. _____

9. _____

10. _____

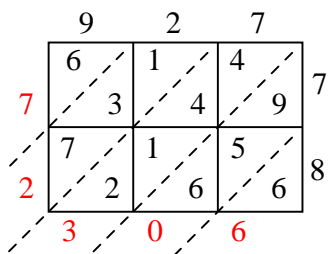
11. _____

12. _____

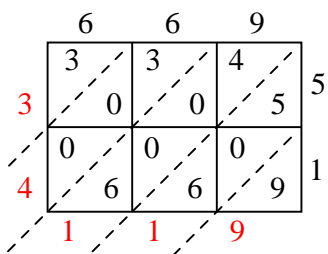


Use lattice multiplication to solve each problem.

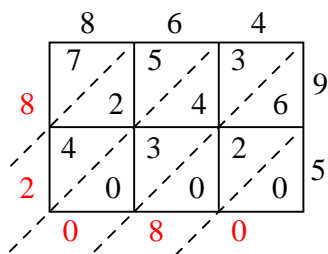
1) $927 \times 78 =$



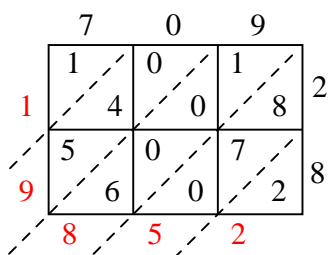
2) $669 \times 51 =$



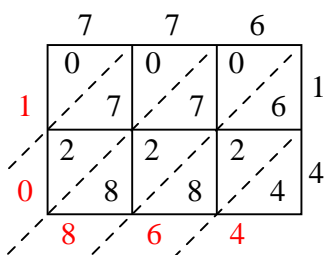
3) $864 \times 95 =$



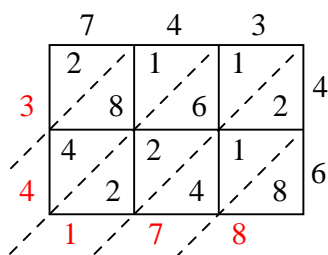
4) $709 \times 28 =$



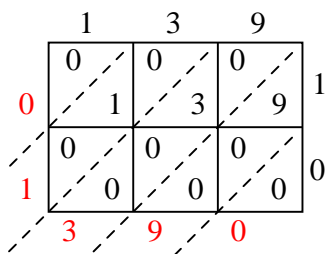
5) $776 \times 14 =$



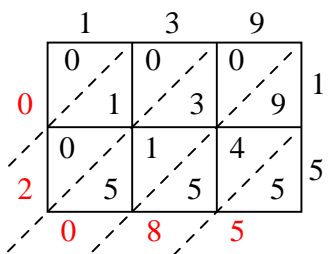
6) $743 \times 46 =$



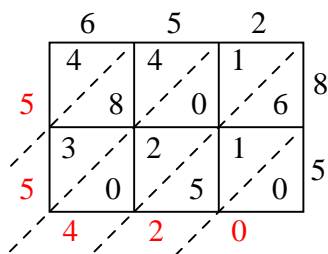
7) $139 \times 10 =$



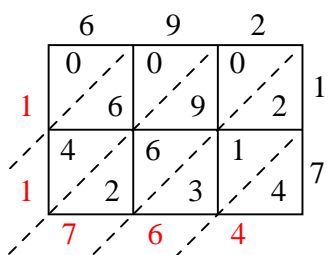
8) $139 \times 15 =$



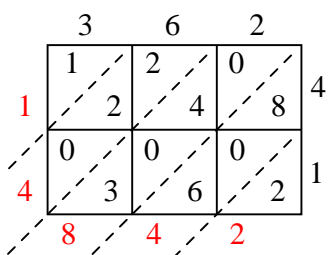
9) $652 \times 85 =$



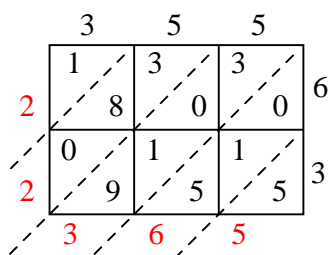
10) $692 \times 17 =$



11) $362 \times 41 =$



12) $355 \times 63 =$



Answers

1. **72,306**

2. **34,119**

3. **82,080**

4. **19,852**

5. **10,864**

6. **34,178**

7. **1,390**

8. **2,085**

9. **55,420**

10. **11,764**

11. **14,842**

12. **22,365**