
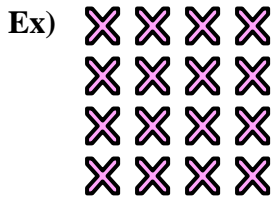




Write an equation to express the array and then find the number of shapes.

Answers

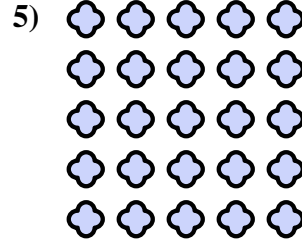
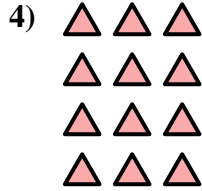


Ex.  $4 \times 4 = 16$

1. \_\_\_\_\_

2. \_\_\_\_\_

3. \_\_\_\_\_

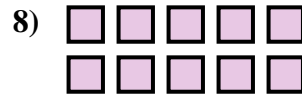
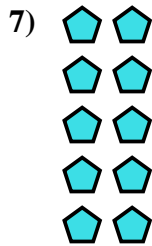


4. \_\_\_\_\_

5. \_\_\_\_\_

6. \_\_\_\_\_

7. \_\_\_\_\_


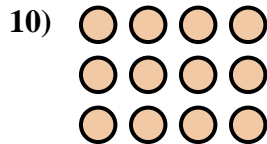



8. \_\_\_\_\_

9. \_\_\_\_\_

10. \_\_\_\_\_

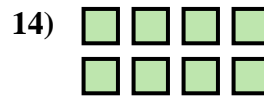
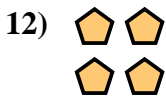
11. \_\_\_\_\_



12. \_\_\_\_\_



13. \_\_\_\_\_

14. \_\_\_\_\_



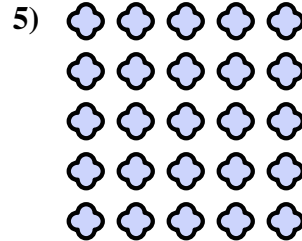
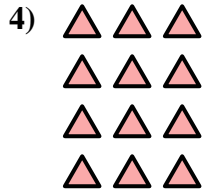


Write an equation to express the array and then find the number of shapes.



Answers

Ex.  $4 \times 4 = 16$



1.  $5 \times 4 = 20$

2.  $4 \times 5 = 20$

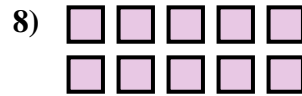
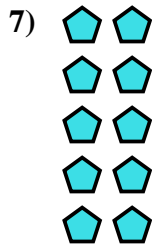
3.  $2 \times 3 = 6$

4.  $4 \times 3 = 12$

5.  $5 \times 5 = 25$

6.  $3 \times 5 = 15$


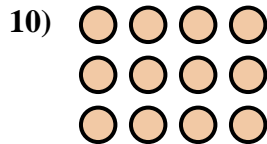
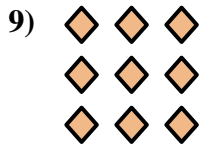
7.  $5 \times 2 = 10$



8.  $2 \times 5 = 10$

9.  $3 \times 3 = 9$

10.  $3 \times 4 = 12$



11.  $4 \times 2 = 8$

12.  $2 \times 2 = 4$

13.  $3 \times 2 = 6$

14.  $2 \times 4 = 8$

