





Use the array provided to solve each problem.


1) $10 \times 16 =$




2) $11 \times 10 =$




3) $10 \times 12 =$




4) $10 \times 18 =$



5) $10 \times 19 =$



6) $10 \times 13 =$



Answers

1. _____

2. _____

3. _____

4. _____

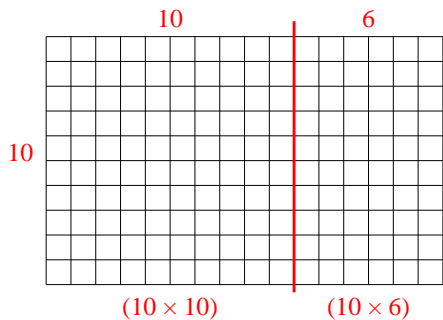
5. _____

6. _____

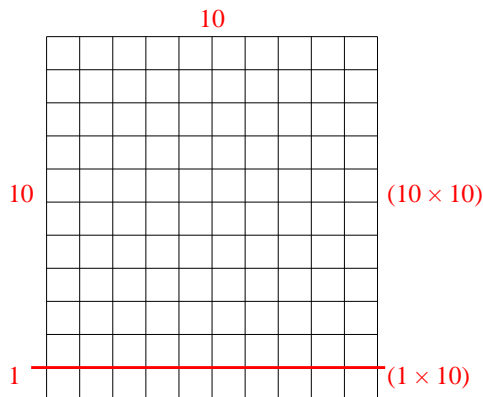


Use the array provided to solve each problem.

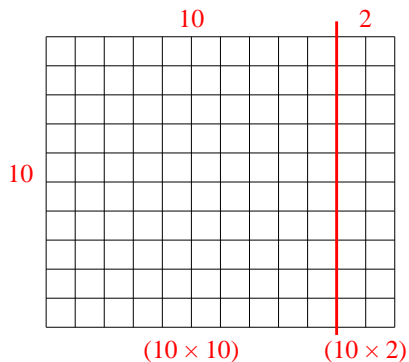
1) $10 \times 16 =$



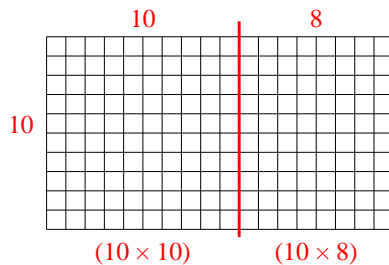
2) $11 \times 10 =$



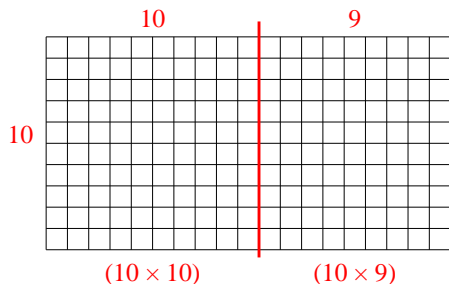
3) $10 \times 12 =$



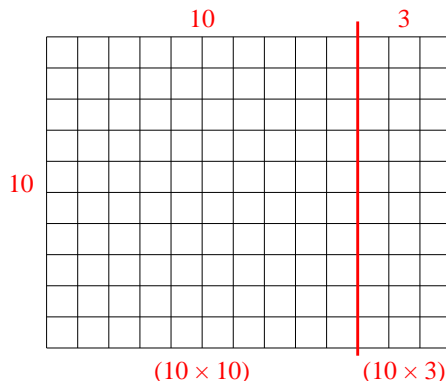
4) $10 \times 18 =$



5) $10 \times 19 =$



6) $10 \times 13 =$



Answers

1. 160

2. 110

3. 120

4. 180

5. 190

6. 130