





Use the array provided to solve each problem.


1)  $23 \times 20 =$




2)  $10 \times 13 =$




3)  $10 \times 11 =$




4)  $10 \times 17 =$



5)  $10 \times 16 =$



6)  $19 \times 10 =$



Answers

1. \_\_\_\_\_

2. \_\_\_\_\_

3. \_\_\_\_\_

4. \_\_\_\_\_

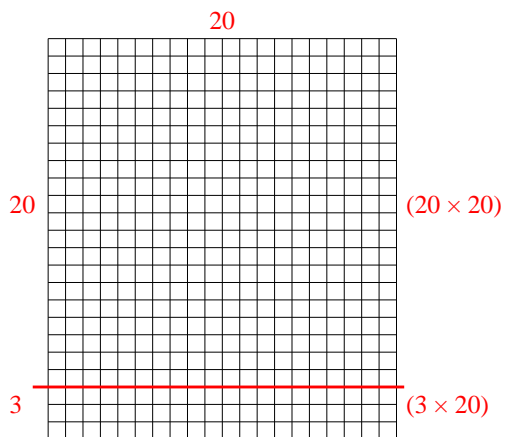
5. \_\_\_\_\_

6. \_\_\_\_\_

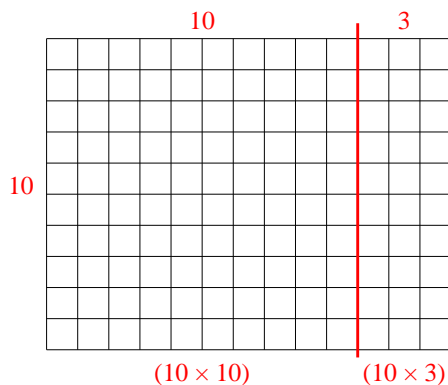


Use the array provided to solve each problem.

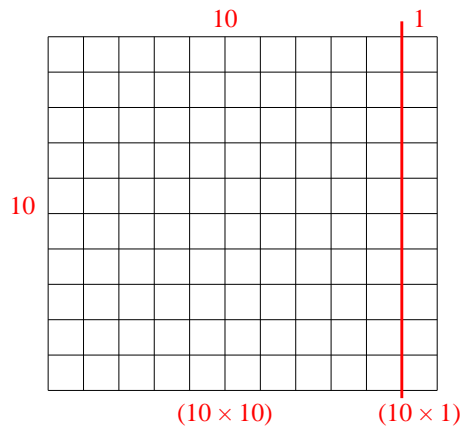
1)  $23 \times 20 =$



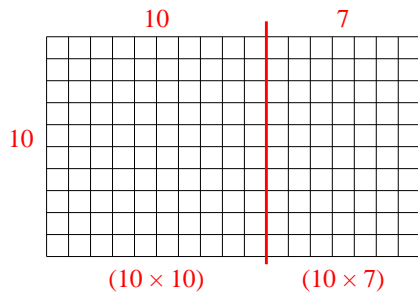
2)  $10 \times 13 =$



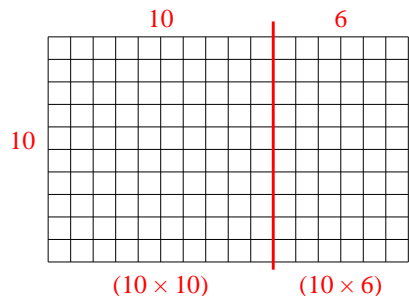
3)  $10 \times 11 =$



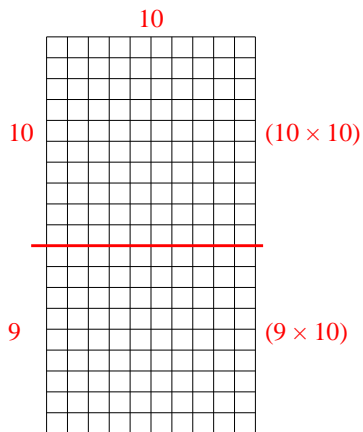
4)  $10 \times 17 =$



5)  $10 \times 16 =$



6)  $19 \times 10 =$



Answers

1. **460**

2. **130**

3. **110**

4. **170**

5. **160**

6. **190**