





Use the array provided to solve each problem.


1)  $13 \times 10 =$




2)  $10 \times 18 =$




3)  $10 \times 11 =$




4)  $16 \times 10 =$



5)  $10 \times 12 =$



6)  $15 \times 10 =$



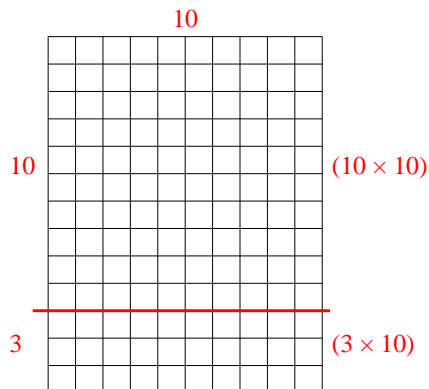
Answers

- 1. \_\_\_\_\_
- 2. \_\_\_\_\_
- 3. \_\_\_\_\_
- 4. \_\_\_\_\_
- 5. \_\_\_\_\_
- 6. \_\_\_\_\_

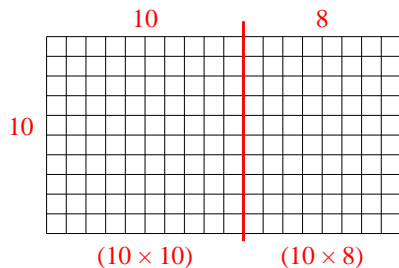


Use the array provided to solve each problem.

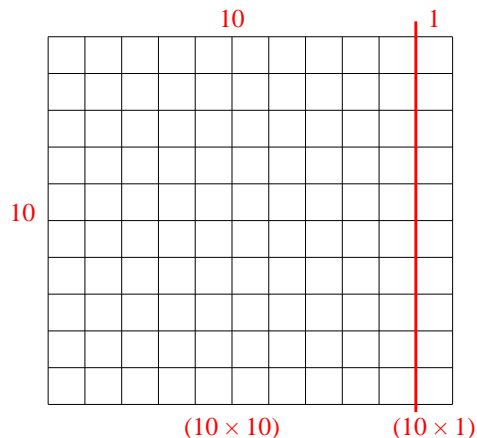
1)  $13 \times 10 =$



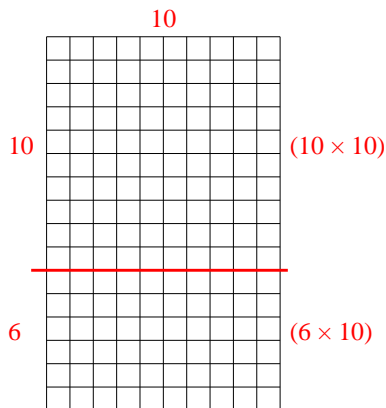
2)  $10 \times 18 =$



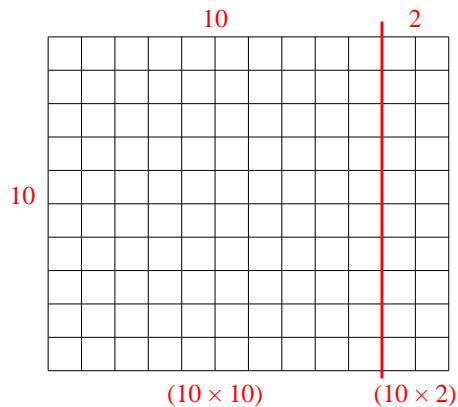
3)  $10 \times 11 =$



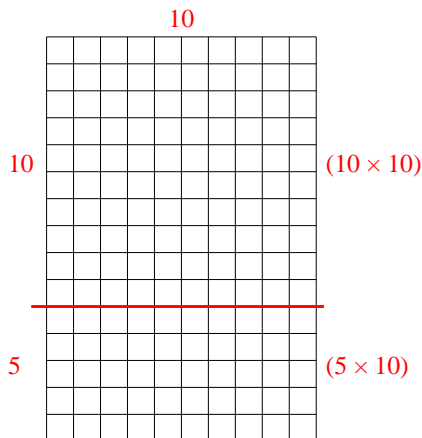
4)  $16 \times 10 =$



5)  $10 \times 12 =$



6)  $15 \times 10 =$



Answers

1. **130**

2. **180**

3. **110**

4. **160**

5. **120**

6. **150**