





Use the array provided to solve each problem.


1) $21 \times 20 =$




2) $10 \times 12 =$




3) $10 \times 19 =$




4) $10 \times 15 =$



5) $15 \times 10 =$



6) $17 \times 10 =$



Answers

1. _____

2. _____

3. _____

4. _____

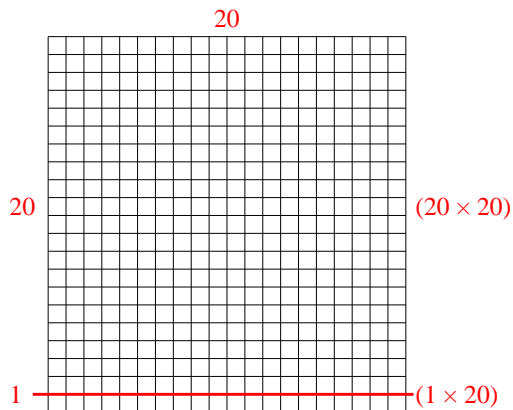
5. _____

6. _____

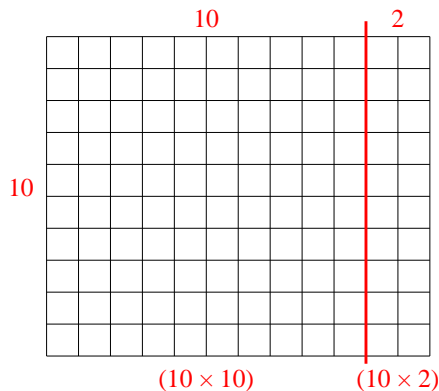


Use the array provided to solve each problem.

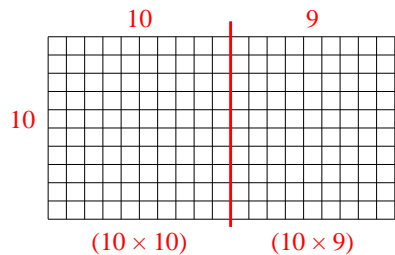
1) $21 \times 20 =$



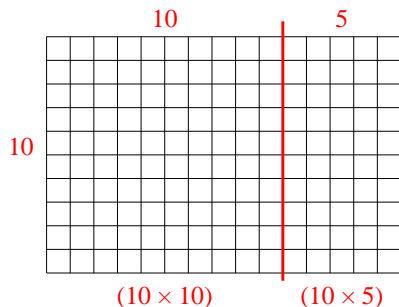
2) $10 \times 12 =$



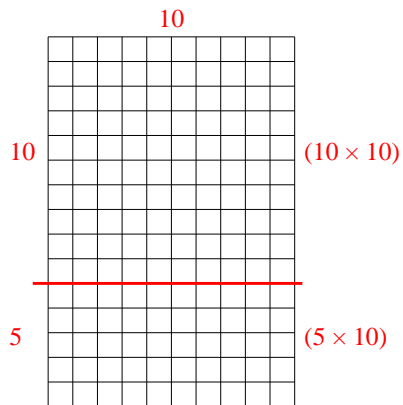
3) $10 \times 19 =$



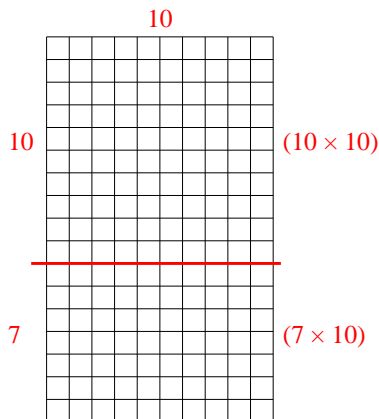
4) $10 \times 15 =$



5) $15 \times 10 =$



6) $17 \times 10 =$



Answers

1. **420**

2. **120**

3. **190**

4. **150**

5. **150**

6. **170**