





Use the array provided to solve each problem.


1) $43 \times 36 =$




2) $37 \times 43 =$




3) $33 \times 22 =$




4) $34 \times 45 =$



5) $39 \times 46 =$



6) $36 \times 35 =$



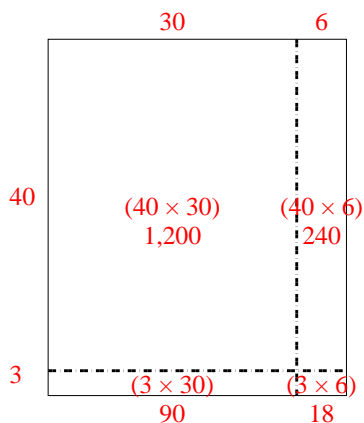
Answers

- 1. _____
- 2. _____
- 3. _____
- 4. _____
- 5. _____
- 6. _____

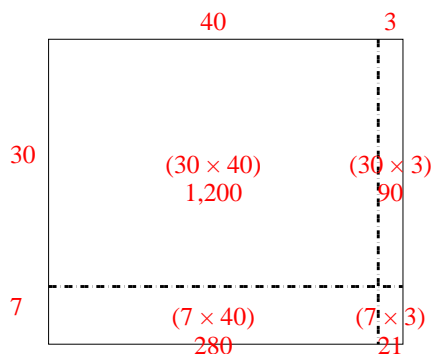


Use the array provided to solve each problem.

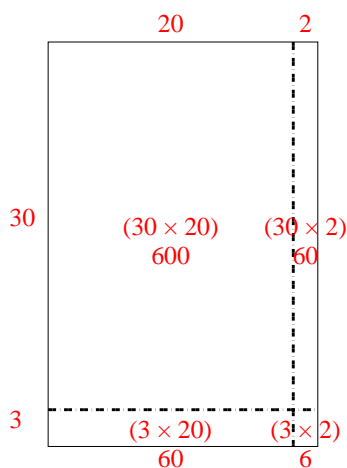
1) $43 \times 36 =$



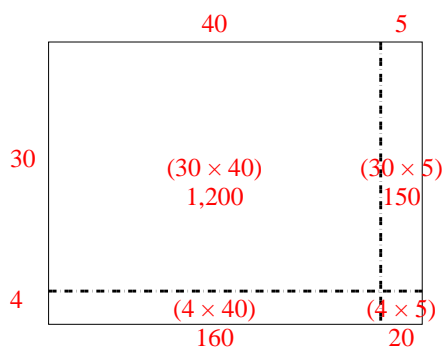
2) $37 \times 43 =$



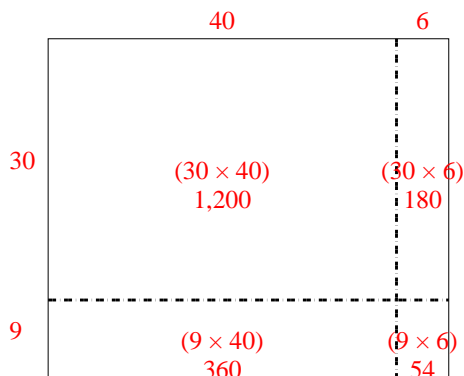
3) $33 \times 22 =$



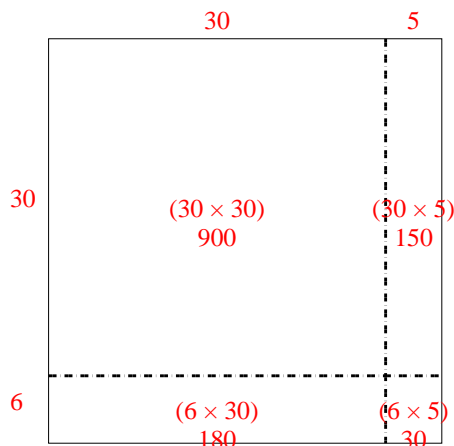
4) $34 \times 45 =$



5) $39 \times 46 =$



6) $36 \times 35 =$



Answers

1. **1,548**

2. **1,591**

3. **726**

4. **1,530**

5. **1,794**

6. **1,260**