





Use the array provided to solve each problem.


1)  $26 \times 20 =$




2)  $20 \times 22 =$




3)  $29 \times 20 =$




4)  $20 \times 29 =$



5)  $25 \times 20 =$



6)  $20 \times 28 =$



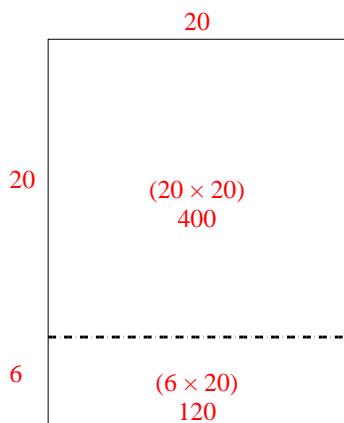
Answers

- 1. \_\_\_\_\_
- 2. \_\_\_\_\_
- 3. \_\_\_\_\_
- 4. \_\_\_\_\_
- 5. \_\_\_\_\_
- 6. \_\_\_\_\_

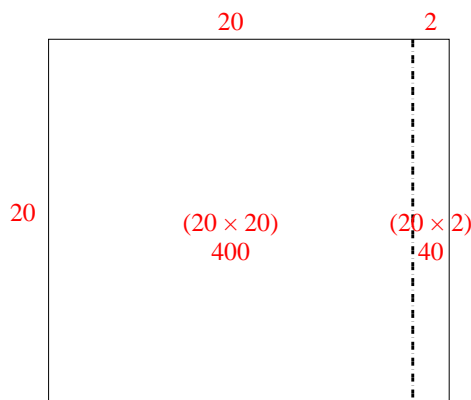


Use the array provided to solve each problem.

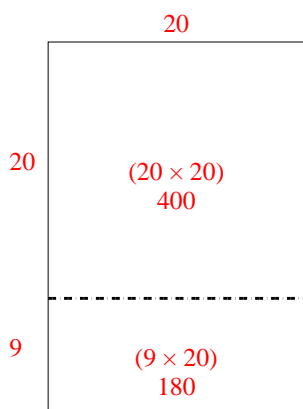
1)  $26 \times 20 =$



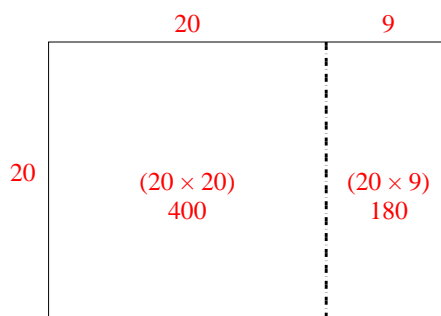
2)  $20 \times 22 =$



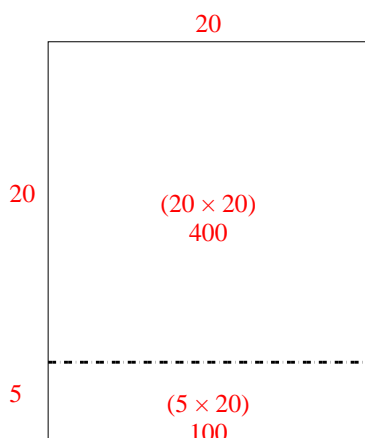
3)  $29 \times 20 =$



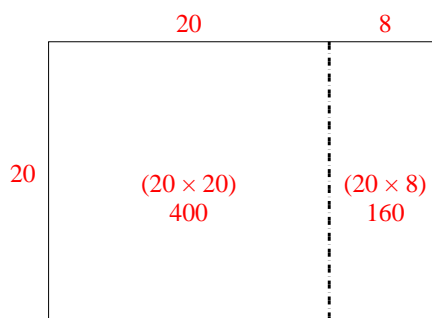
4)  $20 \times 29 =$



5)  $25 \times 20 =$



6)  $20 \times 28 =$



Answers

1. **520**

2. **440**

3. **580**

4. **580**

5. **500**

6. **560**