





Use the array provided to solve each problem.

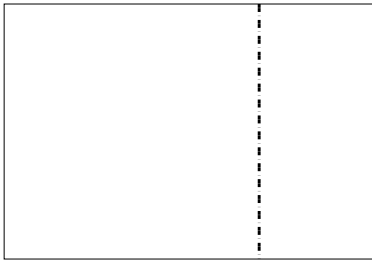
1) $32 \times 20 =$




2) $20 \times 25 =$




3) $20 \times 29 =$




4) $20 \times 21 =$



5) $24 \times 20 =$



6) $20 \times 27 =$



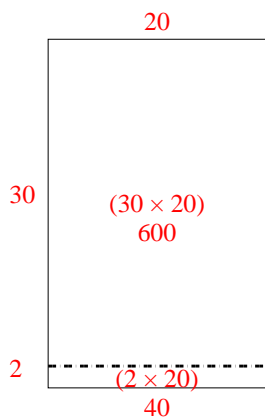
Answers

- 1. _____
- 2. _____
- 3. _____
- 4. _____
- 5. _____
- 6. _____

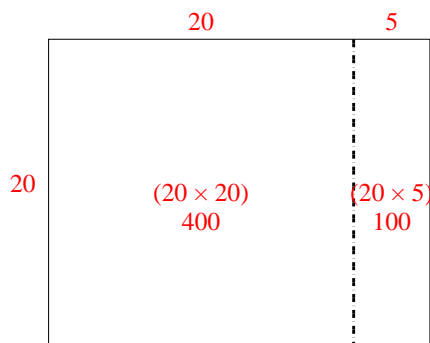


Use the array provided to solve each problem.

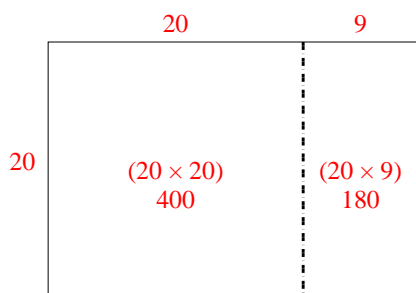
1) $32 \times 20 =$



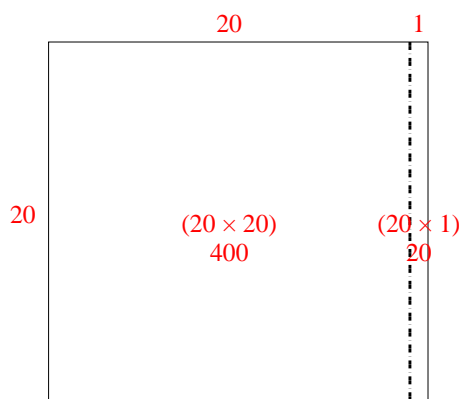
2) $20 \times 25 =$



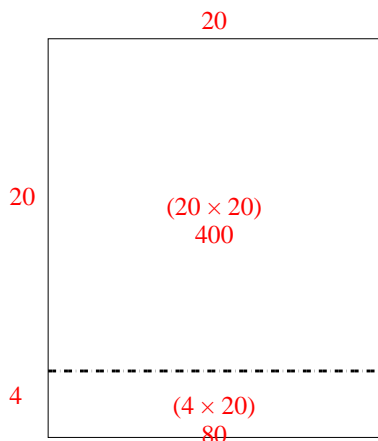
3) $20 \times 29 =$



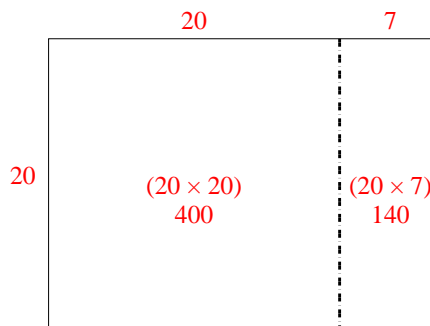
4) $20 \times 21 =$



5) $24 \times 20 =$



6) $20 \times 27 =$



Answers

1. **640**

2. **500**

3. **580**

4. **420**

5. **480**

6. **540**