



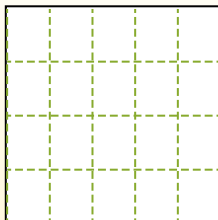
Partition the shape as described and then count to find the number of boxes.

Answers

Rows go left to right.


Columns go up and down.

This has **4 rows** and **5 columns**.
There are **20** boxes total.



1. _____
2. _____
3. _____
4. _____
5. _____
6. _____
7. _____
8. _____
9. _____

1) 3 rows
5 columns




2) 3 rows
3 columns




3) 2 rows
5 columns



4) 3 rows
2 columns




5) 4 rows
3 columns




6) 4 rows
4 columns



7) 4 rows
2 columns



8) 3 rows
4 columns



9) 5 rows
5 columns



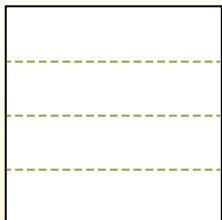


Partition the shape as described and then count to find the number of boxes.

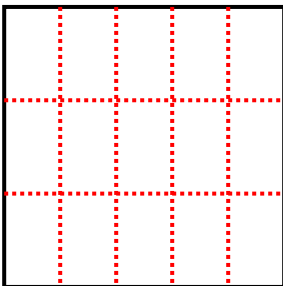
Rows go left to right.

Columns go up and down.

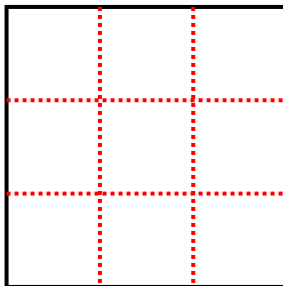
This has 4 rows and 5 columns.
There are 20 boxes total.



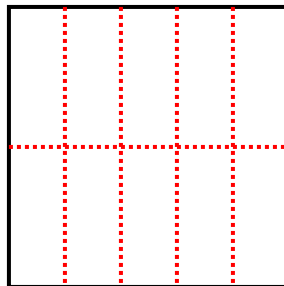
1) 3 rows
5 columns



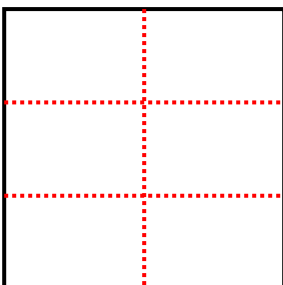
2) 3 rows
3 columns




3) 2 rows
5 columns




4) 3 rows
2 columns



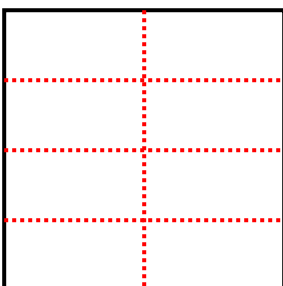
5) 4 rows
3 columns



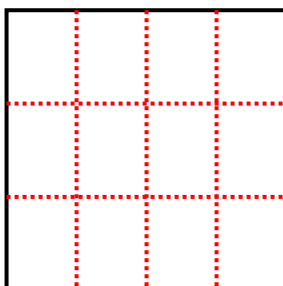
6) 4 rows
4 columns



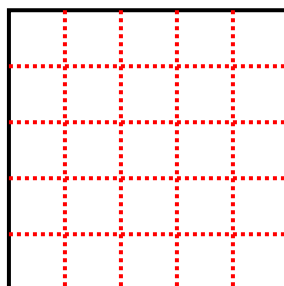
7) 4 rows
2 columns



8) 3 rows
4 columns



9) 5 rows
5 columns



Answers

1. 15

2. 9

3. 10

4. 6

5. 12

6. 16

7. 8

8. 12

9. 25