



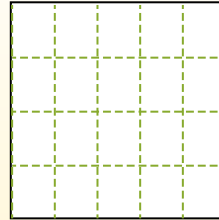
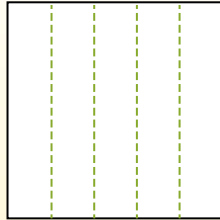
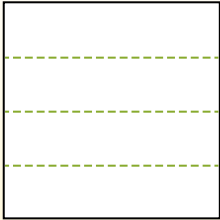
Partition the shape as described and then count to find the number of boxes.

Answers

Rows go left to right.


Columns go up and down.

This has 4 rows and 5 columns.
There are 20 boxes total.




1. _____
2. _____
3. _____
4. _____
5. _____
6. _____
7. _____
8. _____
9. _____


1) 2 rows
4 columns




2) 5 rows
2 columns




3) 3 rows
4 columns




4) 3 rows
5 columns




5) 2 rows
3 columns



6) 4 rows
3 columns




7) 5 rows
3 columns



8) 3 rows
2 columns



9) 3 rows
3 columns



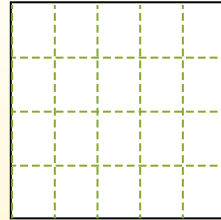
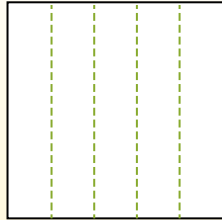
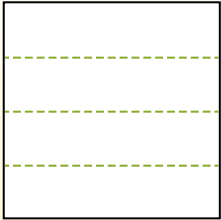


Partition the shape as described and then count to find the number of boxes.

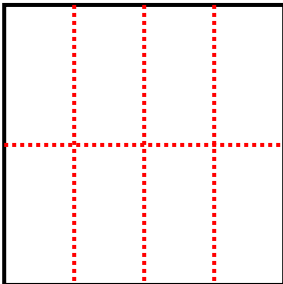
Rows go left to right.

Columns go up and down.

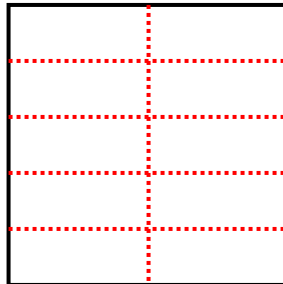
This has 4 rows and 5 columns.
There are 20 boxes total.



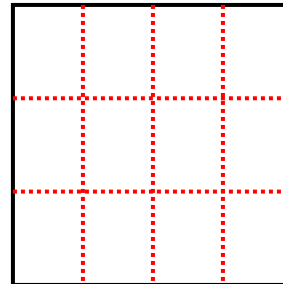
1) 2 rows
4 columns



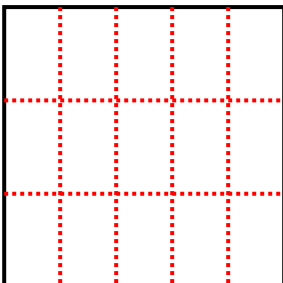
2) 5 rows
2 columns



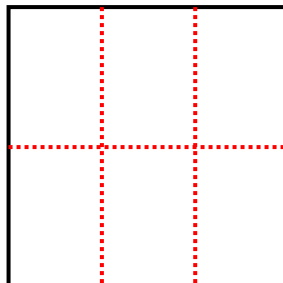
3) 3 rows
4 columns



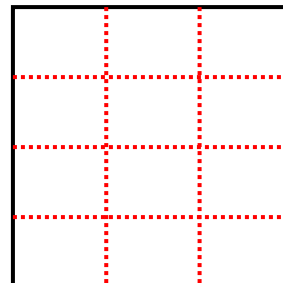
4) 3 rows
5 columns



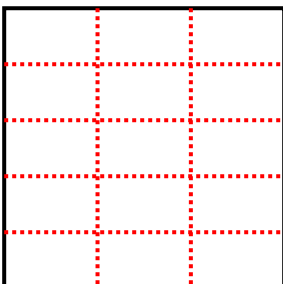
5) 2 rows
3 columns



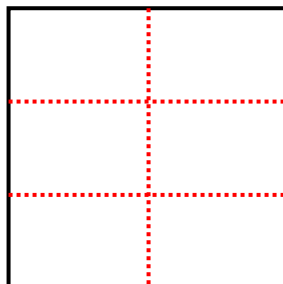
6) 4 rows
3 columns



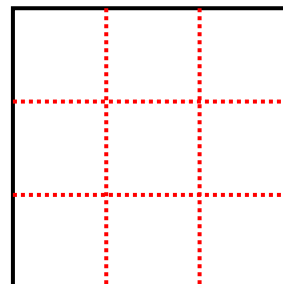
7) 5 rows
3 columns



8) 3 rows
2 columns



9) 3 rows
3 columns



Answers

1. 8

2. 10

3. 12

4. 15

5. 6

6. 12

7. 15

8. 6

9. 9