


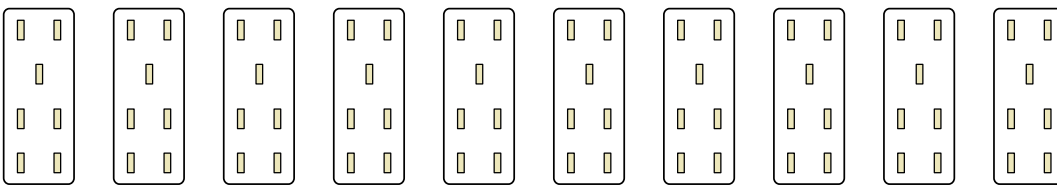


Express each set as a multiplication problem.

Answers

Ex) 

Ex. $10 \times 10 = 100$

1) 

1. _____


2. _____

3. _____

2) 

4. _____

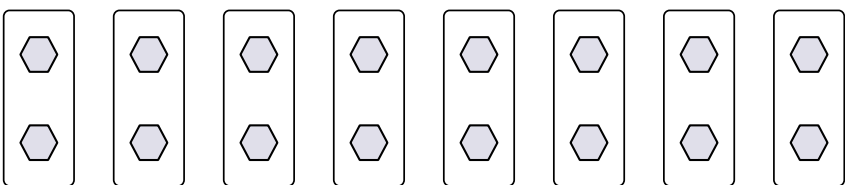
5. _____

3) 

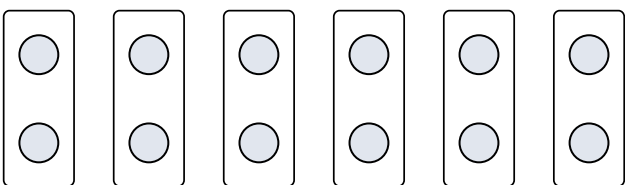
6. _____

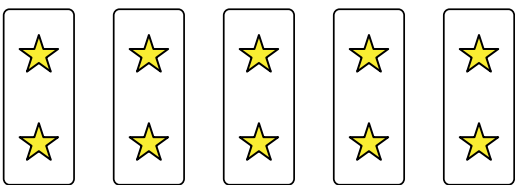
7. _____


8. _____

4) 

5) 

6) 

7) 

8) 



Express each set as a multiplication problem.

Ex)

1)

2)

3)

4)

5)

6)

7)

8)

Answers

Ex. 10×10=100

1. 10×7=70

2. 4×7=28

3. 10×6=60

4. 8×2=16

5. 3×6=18

6. 6×2=12

7. 5×2=10

8. 5×7=35