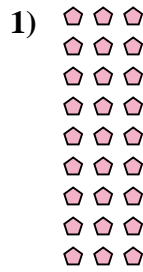
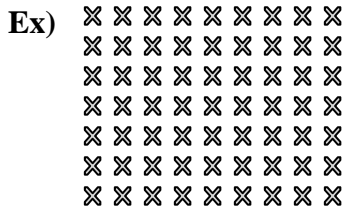




Write each array as a multiplication problem and solve.



Answers

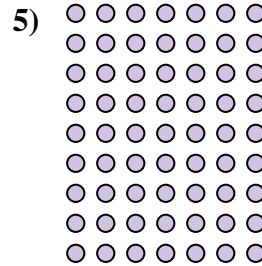


Ex. 7 × 9 = 63

1. _____

2. _____

3. _____

4. _____






5. _____

6. _____

7. _____


8. _____

9. _____



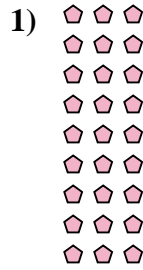

10. _____

11. _____





Write each array as a multiplication problem and solve.



Answers

Ex. 7 × 9 = 63

1. 9 × 3 = 27

2. 6 × 2 = 12

3. 9 × 4 = 36

4. 6 × 5 = 30

5. 9 × 7 = 63

6. 6 × 10 = 60

7. 7 × 6 = 42

8. 4 × 10 = 40

9. 5 × 6 = 30

10. 2 × 3 = 6

11. 6 × 6 = 36

