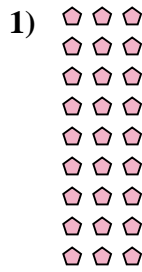
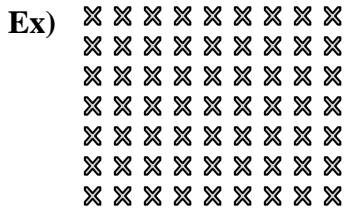




Write each array as a multiplication problem and solve.



Answers

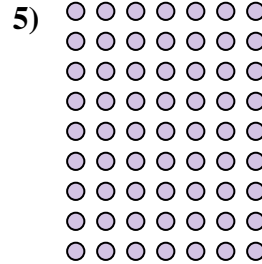


Ex. 7 × 9 = 63

1. _____

2. _____

3. _____

4. _____






5. _____

6. _____

7. _____


8. _____

9. _____



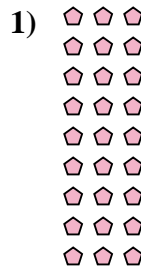
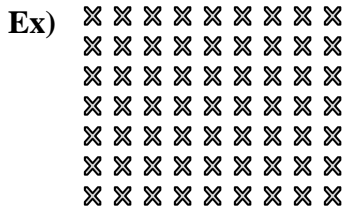
10. _____

11. _____





Write each array as a multiplication problem and solve.



Answers

Ex. 7 × 9 = 63

1. 9 × 3 = 27

2. 6 × 2 = 12

3. 9 × 4 = 36

4. 6 × 5 = 30

5. 9 × 7 = 63

6. 6 × 10 = 60





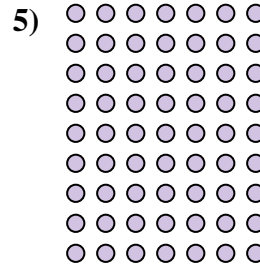


7. 7 × 6 = 42

8. 4 × 10 = 40

9. 5 × 6 = 30

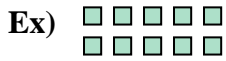
10. 2 × 3 = 6

11. 6 × 6 = 36





Write each array as a multiplication problem and solve.



Answers

Ex. 2 × 5 = 10

1. 6 × 10 = 60

2. 3 × 7 = 21

3. 10 × 3 = 30

4. 3 × 8 = 24

5. 7 × 3 = 21

6. 9 × 5 = 45

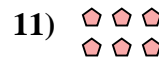




7. 9 × 6 = 54

8. 4 × 10 = 40

9. 6 × 9 = 54

10. 6 × 5 = 30


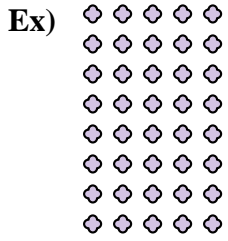
11. 2 × 3 = 6





Write each array as a multiplication problem and solve.

Answers



Ex. 8 x 5 = 40

1. _____

2. _____

3. _____

4. _____





5. _____

6. _____

7. _____

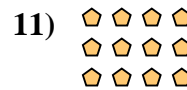

8. _____

9. _____




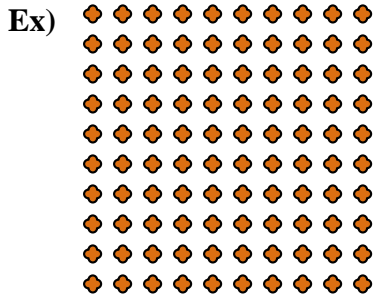
10. _____

11. _____





Write each array as a multiplication problem and solve.



Answers

Ex. 10 × 10 = 100

1. 10 × 7 = 70

2. 4 × 7 = 28

3. 10 × 6 = 60

4. 8 × 2 = 16

5. 3 × 6 = 18

6. 6 × 2 = 12



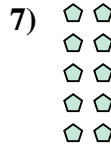


7. 5 × 2 = 10

8. 5 × 7 = 35

9. 5 × 5 = 25



10. 9 × 9 = 81

11. 3 × 8 = 24





Write each array as a multiplication problem and solve.



Answers

Ex. 9 × 5 = 45

1. 8 × 2 = 16

2. 6 × 9 = 54

3. 3 × 7 = 21

4. 2 × 9 = 18

5. 3 × 4 = 12

6. 8 × 10 = 80





7. 10 × 9 = 90

8. 2 × 10 = 20

9. 4 × 2 = 8


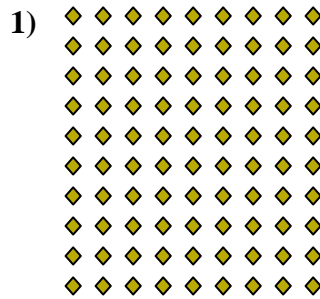

10. 3 × 6 = 18

11. 10 × 5 = 50





Write each array as a multiplication problem and solve.



Answers

Ex. 6 × 3 = 18

1. 10 × 9 = 90

2. 9 × 5 = 45

3. 5 × 2 = 10

4. 8 × 4 = 32

5. 9 × 10 = 90

6. 3 × 2 = 6

7. 4 × 9 = 36

8. 10 × 3 = 30

9. 10 × 7 = 70

10. 2 × 8 = 16

11. 3 × 4 = 12

