




Write each array as a multiplication problem and solve.



Answers

Ex. 5 × 5 = 25

1. _____

2. _____

3. _____

4. _____

5. _____

6. _____




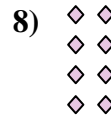


7. _____

8. _____

9. _____


10. _____

11. _____





Write each array as a multiplication problem and solve.



Answers

Ex. 5 × 5 = 25

1. 9 × 10 = 90

2. 5 × 7 = 35

3. 6 × 4 = 24

4. 4 × 10 = 40

5. 3 × 3 = 9

6. 7 × 2 = 14

7. 9 × 8 = 72

8. 4 × 2 = 8

9. 10 × 6 = 60

10. 10 × 4 = 40

11. 8 × 3 = 24

