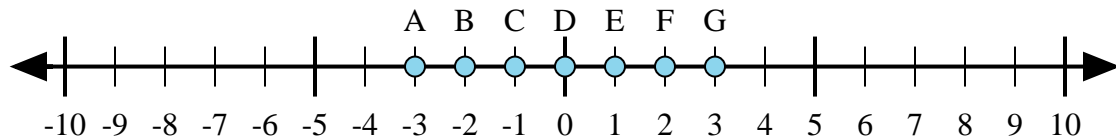




Determine which letter in the numberline best represents the answer to each problem.

Answers



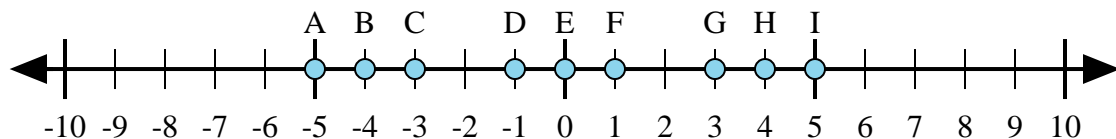
1) $1 + 2 =$

2) $(-1) + (-2) =$

3) $(-2) + 1 =$

4) $2 + (-1) =$

5) $1 + (-2) =$



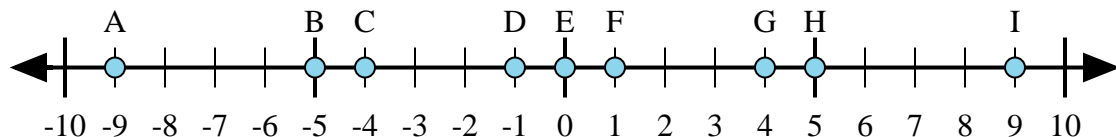
6) $4 + (-1) =$

7) $(-4) + (-1) =$

8) $(-4) + 1 =$

9) $(-1) + 4 =$

10) $1 + (-4) =$



11) $5 + (-4) =$

12) $4 + (-5) =$

13) $(-5) + 4 =$

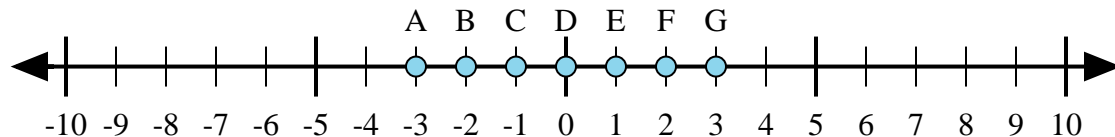
14) $5 + 4 =$

15) $(-4) + 5 =$

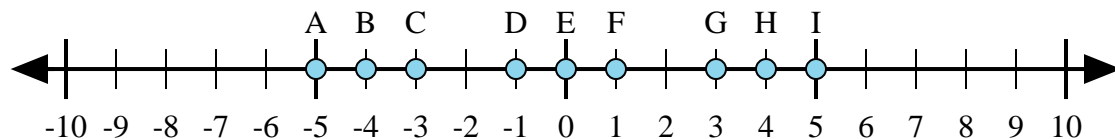
1. _____
2. _____
3. _____
4. _____
5. _____
6. _____
7. _____
8. _____
9. _____
10. _____
11. _____
12. _____
13. _____
14. _____
15. _____



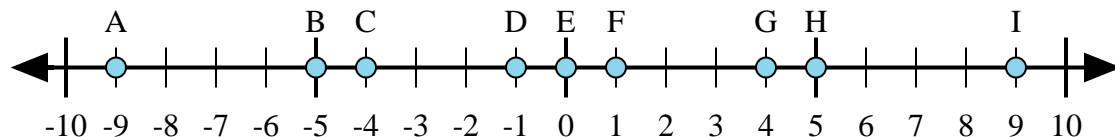
Determine which letter in the numberline best represents the answer to each problem.



- 1) $1 + 2 =$
- 2) $(-1) + (-2) =$
- 3) $(-2) + 1 =$
- 4) $2 + (-1) =$
- 5) $1 + (-2) =$



- 6) $4 + (-1) =$
- 7) $(-4) + (-1) =$
- 8) $(-4) + 1 =$
- 9) $(-1) + 4 =$
- 10) $1 + (-4) =$



- 11) $5 + (-4) =$
- 12) $4 + (-5) =$
- 13) $(-5) + 4 =$
- 14) $5 + 4 =$
- 15) $(-4) + 5 =$

Answers

1. **G**
2. **A**
3. **C**
4. **E**
5. **C**
6. **G**
7. **A**
8. **C**
9. **G**
10. **C**
11. **F**
12. **D**
13. **D**
14. **I**
15. **F**