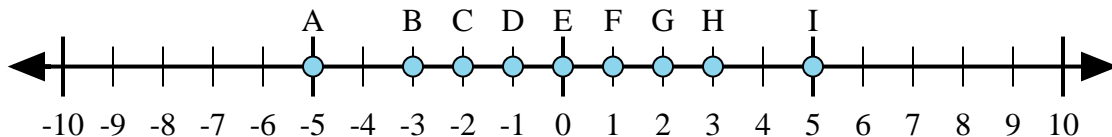




Determine which letter in the numberline best represents the answer to each problem.

Answers



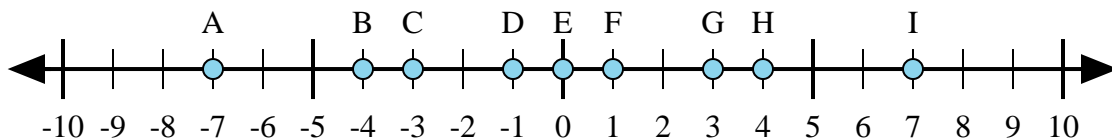
1) $3 + (-2) =$

2) $(-2) + 3 =$

3) $2 + 3 =$

4) $(-2) + (-3) =$

5) $2 + (-3) =$



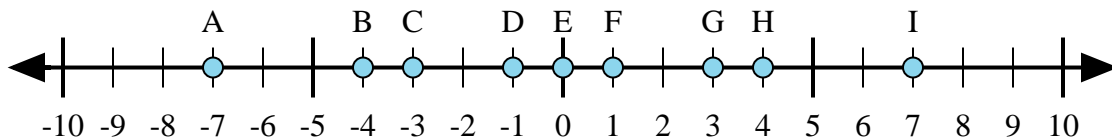
6) $4 + (-3) =$

7) $3 + 4 =$

8) $(-4) + 3 =$

9) $(-3) + 4 =$

10) $(-3) + (-4) =$



11) $4 + 3 =$

12) $4 + (-3) =$

13) $(-4) + 3 =$

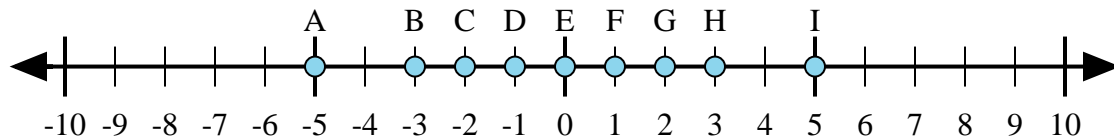
14) $(-3) + 4 =$

15) $(-4) + (-3) =$

1. _____
2. _____
3. _____
4. _____
5. _____
6. _____
7. _____
8. _____
9. _____
10. _____
11. _____
12. _____
13. _____
14. _____
15. _____



Determine which letter in the numberline best represents the answer to each problem.



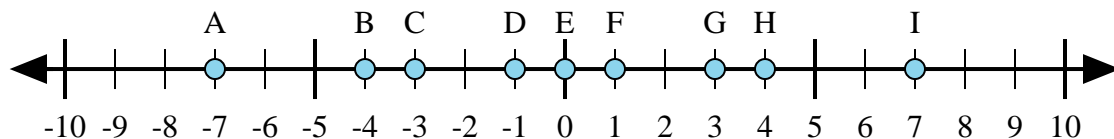
1) $3 + (-2) =$

2) $(-2) + 3 =$

3) $2 + 3 =$

4) $(-2) + (-3) =$

5) $2 + (-3) =$



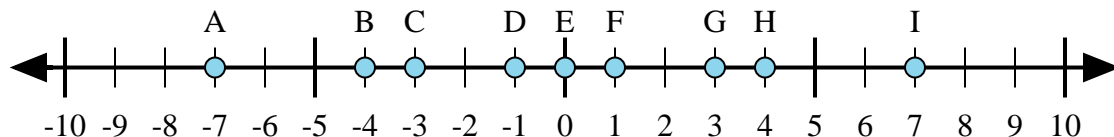
6) $4 + (-3) =$

7) $3 + 4 =$

8) $(-4) + 3 =$

9) $(-3) + 4 =$

10) $(-3) + (-4) =$



11) $4 + 3 =$

12) $4 + (-3) =$

13) $(-4) + 3 =$

14) $(-3) + 4 =$

15) $(-4) + (-3) =$

Answers1. F2. F3. I4. A5. D6. F7. I8. D9. F10. A11. I12. F13. D14. F15. A