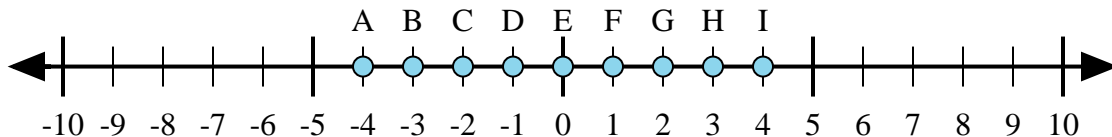




Determine which letter in the numberline best represents the answer to each problem.

Answers



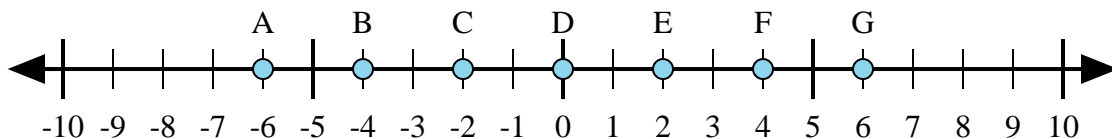
1) $3 + (-1) =$

2) $(-1) + (-3) =$

3) $(-1) + 3 =$

4) $1 + 3 =$

5) $(-3) + 1 =$



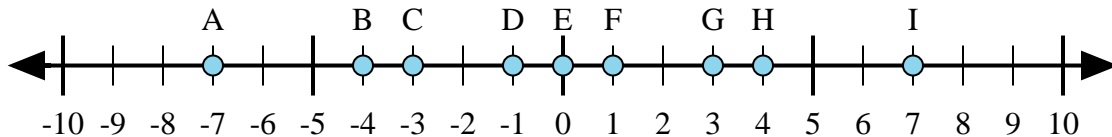
6) $(-2) + 4 =$

7) $(-4) + 2 =$

8) $4 + (-2) =$

9) $2 + (-4) =$

10) $(-4) + (-2) =$



11) $(-3) + (-4) =$

12) $(-3) + 4 =$

13) $3 + (-4) =$

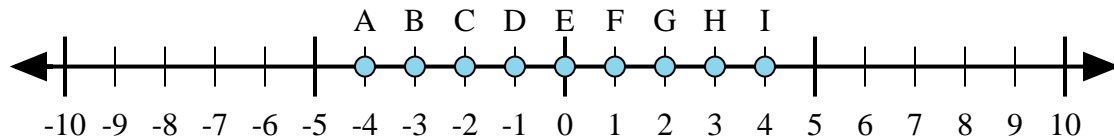
14) $(-4) + 3 =$

15) $3 + 4 =$

1. _____
2. _____
3. _____
4. _____
5. _____
6. _____
7. _____
8. _____
9. _____
10. _____
11. _____
12. _____
13. _____
14. _____
15. _____



Determine which letter in the numberline best represents the answer to each problem.



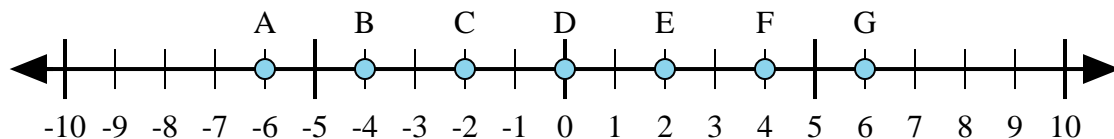
1) $3 + (-1) =$

2) $(-1) + (-3) =$

3) $(-1) + 3 =$

4) $1 + 3 =$

5) $(-3) + 1 =$



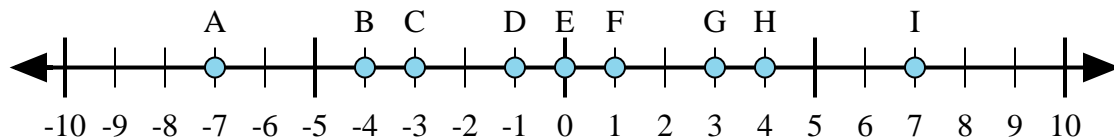
6) $(-2) + 4 =$

7) $(-4) + 2 =$

8) $4 + (-2) =$

9) $2 + (-4) =$

10) $(-4) + (-2) =$



11) $(-3) + (-4) =$

12) $(-3) + 4 =$

13) $3 + (-4) =$

14) $(-4) + 3 =$

15) $3 + 4 =$

Answers1. **G** 2. **A** 3. **G** 4. **I** 5. **C** 6. **E** 7. **C** 8. **E** 9. **C** 10. **A** 11. **A** 12. **F** 13. **D** 14. **D** 15. **I**