




Solve each problem.


Answers

- 1) Which letter best shows -101?




1. _____

- 2) Which letter best shows -99?



2. _____

- 3) Which letter best shows -47?



3. _____

- 4) Which letter best shows -124?




4. _____

- 5) Which letter best shows -67?




5. _____

- 6) Which letter best shows -99?



6. _____

- 7) Which letter best shows -31?



7. _____

- 8) Which letter best shows -110?



8. _____

- 9) Which letter best shows -62?



9. _____

- 10) Which letter best shows -22?




10. _____




Solve each problem.

Answers


1) Which letter best shows -101?

1. **A**

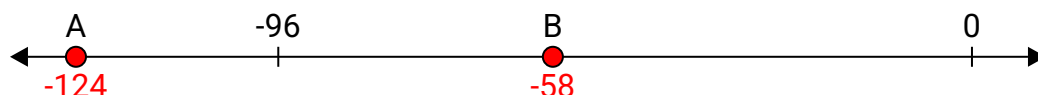
2) Which letter best shows -99?

2. **A**

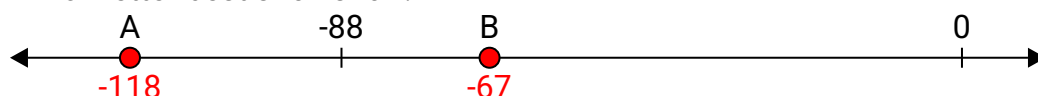
3) Which letter best shows -47?

3. **B**


4) Which letter best shows -124?

4. **A**

5) Which letter best shows -67?

5. **B**


6) Which letter best shows -99?

6. **A**

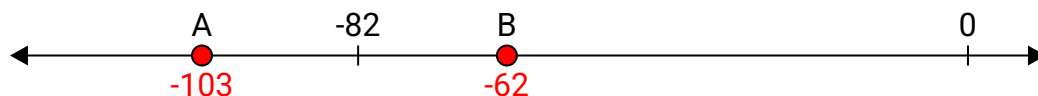
7) Which letter best shows -31?

7. **B**

8) Which letter best shows -110?

8. **A**

9) Which letter best shows -62?

9. **B**

10) Which letter best shows -22?

10. **B**