




Solve each problem.


**Answers**

1) Which letter best shows -37?



1. \_\_\_\_\_

2) Which letter best shows -113?




2. \_\_\_\_\_

3) Which letter best shows -97?



3. \_\_\_\_\_

4) Which letter best shows -80?



4. \_\_\_\_\_

5) Which letter best shows -40?



5. \_\_\_\_\_

6) Which letter best shows -101?




6. \_\_\_\_\_

7) Which letter best shows -22?




7. \_\_\_\_\_

8) Which letter best shows -105?




8. \_\_\_\_\_

9) Which letter best shows -115?



9. \_\_\_\_\_

10) Which letter best shows -97?

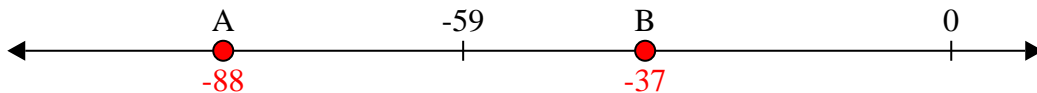


10. \_\_\_\_\_

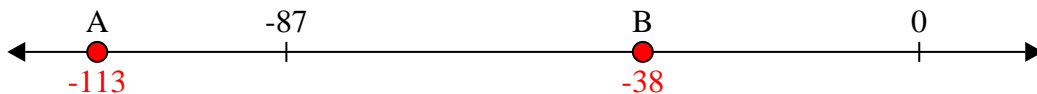


Solve each problem.

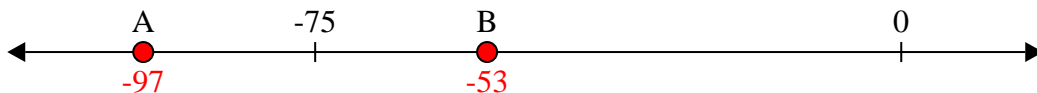
1) Which letter best shows -37?



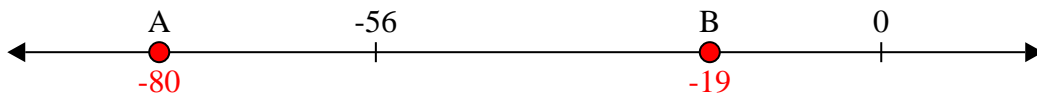
2) Which letter best shows -113?




3) Which letter best shows -97?




4) Which letter best shows -80?




5) Which letter best shows -40?




6) Which letter best shows -101?




7) Which letter best shows -22?



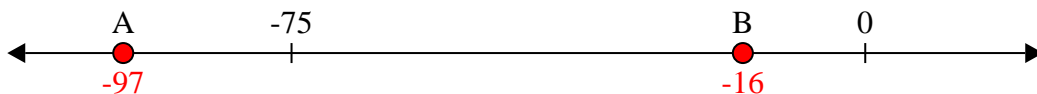
8) Which letter best shows -105?



9) Which letter best shows -115?



10) Which letter best shows -97?



**Answers**

1. **B**

2. **A**

3. **A**

4. **A**

5. **B**

6. **A**

7. **B**

8. **A**

9. **A**

10. **A**