




Solve each problem.


Answers

1) Which letter best shows -128?




1. _____

2) Which letter best shows -114?



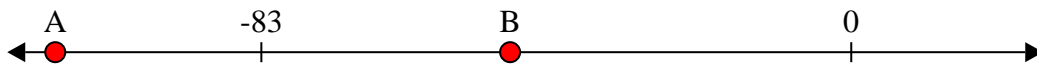
2. _____

3) Which letter best shows -76?



3. _____

4) Which letter best shows -48?



4. _____

5) Which letter best shows -47?



5. _____

6) Which letter best shows -115?



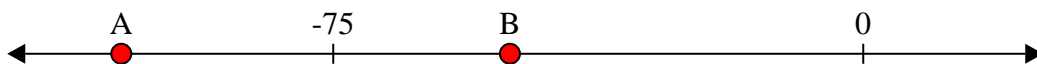
6. _____

7) Which letter best shows -115?




7. _____

8) Which letter best shows -105?




8. _____

9) Which letter best shows -10?



9. _____

10) Which letter best shows -82?




10. _____

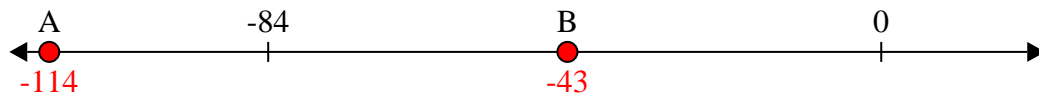


Solve each problem.

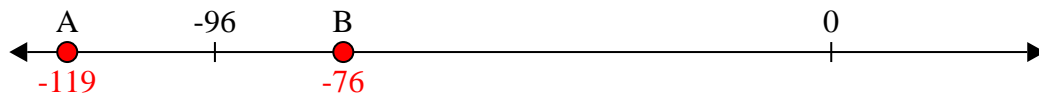
1) Which letter best shows -128?



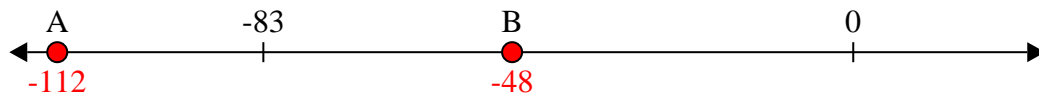
2) Which letter best shows -114?




3) Which letter best shows -76?




4) Which letter best shows -48?




5) Which letter best shows -47?



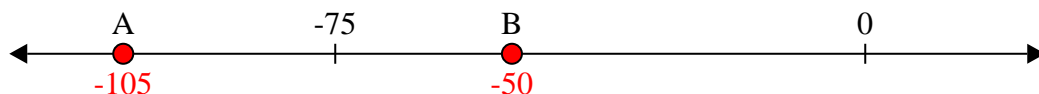
6) Which letter best shows -115?




7) Which letter best shows -115?




8) Which letter best shows -105?



9) Which letter best shows -10?



10) Which letter best shows -82?



Answers

1. **A**

2. **A**

3. **B**

4. **B**

5. **B**

6. **A**

7. **A**

8. **A**

9. **B**

10. **A**