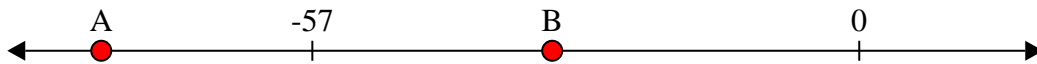




Solve each problem.


Answers

1) Which letter best shows -32?




1. _____

2) Which letter best shows -114?




2. _____

3) Which letter best shows -117?



3. _____

4) Which letter best shows -111?




4. _____

5) Which letter best shows -33?



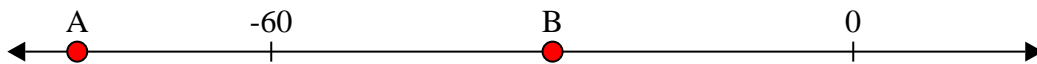
5. _____

6) Which letter best shows -29?




6. _____

7) Which letter best shows -80?



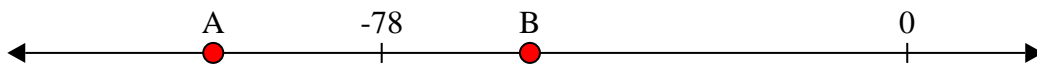
7. _____

8) Which letter best shows -86?




8. _____

9) Which letter best shows -56?



9. _____

10) Which letter best shows -24?

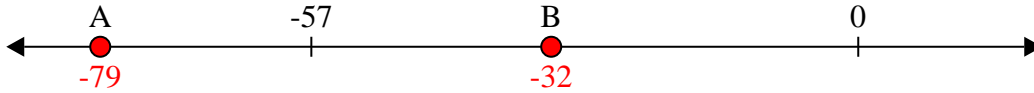


10. _____

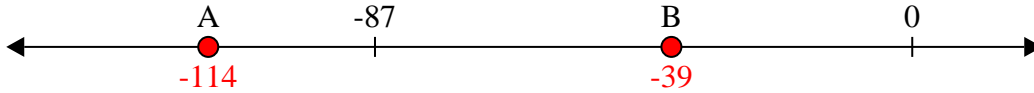


Solve each problem.

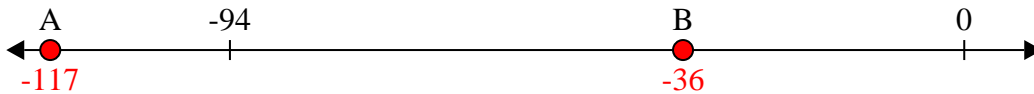
1) Which letter best shows -32?



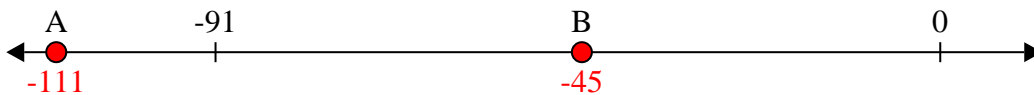
2) Which letter best shows -114?




3) Which letter best shows -117?




4) Which letter best shows -111?



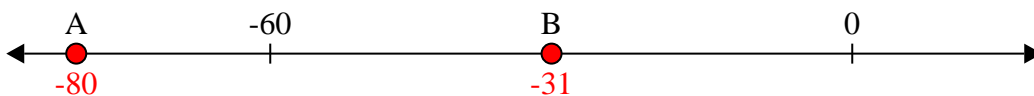
5) Which letter best shows -33?




6) Which letter best shows -29?



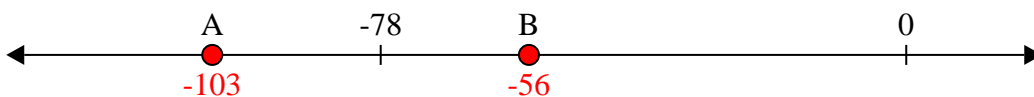
7) Which letter best shows -80?



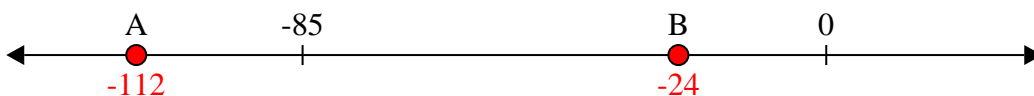
8) Which letter best shows -86?



9) Which letter best shows -56?



10) Which letter best shows -24?



Answers

1. **B**

2. **A**

3. **A**

4. **A**

5. **B**

6. **B**

7. **A**

8. **A**

9. **B**

10. **B**